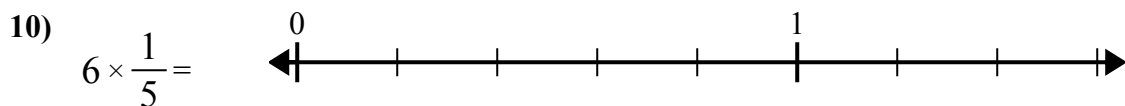
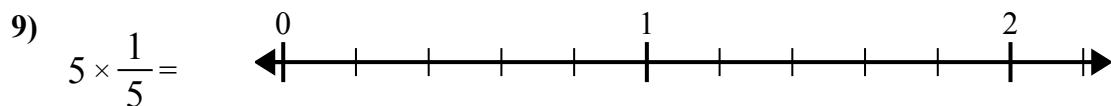
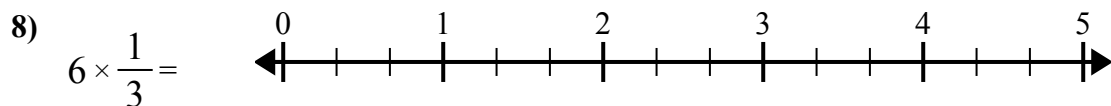
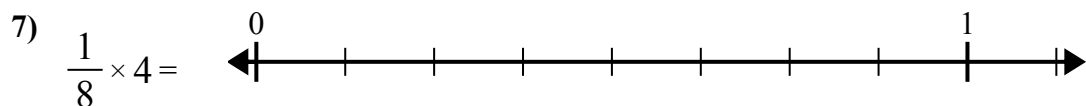
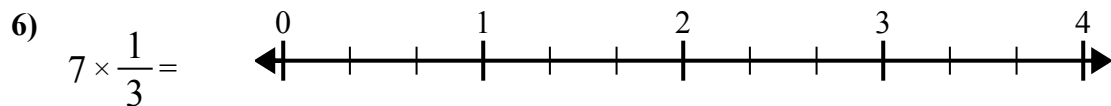
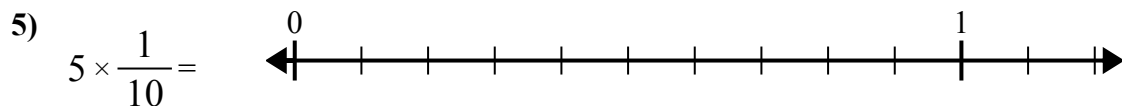
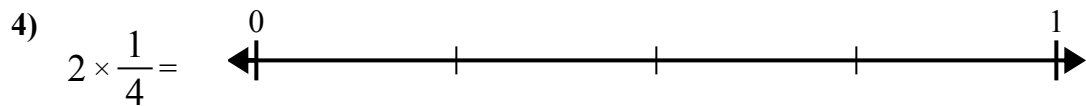
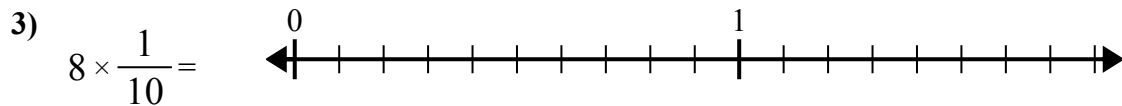
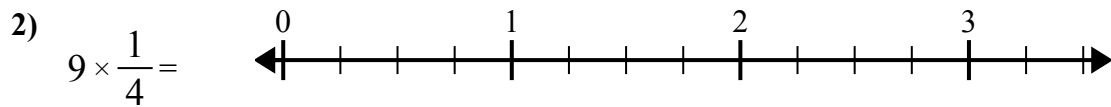
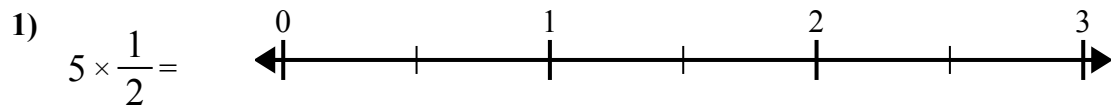




Используйте числовую прямую при решении.

Ответы

1. \_\_\_\_\_

2. \_\_\_\_\_

3. \_\_\_\_\_

4. \_\_\_\_\_

5. \_\_\_\_\_

6. \_\_\_\_\_

7. \_\_\_\_\_

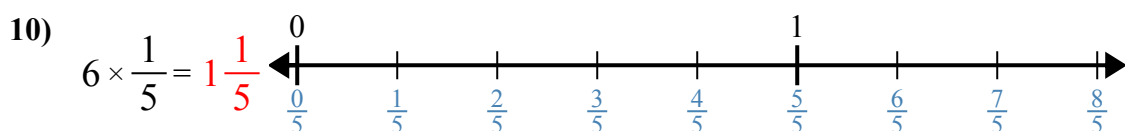
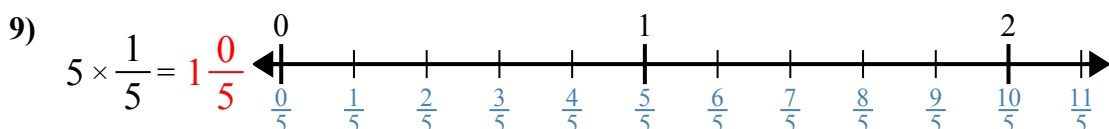
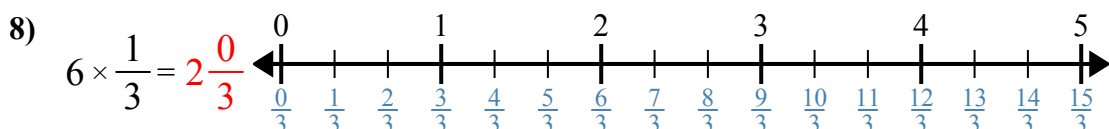
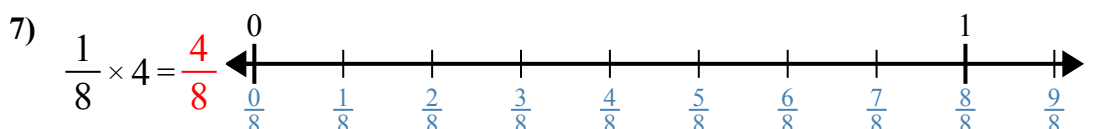
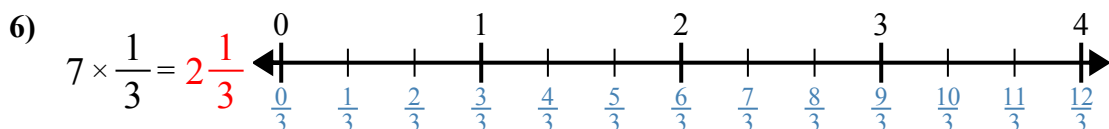
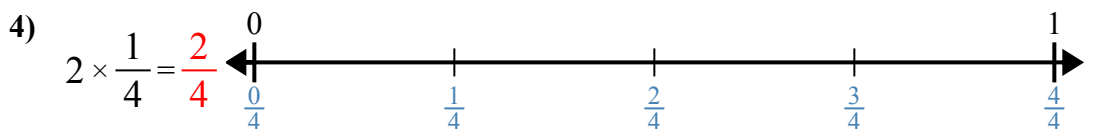
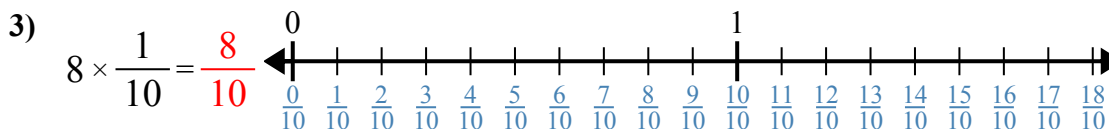
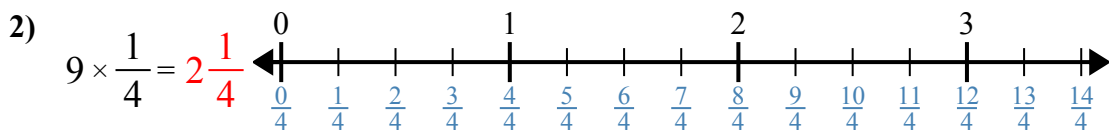
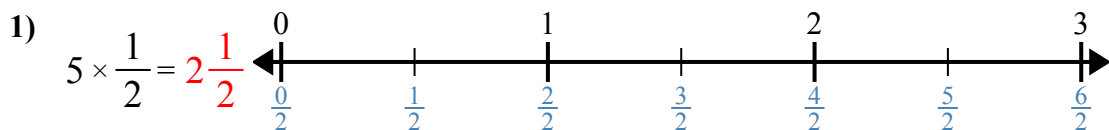
8. \_\_\_\_\_

9. \_\_\_\_\_

10. \_\_\_\_\_



Используйте числовую прямую при решении.

**Ответы**

1.  $2\frac{1}{2}$

2.  $2\frac{1}{4}$

3.  $\frac{8}{10}$

4.  $\frac{2}{4}$

5.  $\frac{5}{10}$

6.  $2\frac{1}{3}$

7.  $\frac{4}{8}$

8.  $2\frac{0}{3}$

9.  $1\frac{0}{5}$

10.  $1\frac{1}{5}$



Используйте числовую прямую при решении.

**Ответы**

$\frac{4}{8}$

$2\frac{1}{2}$

$1\frac{1}{5}$

$2\frac{1}{4}$

$2\frac{0}{3}$

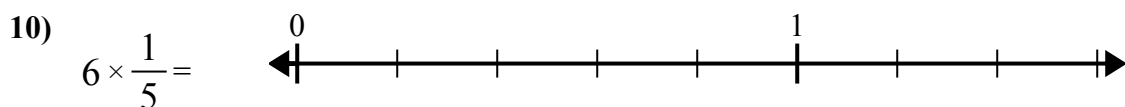
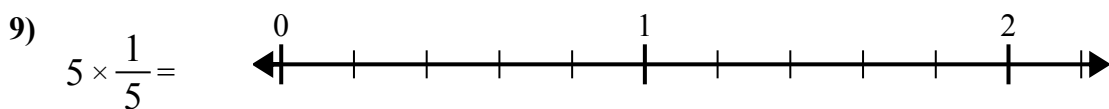
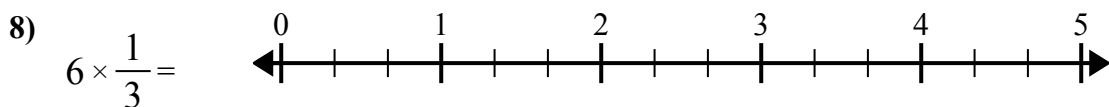
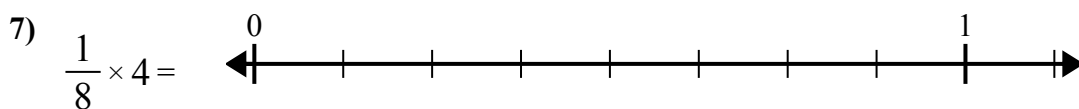
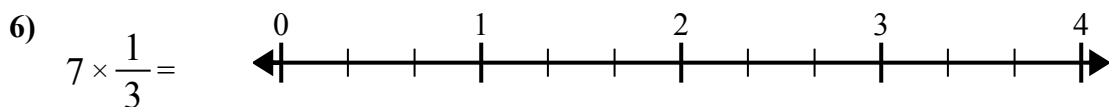
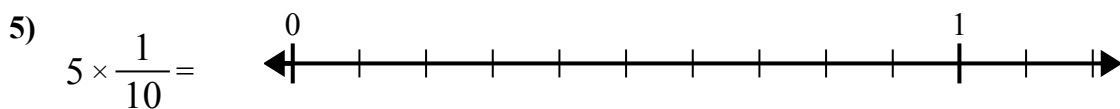
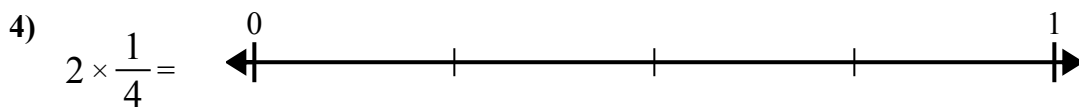
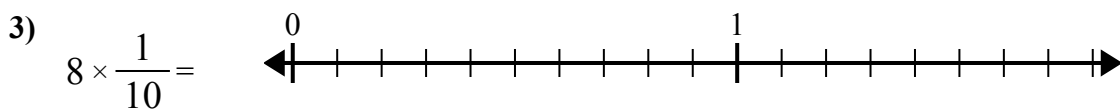
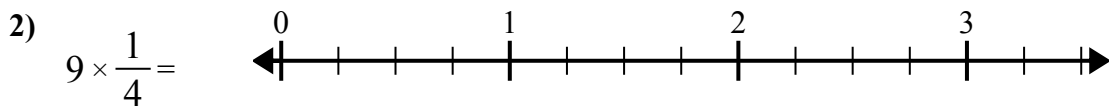
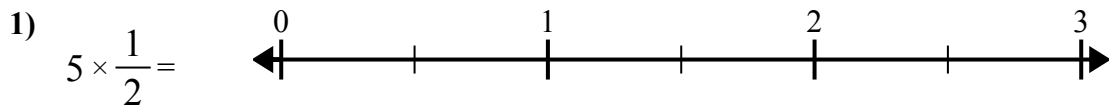
$\frac{8}{10}$

$1\frac{0}{5}$

$2\frac{1}{3}$

$\frac{5}{10}$

$\frac{2}{4}$



1. \_\_\_\_\_
2. \_\_\_\_\_
3. \_\_\_\_\_
4. \_\_\_\_\_
5. \_\_\_\_\_
6. \_\_\_\_\_
7. \_\_\_\_\_
8. \_\_\_\_\_
9. \_\_\_\_\_
10. \_\_\_\_\_