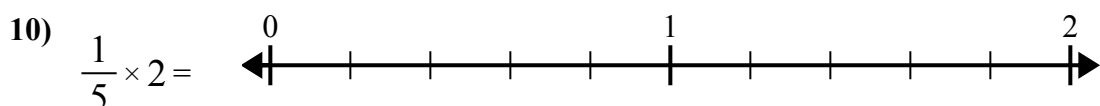
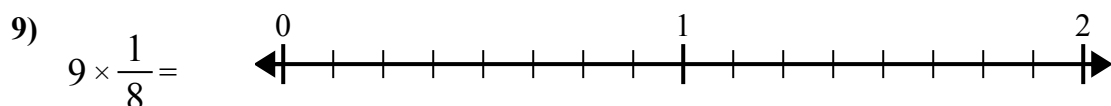
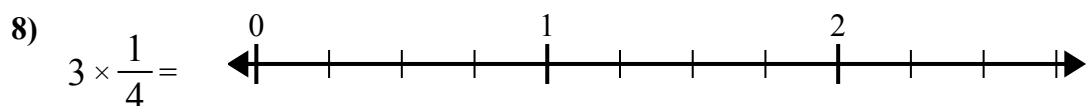
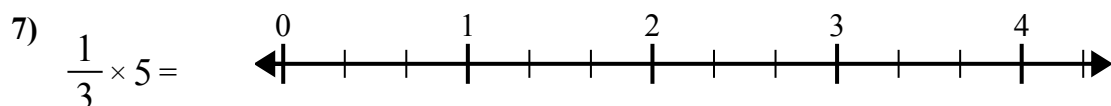
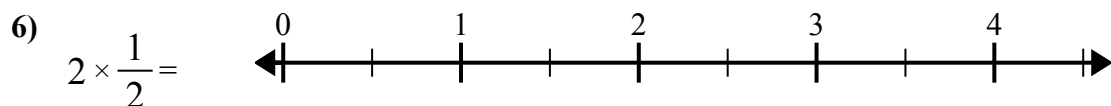
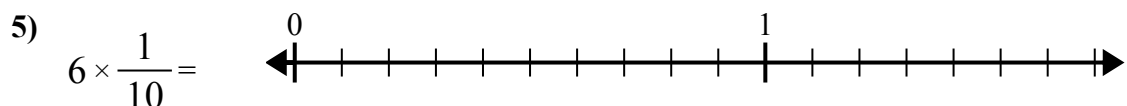
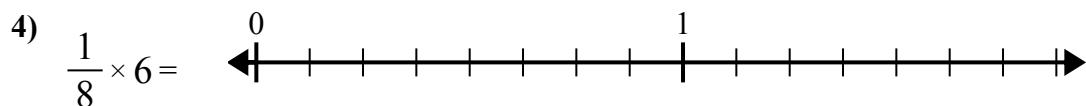
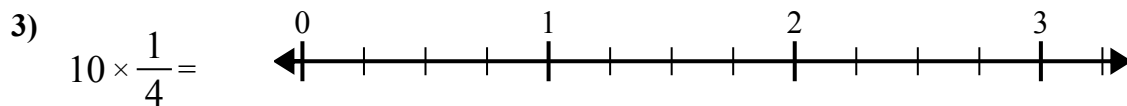
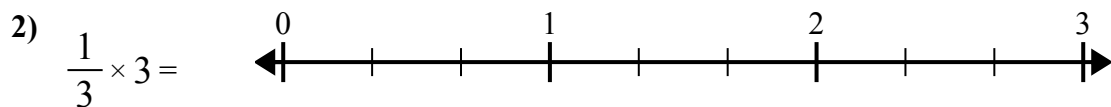
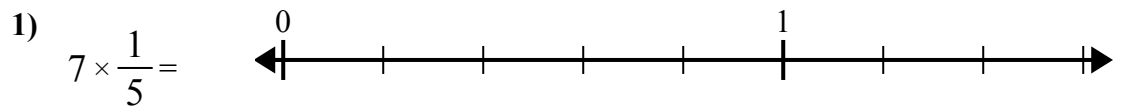




Используйте числовую прямую при решении.

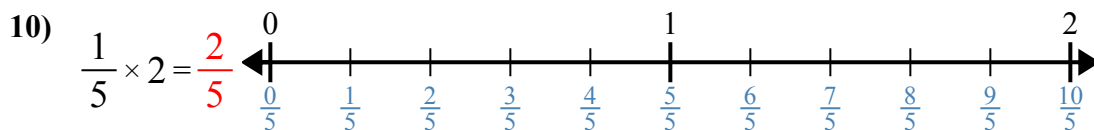
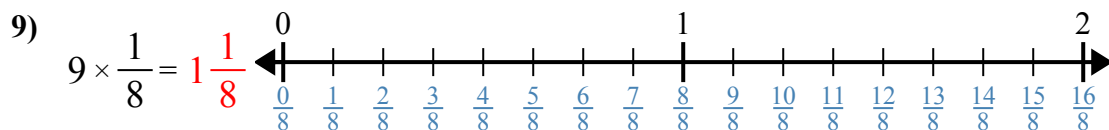
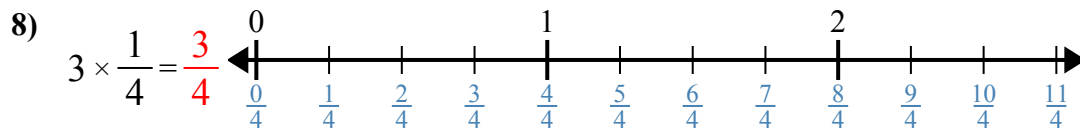
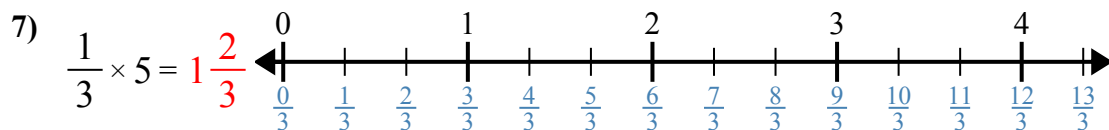
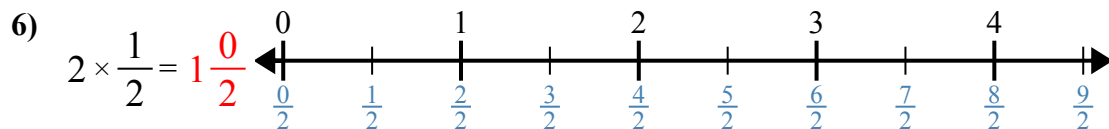
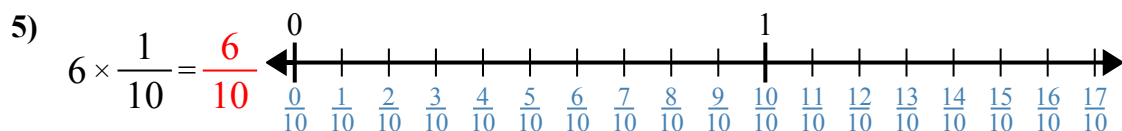
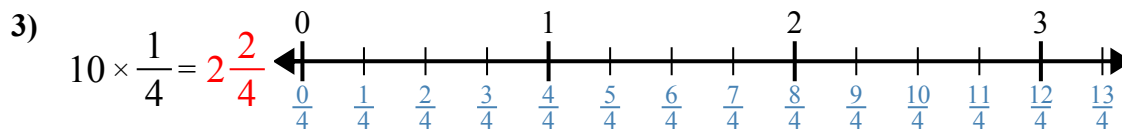
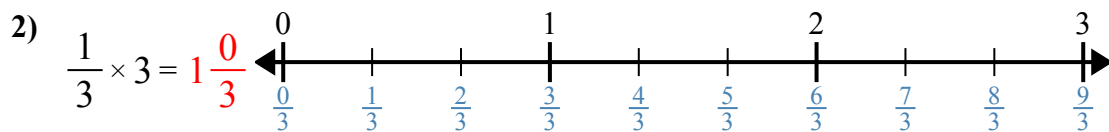
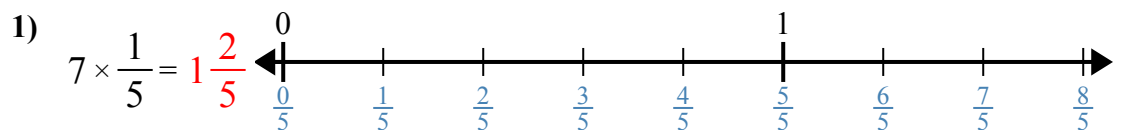


**Ответы**

1. \_\_\_\_\_
2. \_\_\_\_\_
3. \_\_\_\_\_
4. \_\_\_\_\_
5. \_\_\_\_\_
6. \_\_\_\_\_
7. \_\_\_\_\_
8. \_\_\_\_\_
9. \_\_\_\_\_
10. \_\_\_\_\_



Используйте числовую прямую при решении.

**Ответы**

1.  $1\frac{2}{5}$

2.  $1\frac{0}{3}$

3.  $2\frac{2}{4}$

4.  $\frac{6}{8}$

5.  $\frac{6}{10}$

6.  $1\frac{0}{2}$

7.  $1\frac{2}{3}$

8.  $\frac{3}{4}$

9.  $1\frac{1}{8}$

10.  $\frac{2}{5}$



Используйте числовую прямую при решении.

$1\frac{0}{3}$

$1\frac{0}{2}$

$\frac{6}{10}$

$\frac{2}{5}$

$1\frac{2}{5}$

$\frac{6}{8}$

$\frac{3}{4}$

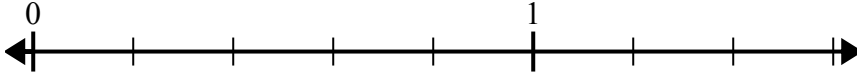
$1\frac{1}{8}$

$1\frac{2}{3}$

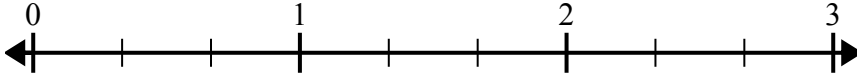
$2\frac{2}{4}$

**Ответы**

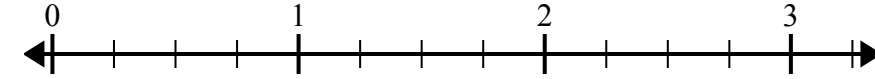
1)  $7 \times \frac{1}{5} =$



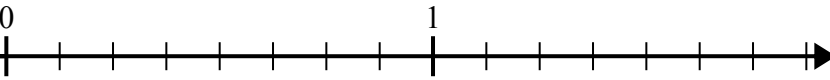
2)  $\frac{1}{3} \times 3 =$



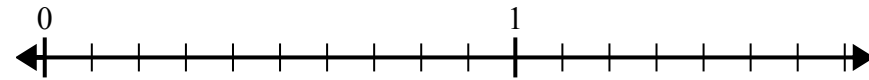
3)  $10 \times \frac{1}{4} =$



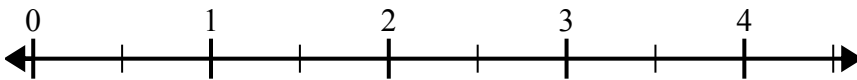
4)  $\frac{1}{8} \times 6 =$



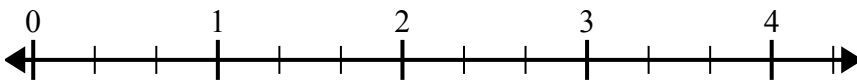
5)  $6 \times \frac{1}{10} =$



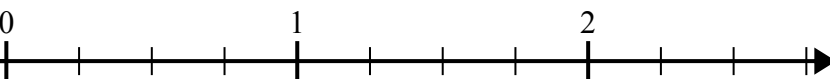
6)  $2 \times \frac{1}{2} =$



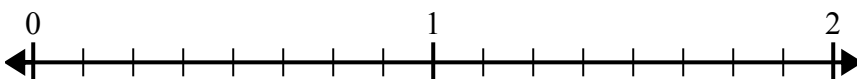
7)  $\frac{1}{3} \times 5 =$



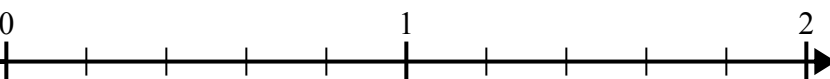
8)  $3 \times \frac{1}{4} =$



9)  $9 \times \frac{1}{8} =$



10)  $\frac{1}{5} \times 2 =$



1. \_\_\_\_\_
2. \_\_\_\_\_
3. \_\_\_\_\_
4. \_\_\_\_\_
5. \_\_\_\_\_
6. \_\_\_\_\_
7. \_\_\_\_\_
8. \_\_\_\_\_
9. \_\_\_\_\_
10. \_\_\_\_\_