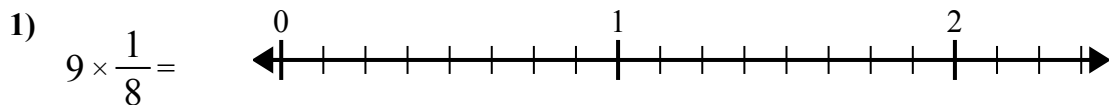


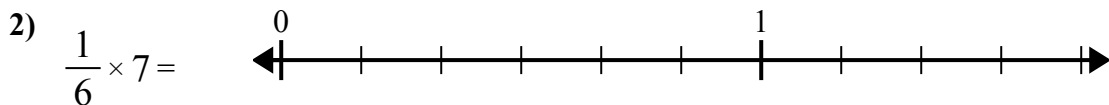


Используйте числовую прямую при решении.

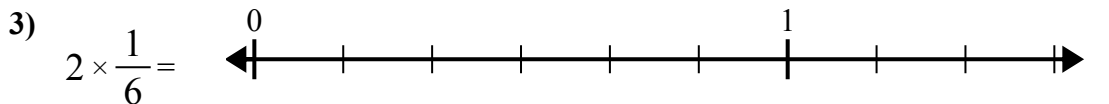
ОТВЕТЫ



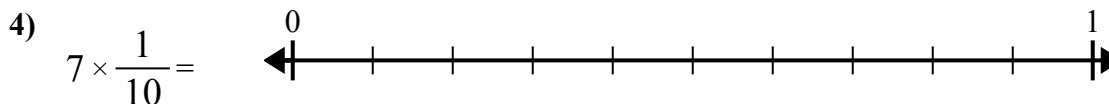
1. _____



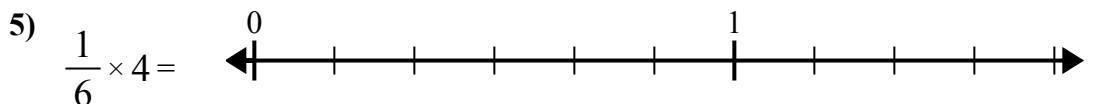
2. _____



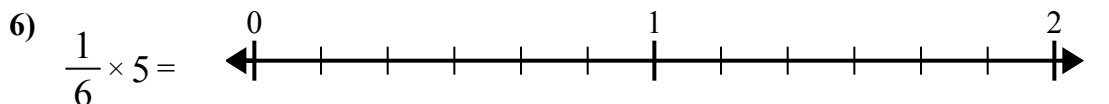
3. _____



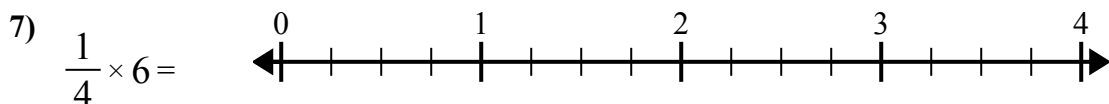
4. _____



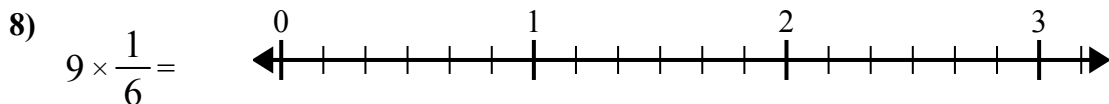
5. _____



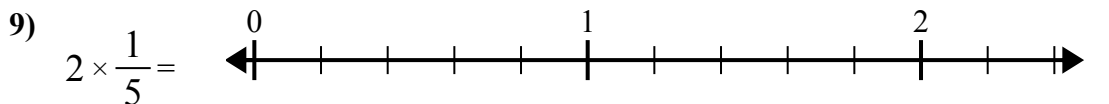
6. _____



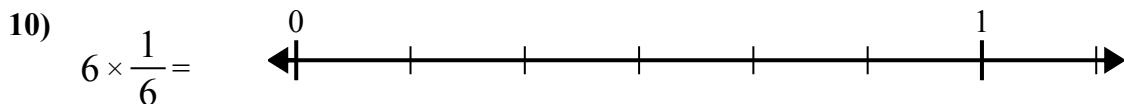
7. _____



8. _____



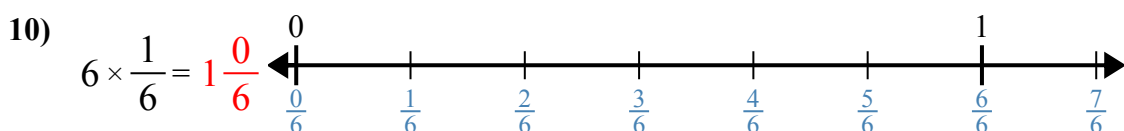
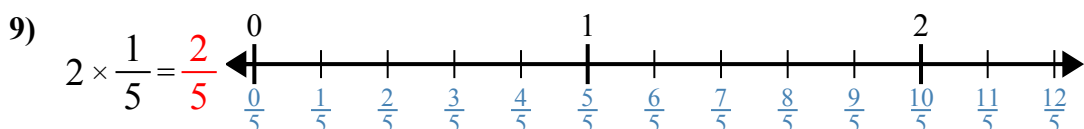
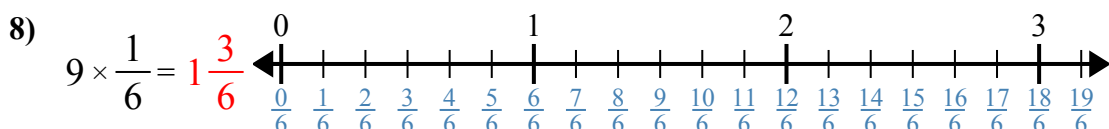
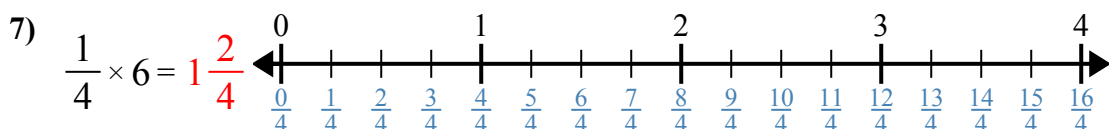
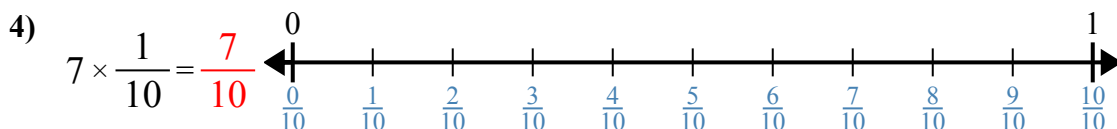
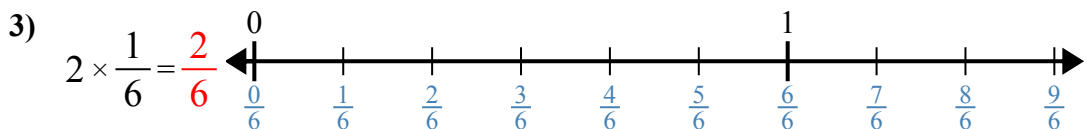
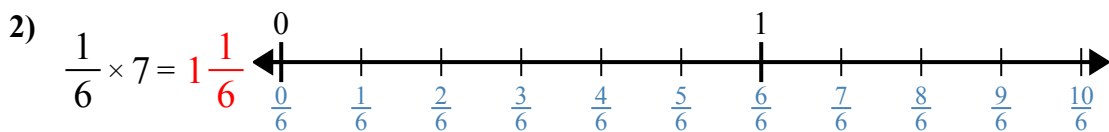
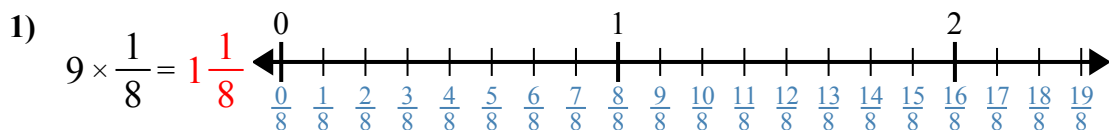
9. _____



10. _____



Используйте числовую прямую при решении.



Ответы

1. 1 1/8

2. 1 1/6

3. 2/6

4. 7/10

5. 4/6

6. 5/6

7. 1 2/4

8. 1 3/6

9. 2/5

10. 1 0/6



Используйте числовую прямую при решении.

Отвѣты

$1\frac{2}{4}$

$1\frac{3}{6}$

$\frac{4}{6}$

$1\frac{1}{8}$

$\frac{7}{10}$

$\frac{2}{5}$

$\frac{5}{6}$

$1\frac{1}{6}$

$1\frac{0}{6}$

$\frac{2}{6}$

1. _____
2. _____
3. _____
4. _____
5. _____
6. _____
7. _____
8. _____
9. _____
10. _____

