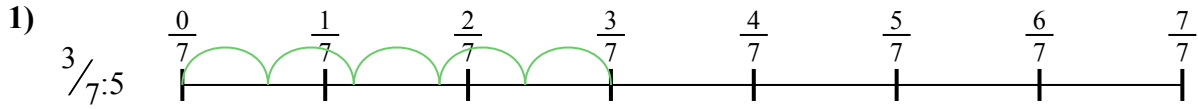




Используйте числовую прямую для решения задачи. Первая отмечена для Вас.

**ОТВЕТЫ**




1. \_\_\_\_\_

2. \_\_\_\_\_



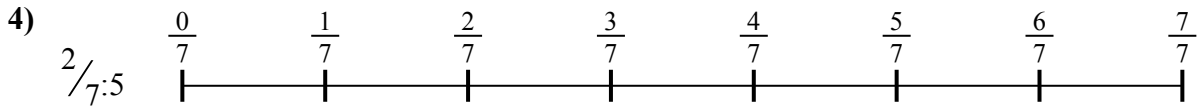
3. \_\_\_\_\_

4. \_\_\_\_\_




5. \_\_\_\_\_

6. \_\_\_\_\_







7. \_\_\_\_\_

8. \_\_\_\_\_



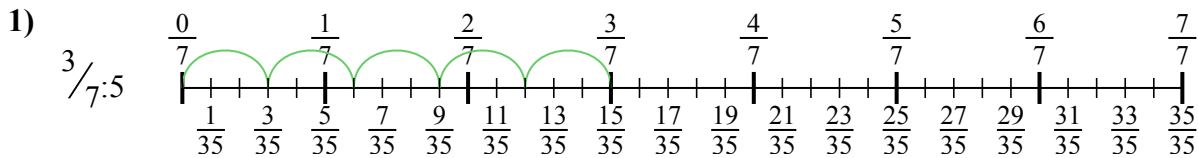
9. \_\_\_\_\_



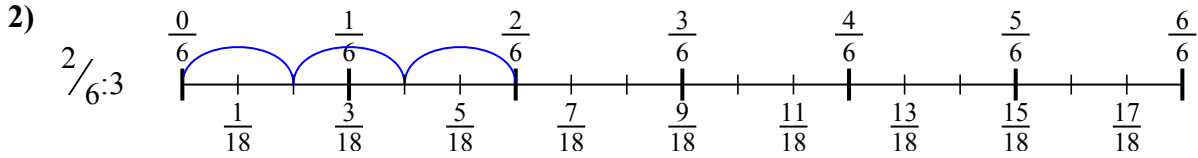


Используйте числовую прямую для решения задачи. Первая отмечена для Вас.

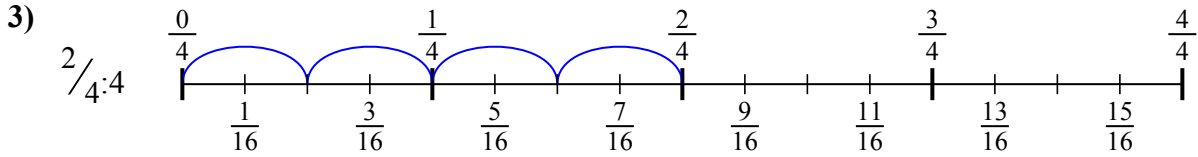
**ОТВЕТЫ**



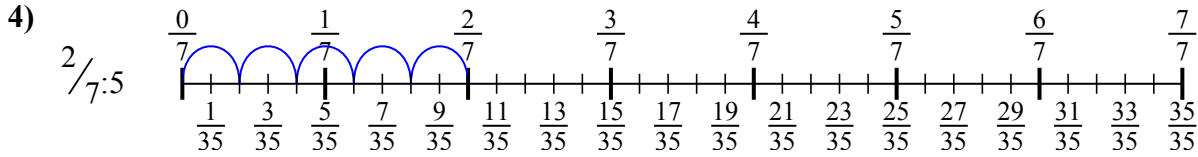
1.  $\frac{3}{35}$



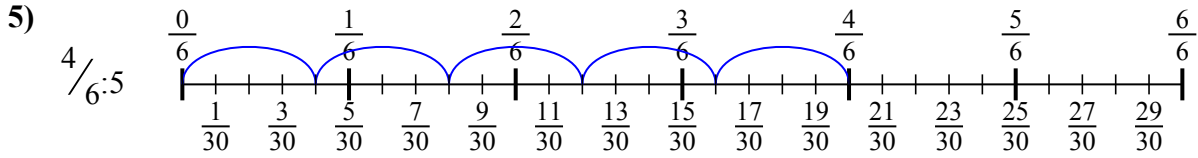
2.  $\frac{2}{18}$



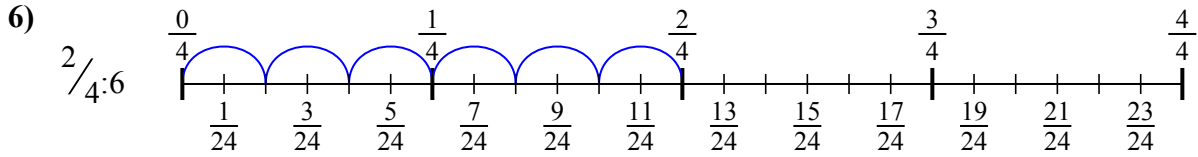
3.  $\frac{2}{16}$



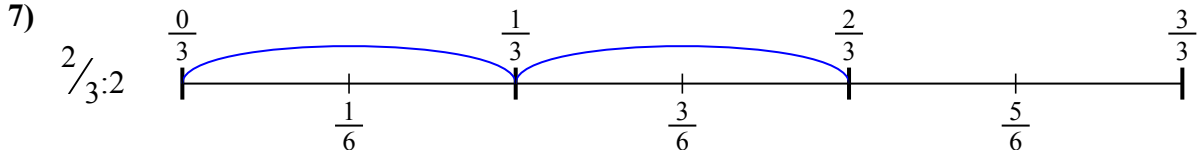
4.  $\frac{2}{35}$



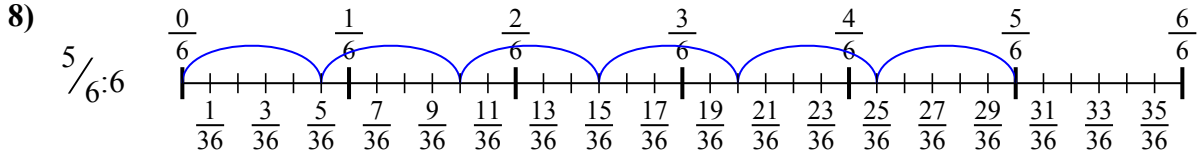
5.  $\frac{4}{30}$



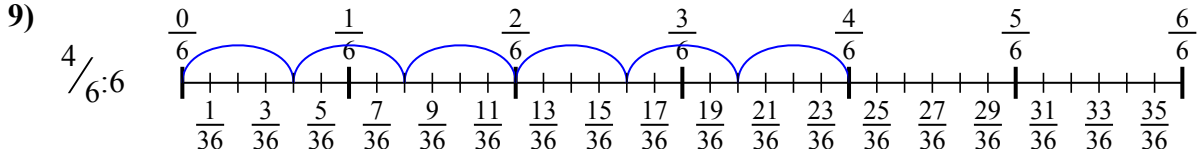
6.  $\frac{2}{24}$



7.  $\frac{2}{6}$



8.  $\frac{5}{36}$



9.  $\frac{4}{36}$



Используйте числовую прямую для решения задачи. Первая отмечена для Вас.

**ОТВЕТЫ**

$\frac{2}{18}$

$\frac{2}{24}$

$\frac{5}{36}$

$\frac{2}{16}$

$\frac{4}{36}$

$\frac{3}{35}$

$\frac{2}{35}$

$\frac{4}{30}$

$\frac{2}{6}$

1. \_\_\_\_\_

2. \_\_\_\_\_

3. \_\_\_\_\_

4. \_\_\_\_\_

5. \_\_\_\_\_

6. \_\_\_\_\_

7. \_\_\_\_\_

8. \_\_\_\_\_

9. \_\_\_\_\_

