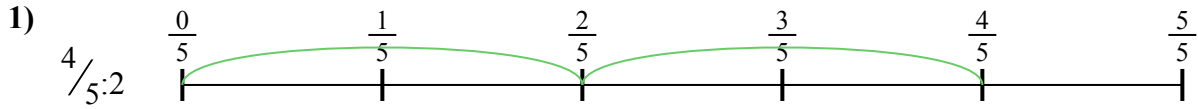





Используйте числовую прямую для решения задачи. Первая отмечена для Вас.

**ОТВЕТЫ**




1. \_\_\_\_\_

2. \_\_\_\_\_




3. \_\_\_\_\_

4. \_\_\_\_\_




5. \_\_\_\_\_

6. \_\_\_\_\_


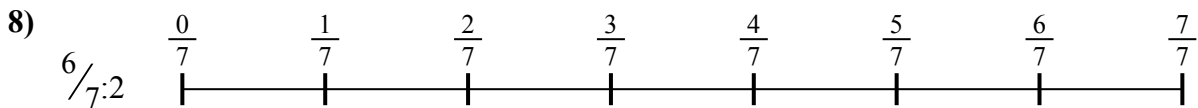
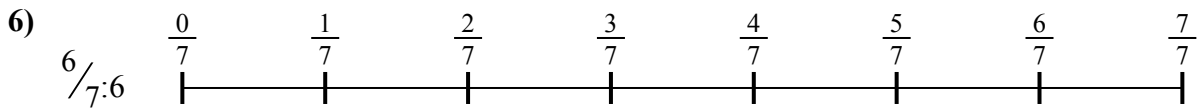


7. \_\_\_\_\_

8. \_\_\_\_\_



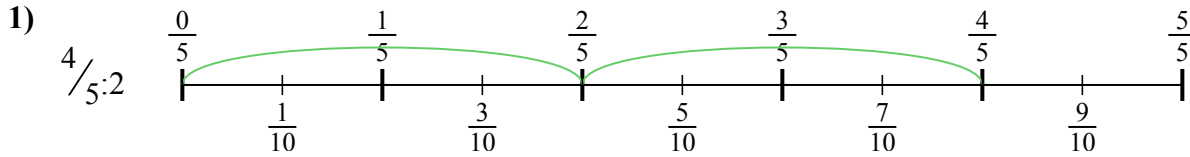
9. \_\_\_\_\_



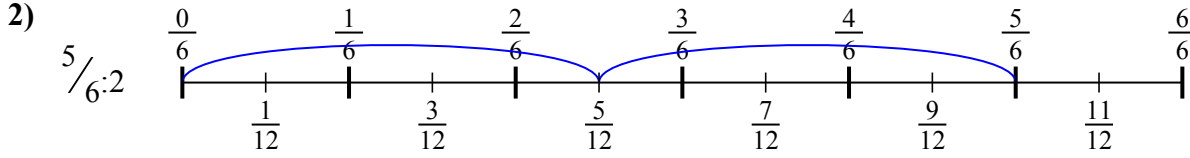


Используйте числовую прямую для решения задачи. Первая отмечена для Вас.

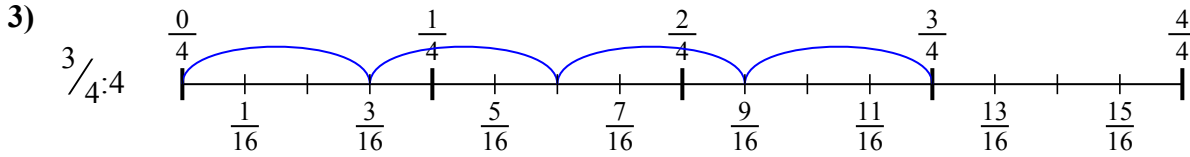
**ОТВЕТЫ**



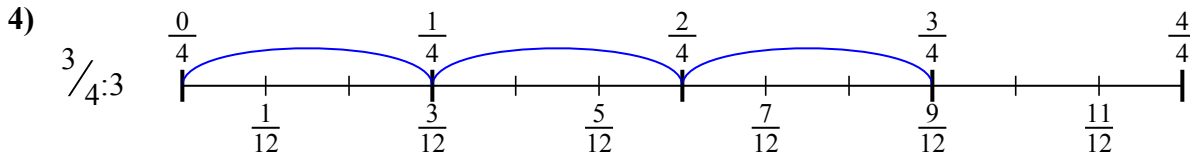
1.  $\frac{4}{10}$



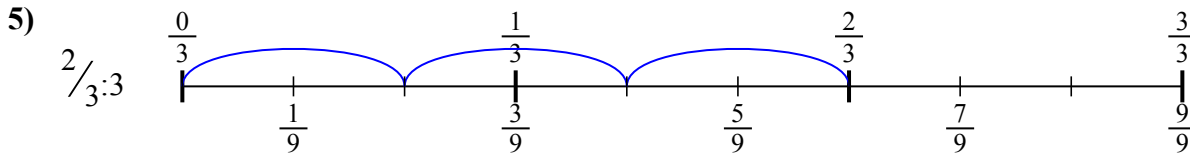
2.  $\frac{5}{12}$



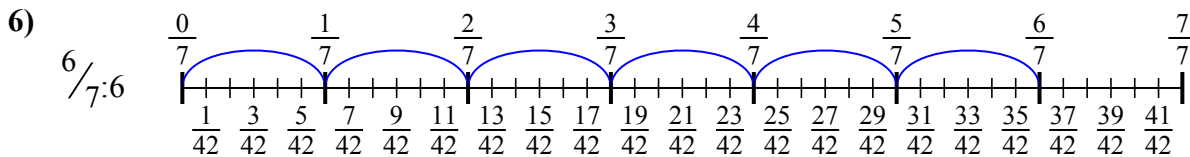
3.  $\frac{3}{16}$



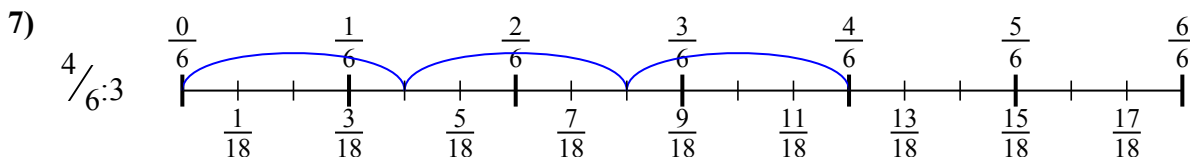
4.  $\frac{3}{12}$



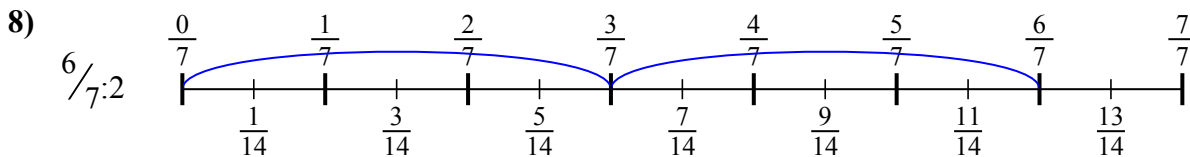
5.  $\frac{2}{9}$



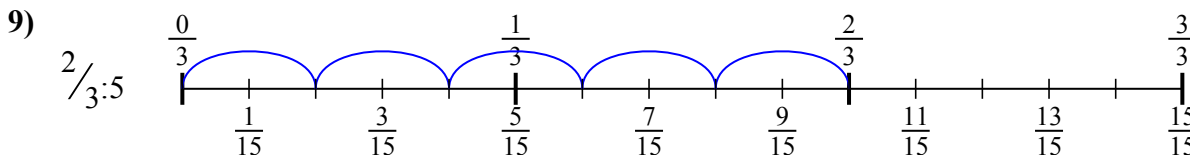
6.  $\frac{6}{42}$



7.  $\frac{4}{18}$



8.  $\frac{6}{14}$



9.  $\frac{2}{15}$



Используйте числовую прямую для решения задачи. Первая отмечена для Вас.

**ОТВЕТЫ**

$\frac{6}{14}$

$\frac{4}{10}$

$\frac{3}{12}$

$\frac{2}{9}$

$\frac{2}{15}$

$\frac{6}{42}$

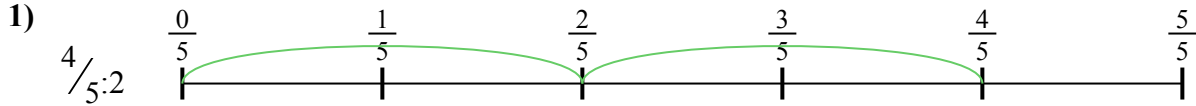
$\frac{4}{18}$

$\frac{3}{16}$

$\frac{5}{12}$


1. \_\_\_\_\_

2. \_\_\_\_\_



3. \_\_\_\_\_

4. \_\_\_\_\_



5. \_\_\_\_\_

6. \_\_\_\_\_



7. \_\_\_\_\_

8. \_\_\_\_\_



9. \_\_\_\_\_

