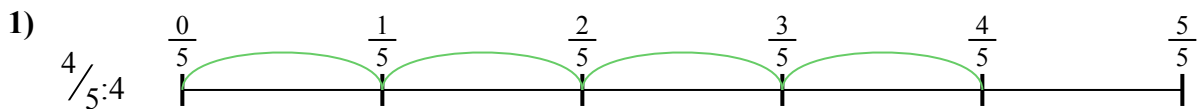




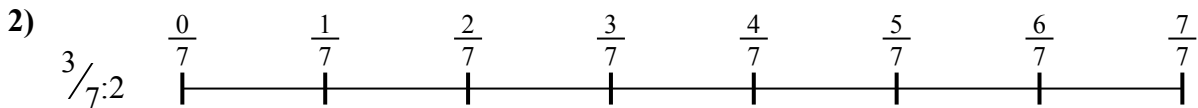
Используйте числовую прямую для решения задачи. Первая отмечена для Вас.

**ОТВЕТЫ**



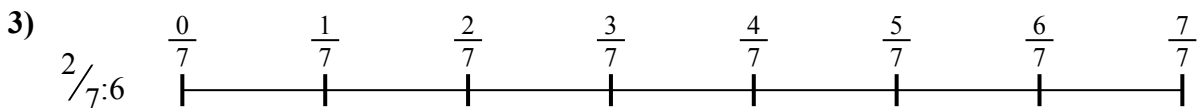
1. \_\_\_\_\_

2. \_\_\_\_\_



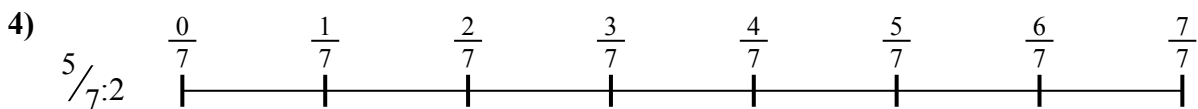
3. \_\_\_\_\_

4. \_\_\_\_\_



5. \_\_\_\_\_

6. \_\_\_\_\_

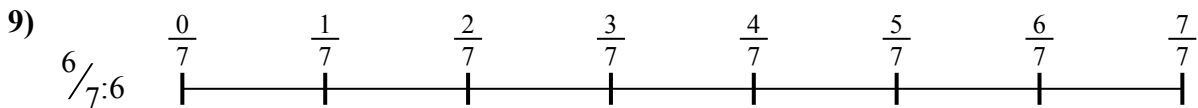
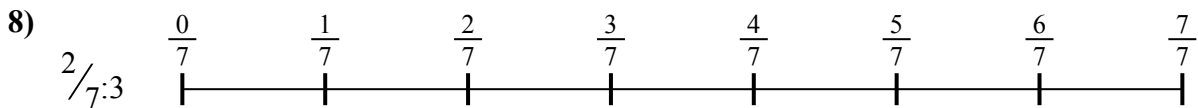
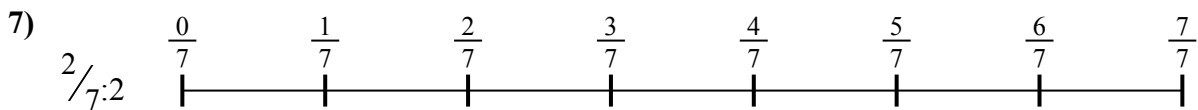


7. \_\_\_\_\_

8. \_\_\_\_\_



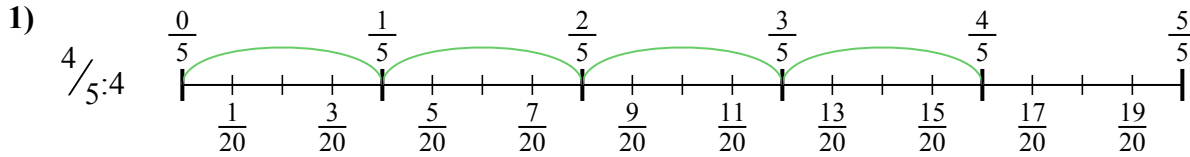
9. \_\_\_\_\_



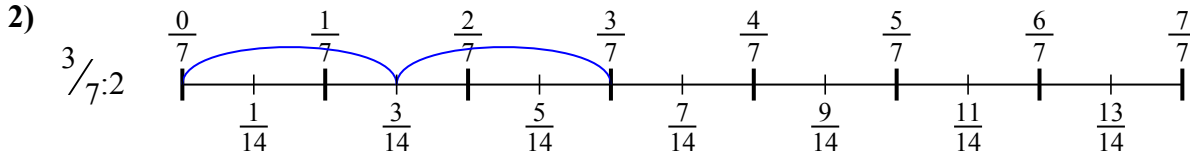


Используйте числовую прямую для решения задачи. Первая отмечена для Вас.

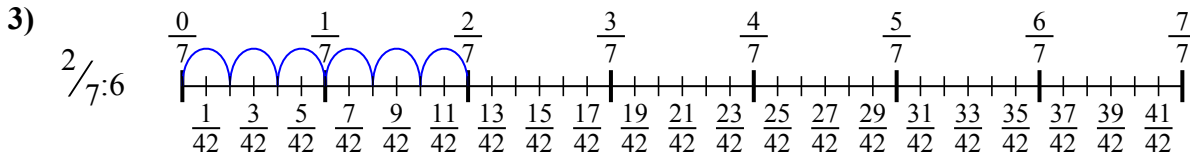
**ОТВЕТЫ**



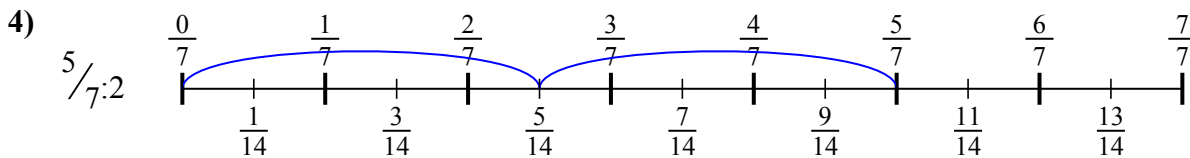
1.  $\frac{4}{20}$



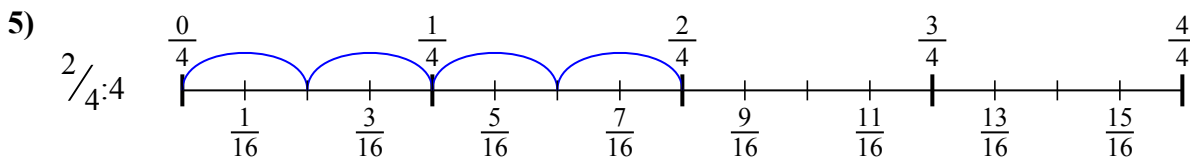
2.  $\frac{3}{14}$



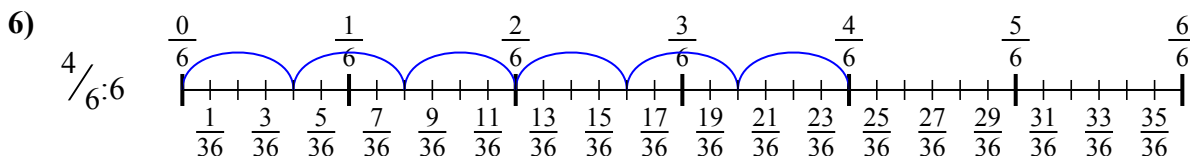
3.  $\frac{2}{42}$



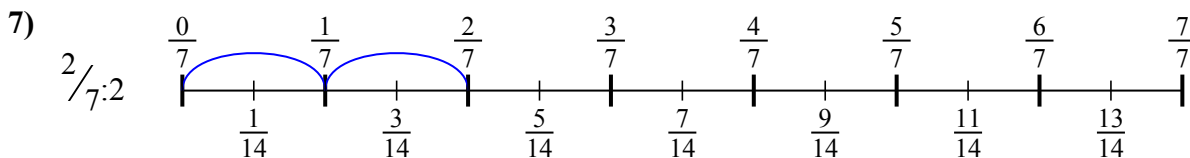
4.  $\frac{5}{14}$



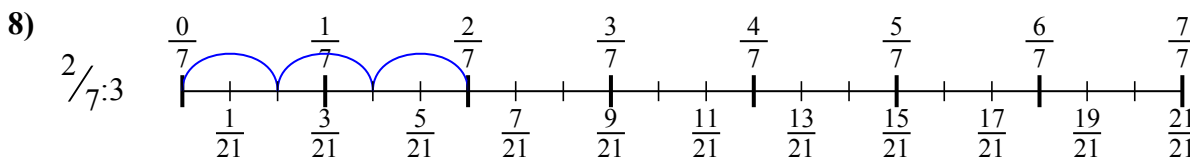
5.  $\frac{2}{16}$



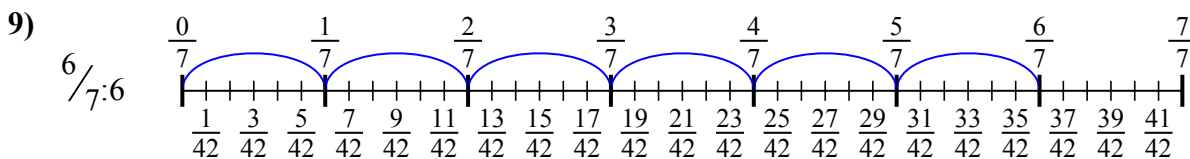
6.  $\frac{4}{36}$



7.  $\frac{2}{14}$



8.  $\frac{2}{21}$



9.  $\frac{6}{42}$



Используйте числовую прямую для решения задачи. Первая отмечена для Вас.

**ОТВЕТЫ**

$\frac{2}{21}$

$\frac{4}{20}$

$\frac{3}{14}$

$\frac{4}{36}$

$\frac{2}{16}$

$\frac{6}{42}$

$\frac{2}{14}$

$\frac{5}{14}$

$\frac{2}{42}$

1. \_\_\_\_\_

2. \_\_\_\_\_

3. \_\_\_\_\_

4. \_\_\_\_\_

5. \_\_\_\_\_

6. \_\_\_\_\_

7. \_\_\_\_\_

8. \_\_\_\_\_

9. \_\_\_\_\_

