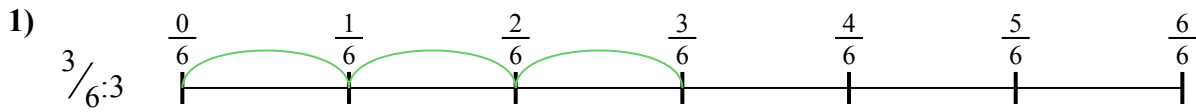





Используйте числовую прямую для решения задачи. Первая отмечена для Вас.

ОТВЕТЫ

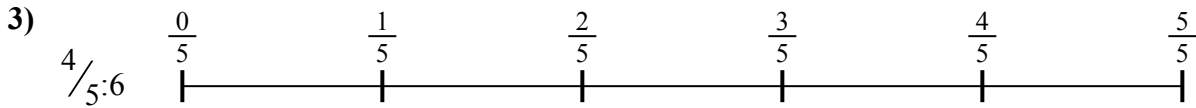
1. _____

2. _____



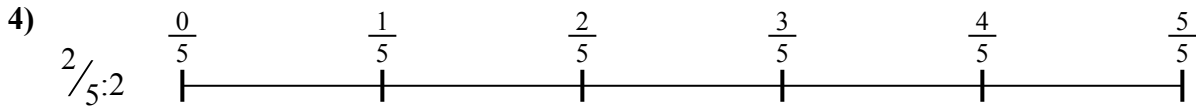
3. _____

4. _____



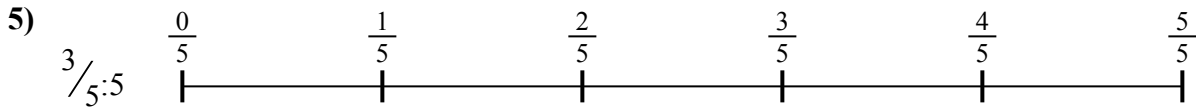
5. _____

6. _____


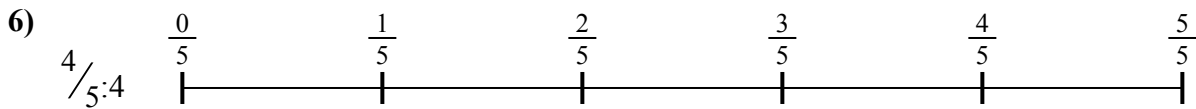


7. _____

8. _____



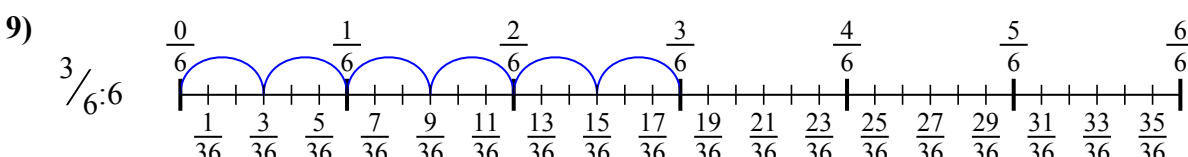
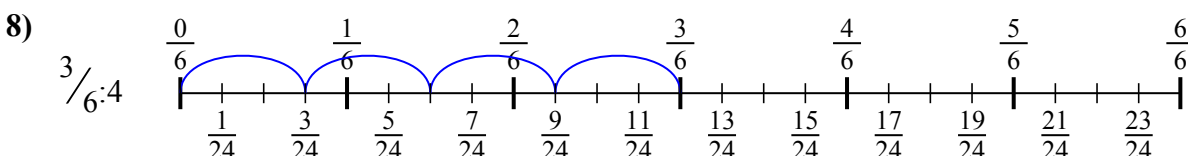
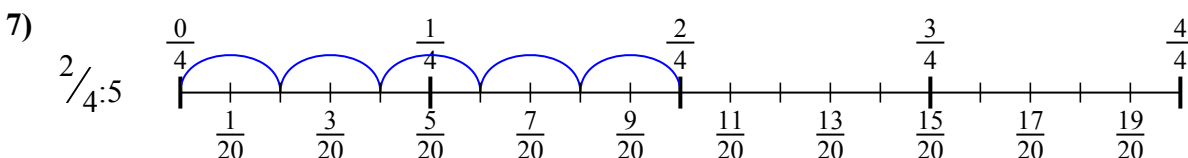
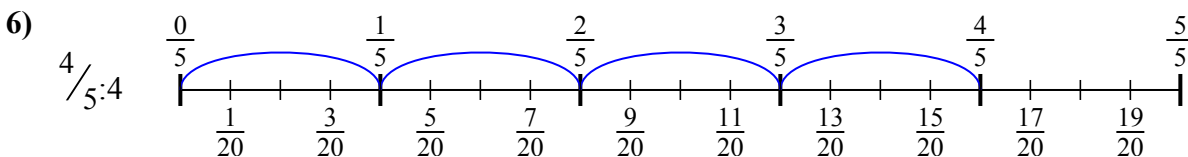
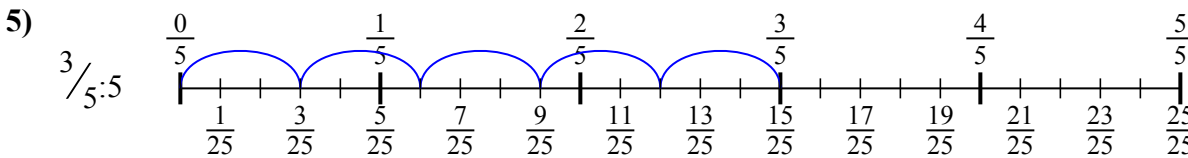
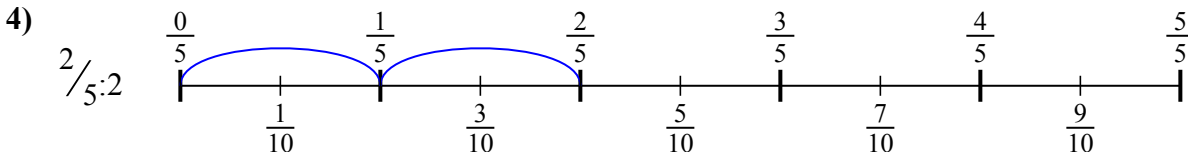
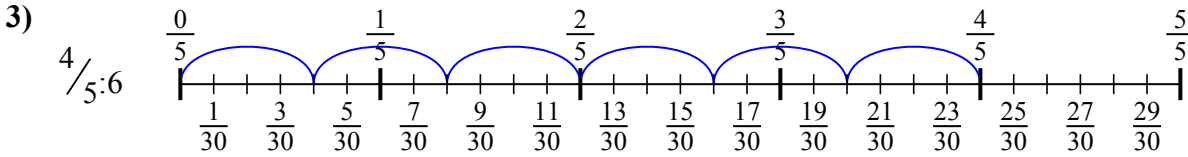
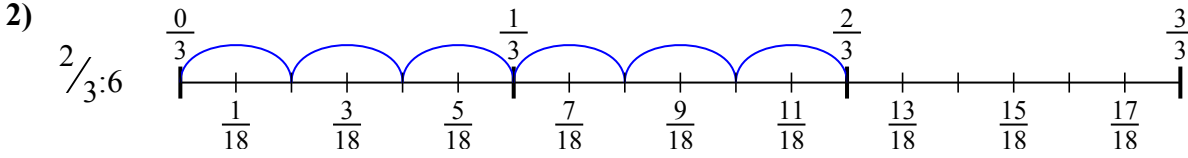
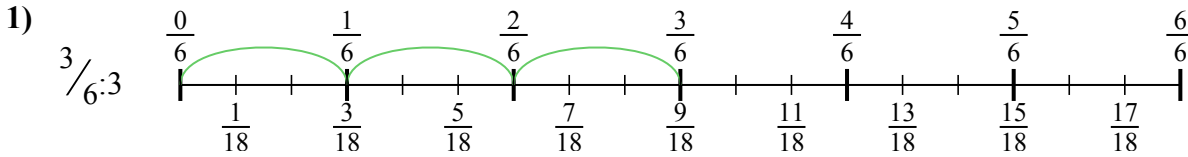
9. _____





Используйте числовую прямую для решения задачи. Первая отмечена для Вас.

ОТВЕТЫ



1. $\frac{3}{18}$

2. $\frac{2}{18}$

3. $\frac{4}{30}$

4. $\frac{2}{10}$

5. $\frac{3}{25}$

6. $\frac{4}{20}$

7. $\frac{2}{20}$

8. $\frac{3}{24}$

9. $\frac{3}{36}$



Используйте числовую прямую для решения задачи. Первая отмечена для Вас.

ОТВЕТЫ

$\frac{3}{24}$

$\frac{2}{20}$

$\frac{4}{20}$

$\frac{2}{18}$

$\frac{2}{10}$

$\frac{3}{18}$

$\frac{4}{30}$

$\frac{3}{25}$

$\frac{3}{36}$

1. _____

2. _____

3. _____

4. _____

5. _____

6. _____

7. _____

8. _____

9. _____

