



Используйте числовую прямую для решения задачи. Первая отмечена для Вас.

**ОТВЕТЫ**



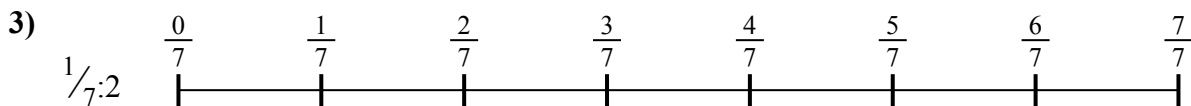
1. \_\_\_\_\_

2. \_\_\_\_\_



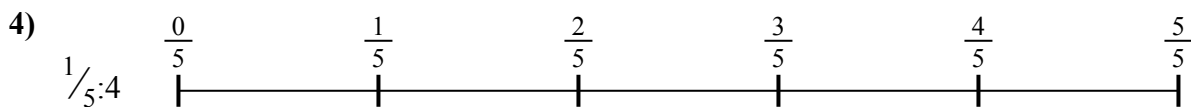
3. \_\_\_\_\_

4. \_\_\_\_\_



5. \_\_\_\_\_

6. \_\_\_\_\_

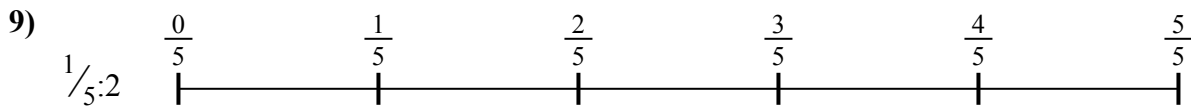
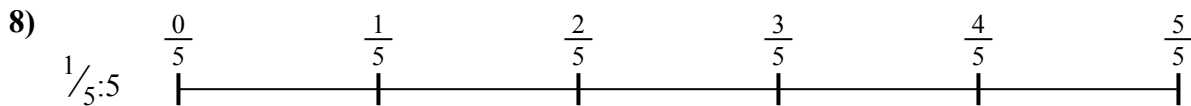


7. \_\_\_\_\_

8. \_\_\_\_\_



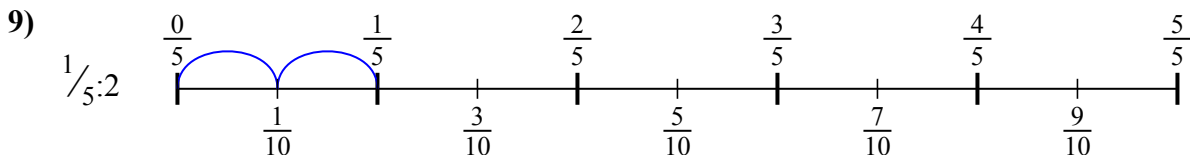
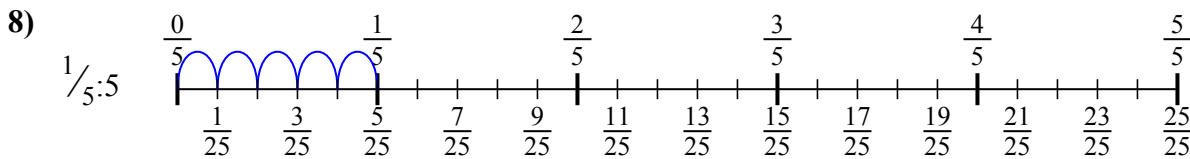
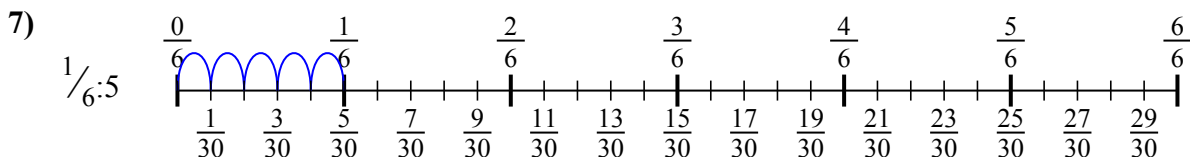
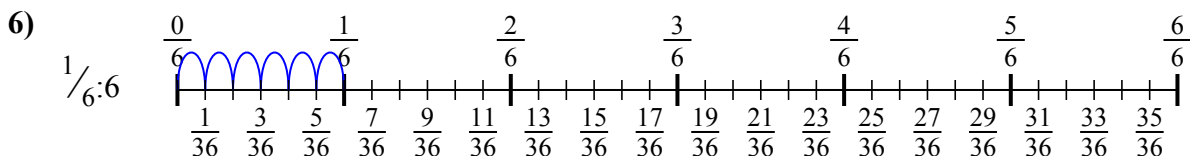
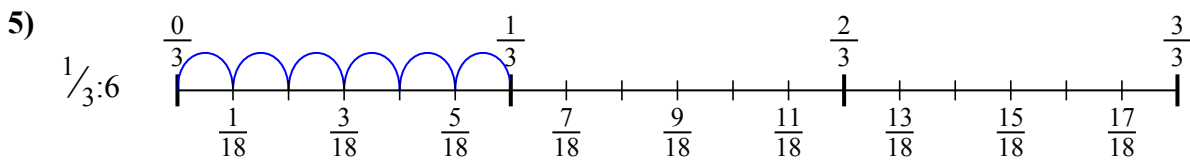
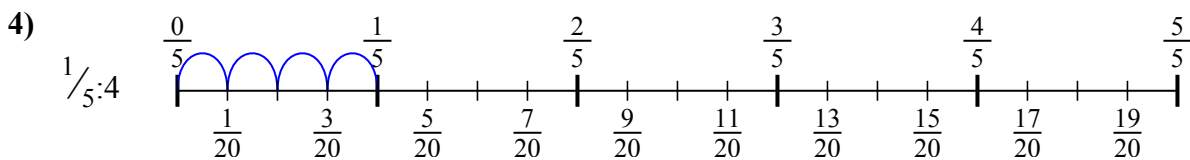
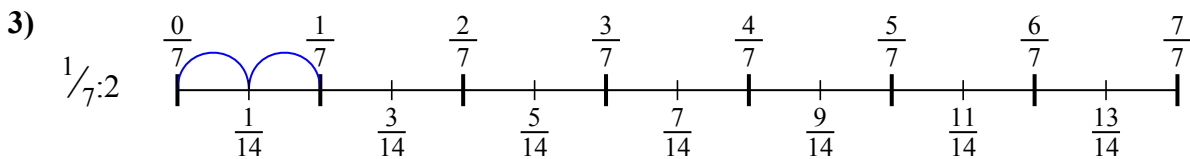
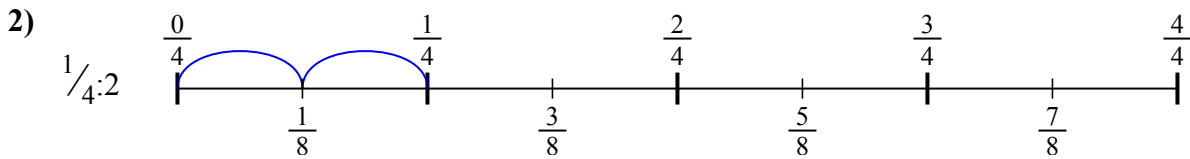
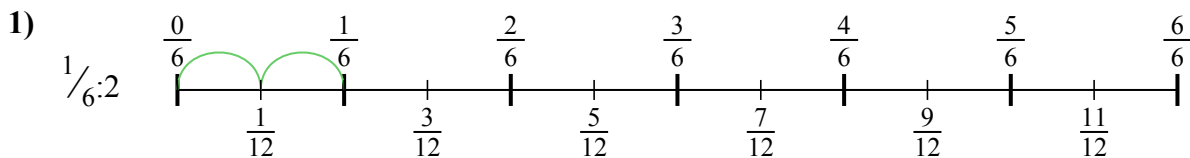
9. \_\_\_\_\_





Используйте числовую прямую для решения задачи. Первая отмечена для Вас.

**ОТВЕТЫ**



1.  $\frac{1}{12}$

2.  $\frac{1}{8}$

3.  $\frac{1}{14}$

4.  $\frac{1}{20}$

5.  $\frac{1}{18}$

6.  $\frac{1}{36}$

7.  $\frac{1}{30}$

8.  $\frac{1}{25}$

9.  $\frac{1}{10}$



Используйте числовую прямую для решения задачи. Первая отмечена для Вас.

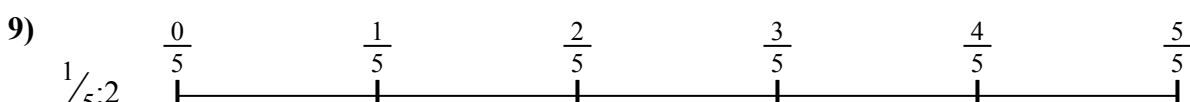
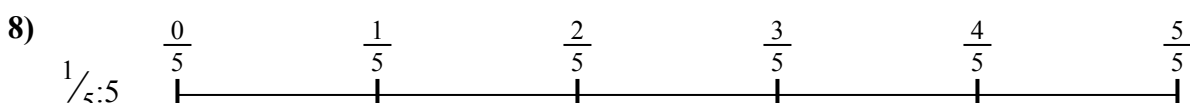
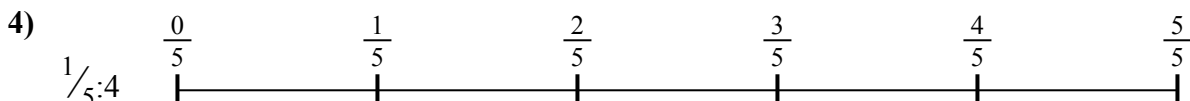
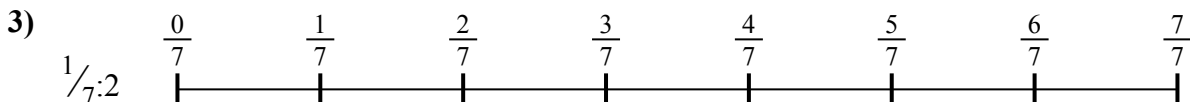
**ОТВЕТЫ**

$\frac{1}{30}$   
 $\frac{1}{18}$   
 $\frac{1}{10}$

$\frac{1}{12}$   
 $\frac{1}{25}$

$\frac{1}{36}$   
 $\frac{1}{14}$

$\frac{1}{8}$   
 $\frac{1}{20}$



1. \_\_\_\_\_
2. \_\_\_\_\_
3. \_\_\_\_\_
4. \_\_\_\_\_
5. \_\_\_\_\_
6. \_\_\_\_\_
7. \_\_\_\_\_
8. \_\_\_\_\_
9. \_\_\_\_\_