



Используйте числовую прямую для решения задачи. Первая отмечена для Вас.

ОТВЕТЫ

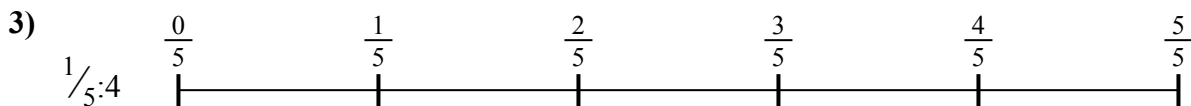
1. _____

2. _____



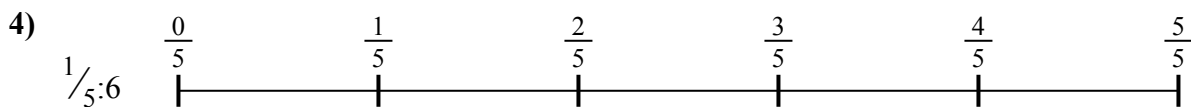
3. _____

4. _____



5. _____

6. _____



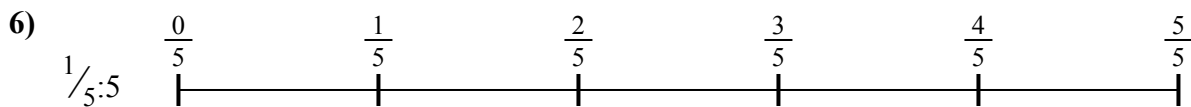


7. _____

8. _____



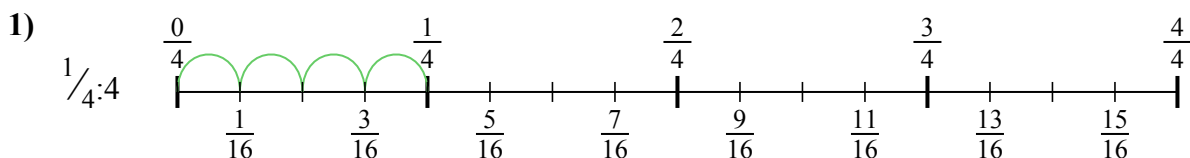
9. _____



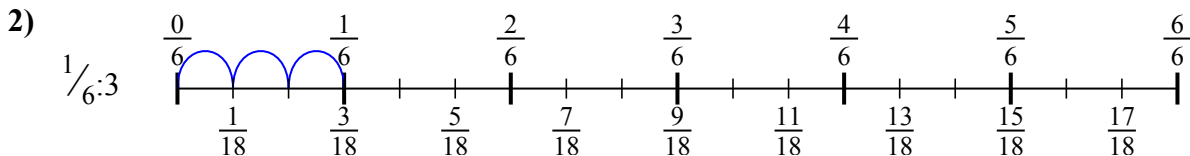


Используйте числовую прямую для решения задачи. Первая отмечена для Вас.

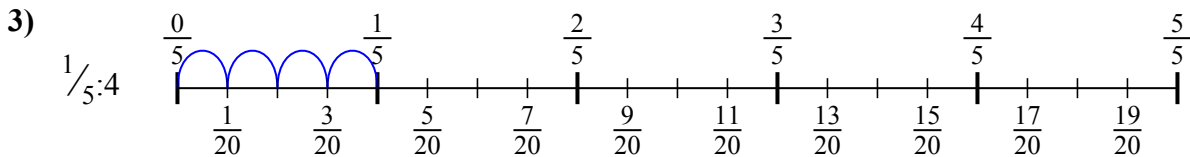
ОТВЕТЫ



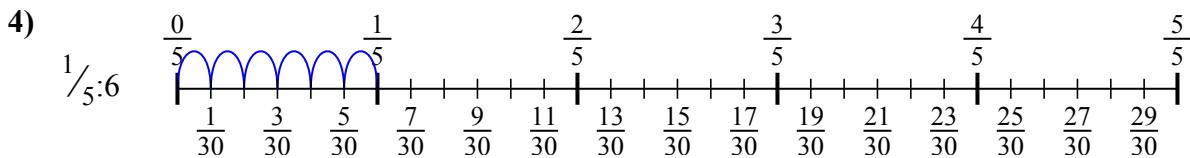
1. $\frac{1}{16}$



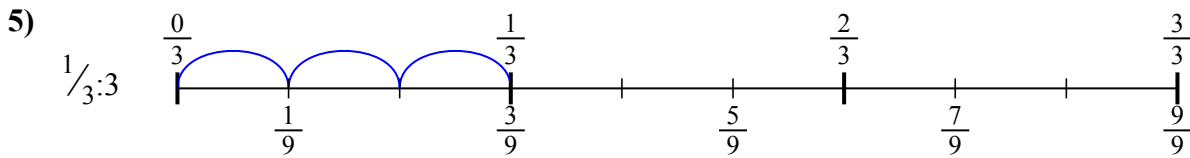
2. $\frac{1}{18}$



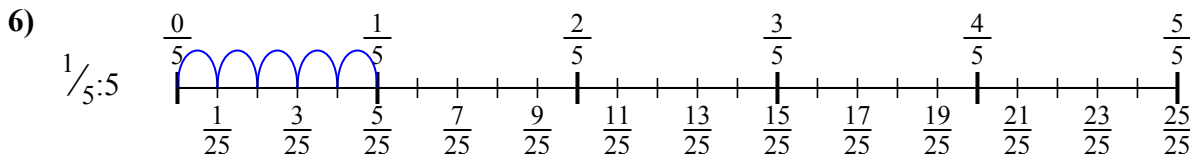
3. $\frac{1}{20}$



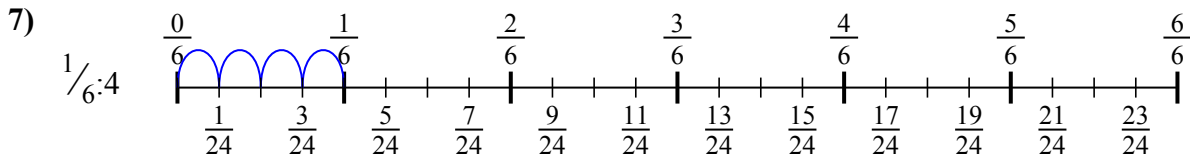
4. $\frac{1}{30}$



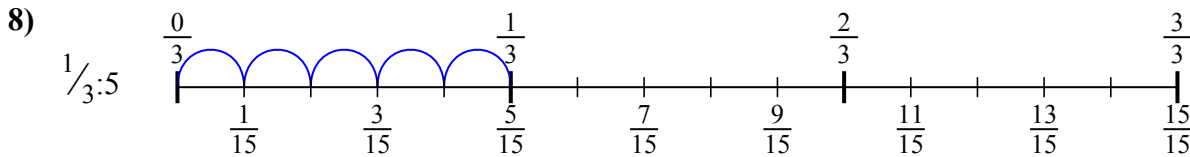
5. $\frac{1}{9}$



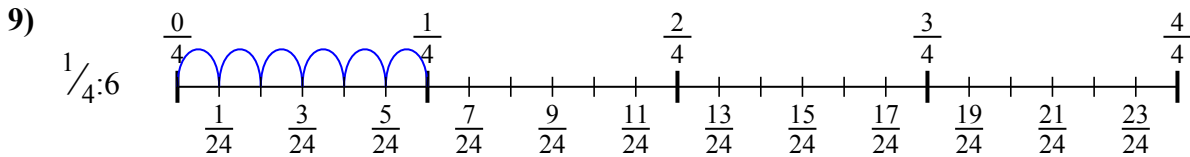
6. $\frac{1}{25}$



7. $\frac{1}{24}$



8. $\frac{1}{15}$



9. $\frac{1}{24}$



Используйте числовую прямую для решения задачи. Первая отмечена для Вас.



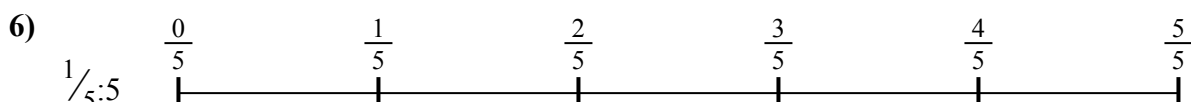
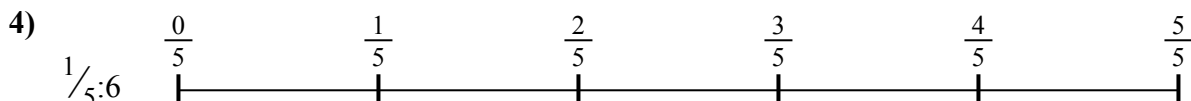
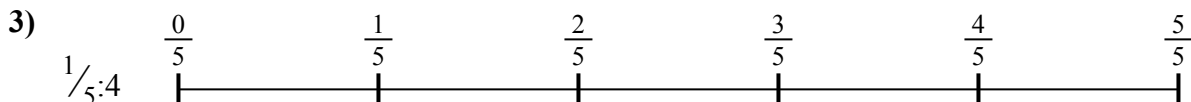
ОТВЕТЫ

$\frac{1}{30}$
 $\frac{1}{25}$
 $\frac{1}{15}$

$\frac{1}{9}$
 $\frac{1}{24}$

$\frac{1}{20}$
 $\frac{1}{18}$

$\frac{1}{24}$
 $\frac{1}{16}$



1. _____

2. _____

3. _____

4. _____

5. _____

6. _____

7. _____

8. _____

9. _____