



Используйте числовую прямую для решения задачи. Первая отмечена для Вас.

**ОТВЕТЫ**



1. \_\_\_\_\_

2. \_\_\_\_\_



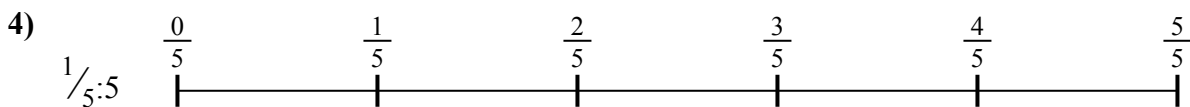
3. \_\_\_\_\_

4. \_\_\_\_\_



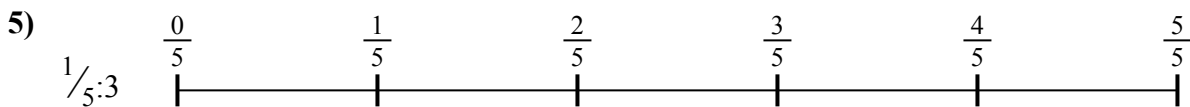
5. \_\_\_\_\_

6. \_\_\_\_\_

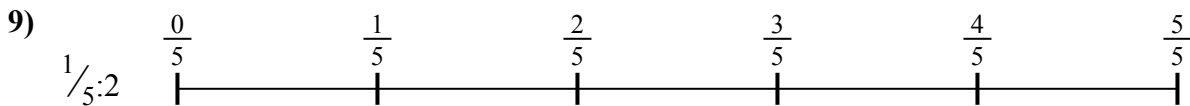
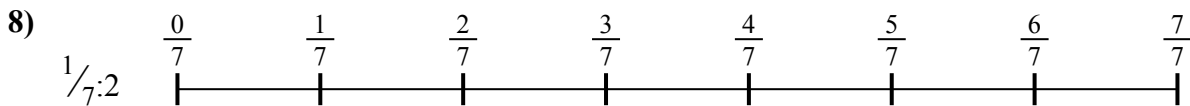


7. \_\_\_\_\_

8. \_\_\_\_\_



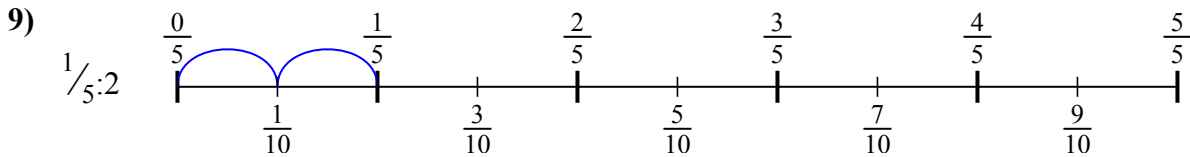
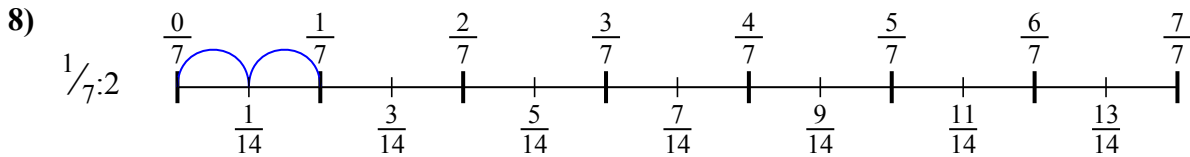
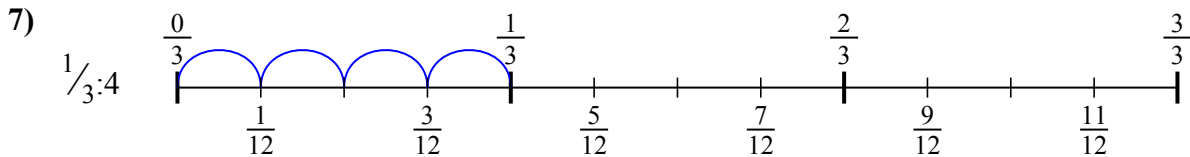
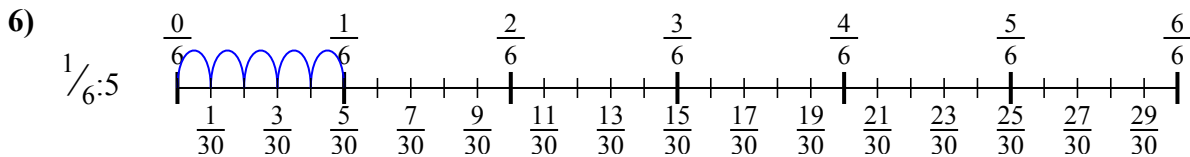
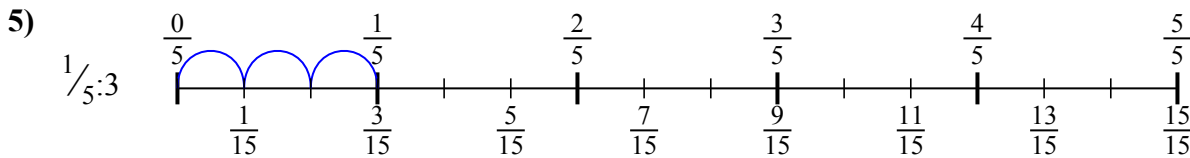
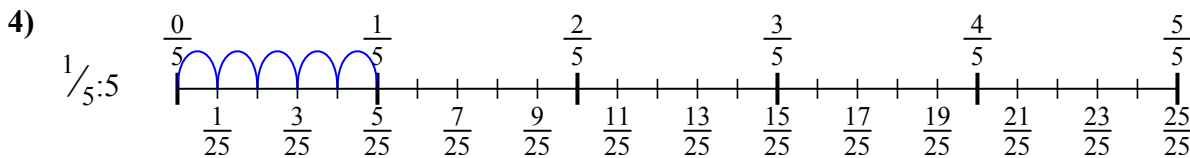
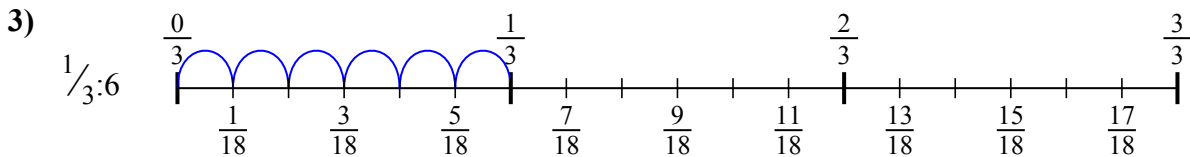
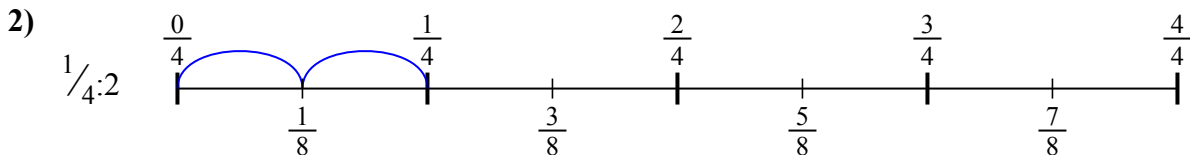
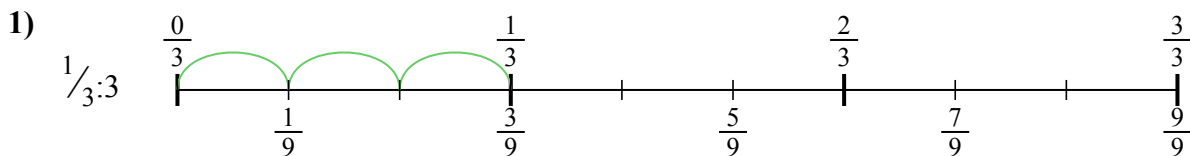
9. \_\_\_\_\_





Используйте числовую прямую для решения задачи. Первая отмечена для Вас.

**ОТВЕТЫ**



1.  $\frac{1}{9}$

2.  $\frac{1}{8}$

3.  $\frac{1}{18}$

4.  $\frac{1}{25}$

5.  $\frac{1}{15}$

6.  $\frac{1}{30}$

7.  $\frac{1}{12}$

8.  $\frac{1}{14}$

9.  $\frac{1}{10}$



Используйте числовую прямую для решения задачи. Первая отмечена для Вас.

**ОТВЕТЫ**

$\frac{1}{14}$

$\frac{1}{9}$

$\frac{1}{30}$

$\frac{1}{10}$

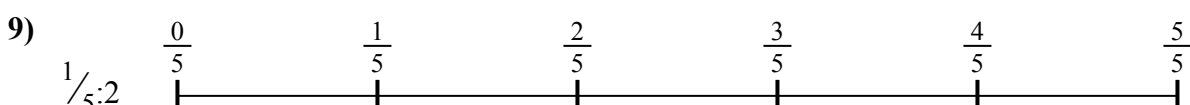
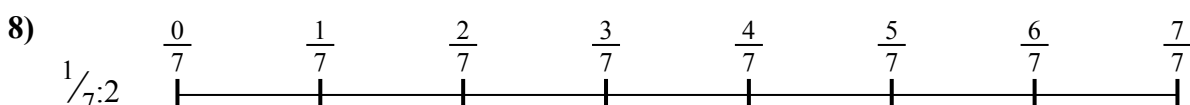

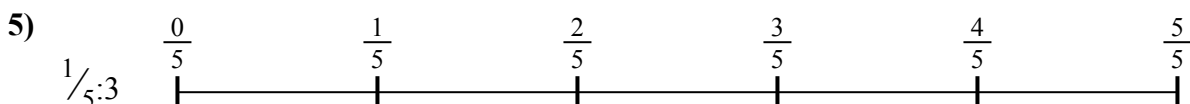
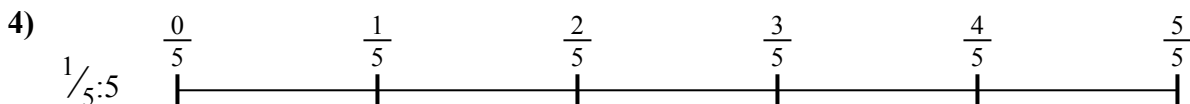

$\frac{1}{18}$

$\frac{1}{8}$

$\frac{1}{25}$

$\frac{1}{15}$

$\frac{1}{12}$



1. \_\_\_\_\_

2. \_\_\_\_\_

3. \_\_\_\_\_

4. \_\_\_\_\_

5. \_\_\_\_\_

6. \_\_\_\_\_

7. \_\_\_\_\_

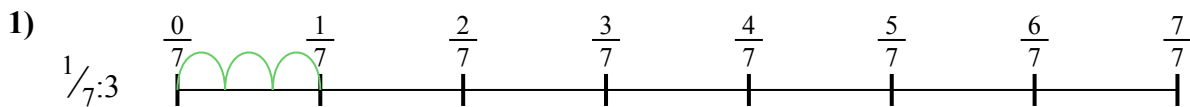
8. \_\_\_\_\_

9. \_\_\_\_\_



Используйте числовую прямую для решения задачи. Первая отмечена для Вас.

**ОТВЕТЫ**



1. \_\_\_\_\_

2. \_\_\_\_\_



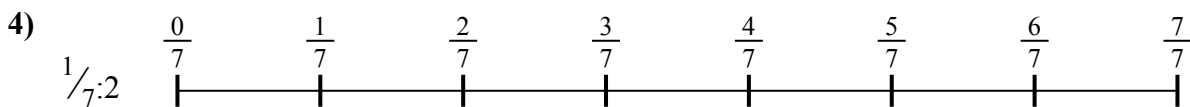
3. \_\_\_\_\_

4. \_\_\_\_\_



5. \_\_\_\_\_

6. \_\_\_\_\_




7. \_\_\_\_\_

8. \_\_\_\_\_



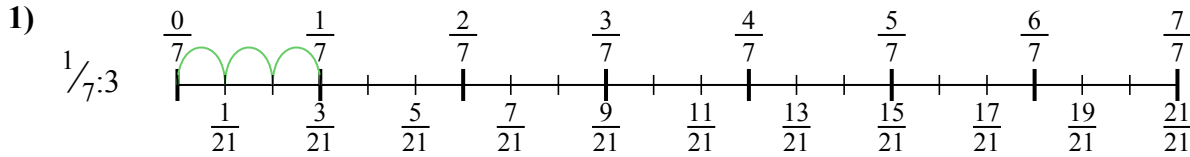
9. \_\_\_\_\_



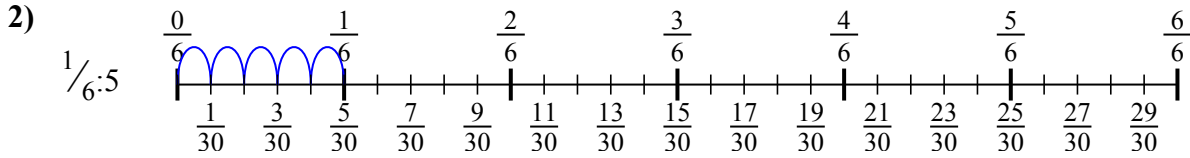


Используйте числовую прямую для решения задачи. Первая отмечена для Вас.

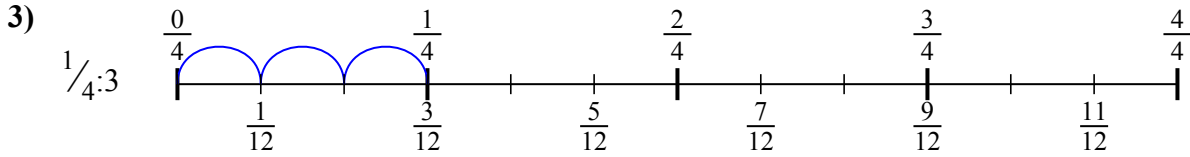
**ОТВЕТЫ**



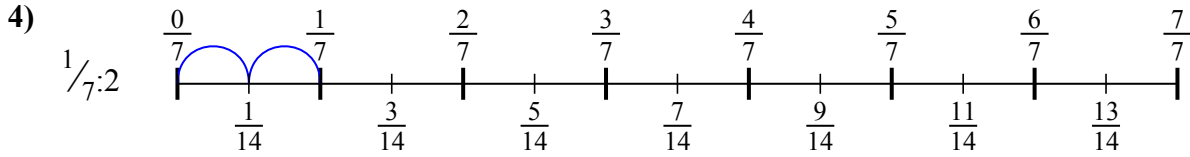
1.  $\frac{1}{21}$



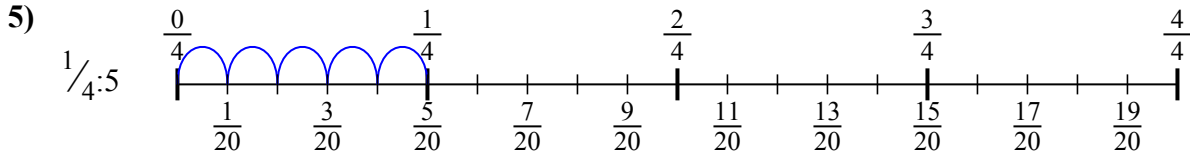
2.  $\frac{1}{30}$



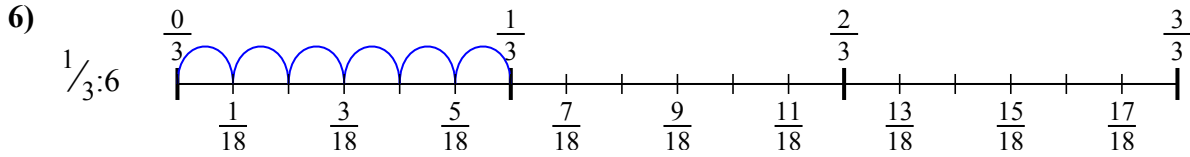
3.  $\frac{1}{12}$



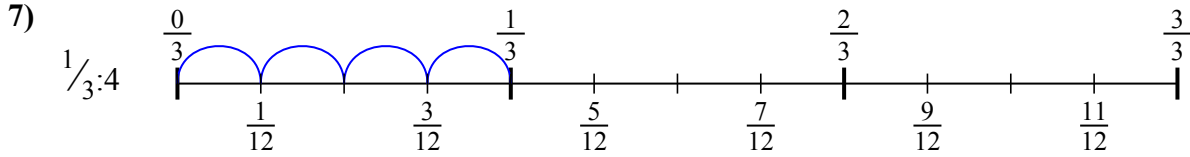
4.  $\frac{1}{14}$



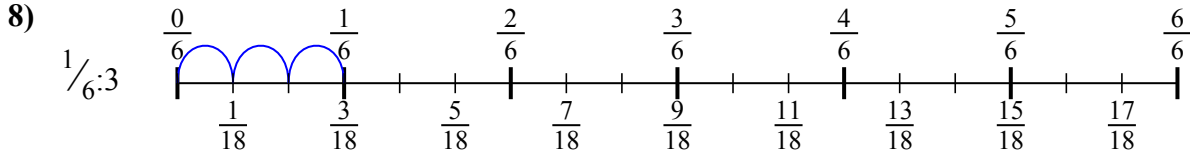
5.  $\frac{1}{20}$



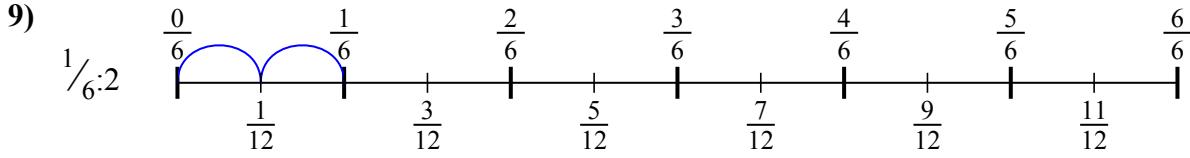
6.  $\frac{1}{18}$



7.  $\frac{1}{12}$



8.  $\frac{1}{18}$



9.  $\frac{1}{12}$



Используйте числовую прямую для решения задачи. Первая отмечена для Вас.



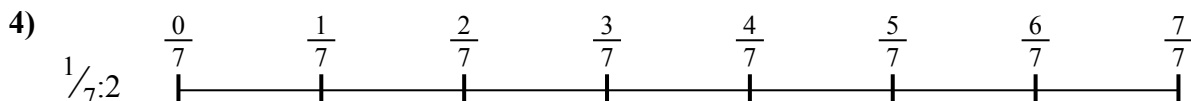
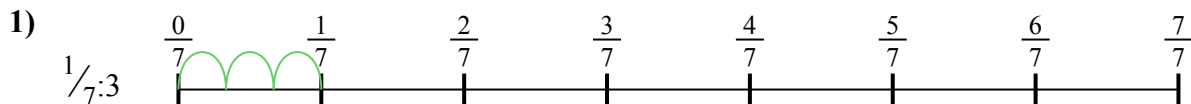
**ОТВЕТЫ**

$\frac{1}{30}$   
 $\frac{1}{21}$   
 $\frac{1}{14}$

$\frac{1}{12}$   
 $\frac{1}{18}$

$\frac{1}{12}$   
 $\frac{1}{18}$

$\frac{1}{20}$   
 $\frac{1}{12}$

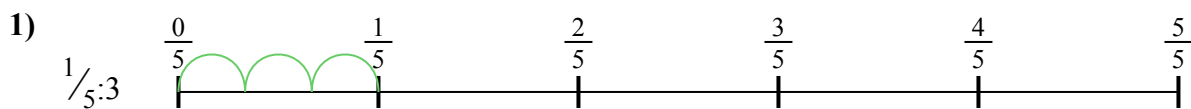


1. \_\_\_\_\_
2. \_\_\_\_\_
3. \_\_\_\_\_
4. \_\_\_\_\_
5. \_\_\_\_\_
6. \_\_\_\_\_
7. \_\_\_\_\_
8. \_\_\_\_\_
9. \_\_\_\_\_

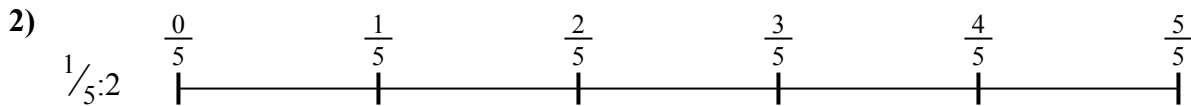


Используйте числовую прямую для решения задачи. Первая отмечена для Вас.

**ОТВЕТЫ**



1. \_\_\_\_\_



2. \_\_\_\_\_



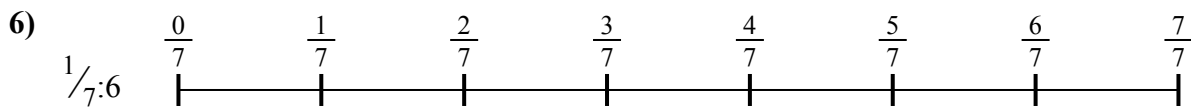
3. \_\_\_\_\_



4. \_\_\_\_\_



5. \_\_\_\_\_




6. \_\_\_\_\_



7. \_\_\_\_\_



8. \_\_\_\_\_

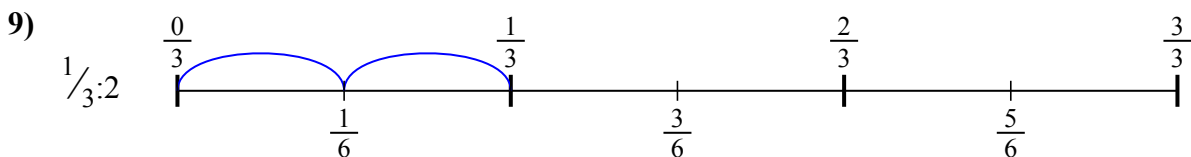
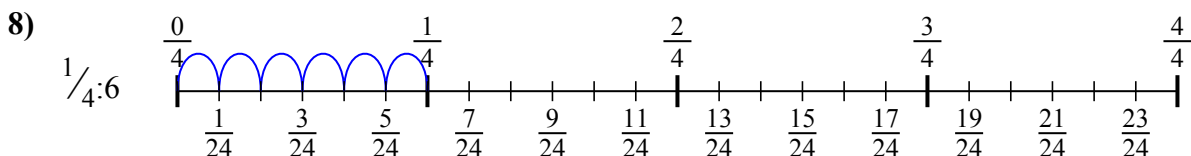
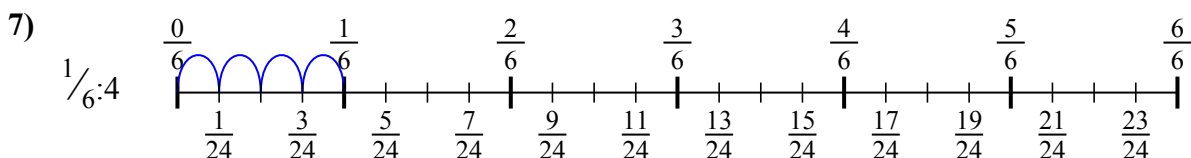
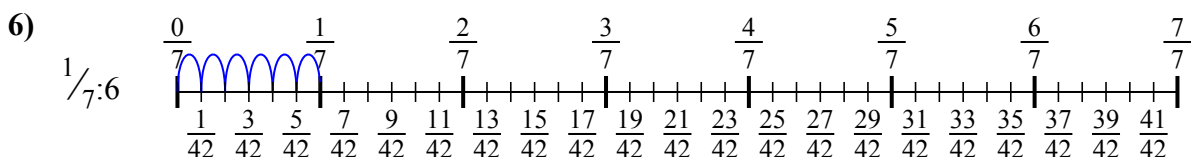
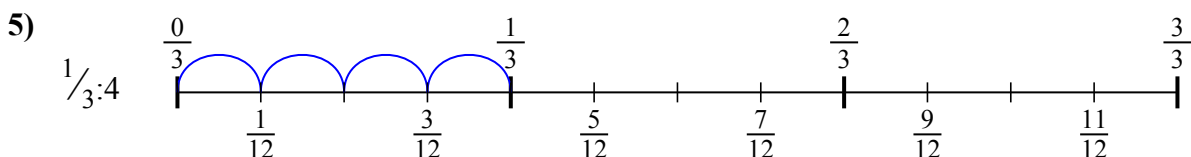
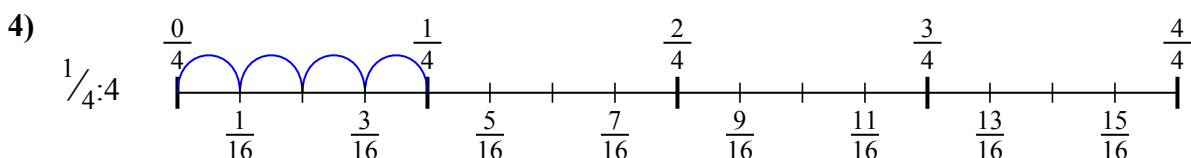
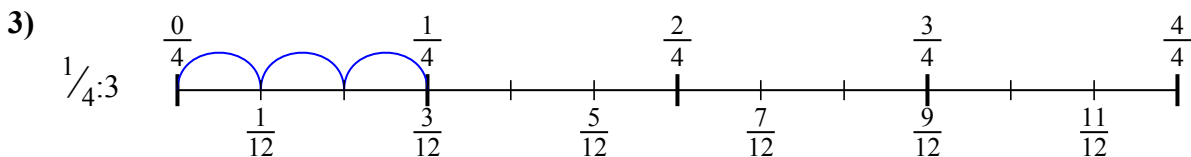
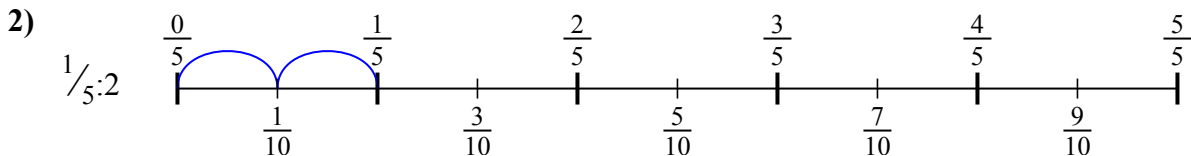
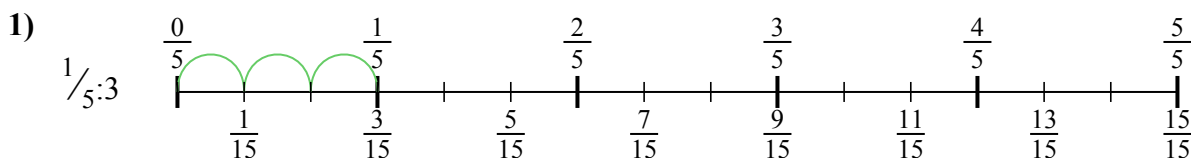


9. \_\_\_\_\_



Используйте числовую прямую для решения задачи. Первая отмечена для Вас.

**ОТВЕТЫ**



1.  $\frac{1}{15}$

2.  $\frac{1}{10}$

3.  $\frac{1}{12}$

4.  $\frac{1}{16}$

5.  $\frac{1}{12}$

6.  $\frac{1}{42}$

7.  $\frac{1}{24}$

8.  $\frac{1}{24}$

9.  $\frac{1}{6}$





Используйте числовую прямую для решения задачи. Первая отмечена для Вас.

**ОТВЕТЫ**

$\frac{1}{16}$

$\frac{1}{15}$

$\frac{1}{12}$

$\frac{1}{42}$

$\frac{1}{12}$

$\frac{1}{10}$

$\frac{1}{24}$

$\frac{1}{6}$

$\frac{1}{24}$

1. \_\_\_\_\_

2. \_\_\_\_\_

3. \_\_\_\_\_

4. \_\_\_\_\_

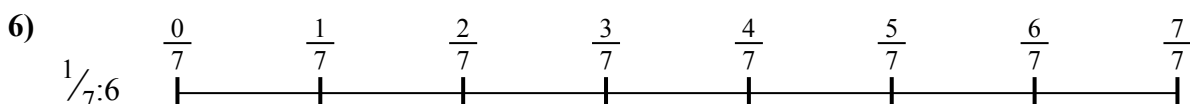


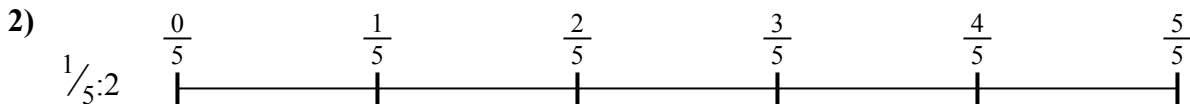
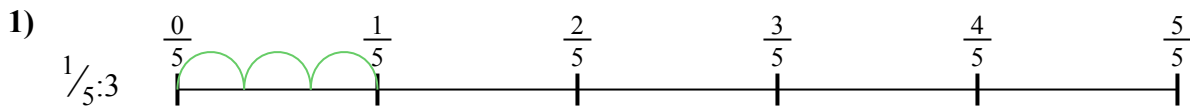
5. \_\_\_\_\_

6. \_\_\_\_\_

7. \_\_\_\_\_

8. \_\_\_\_\_

9. \_\_\_\_\_





Используйте числовую прямую для решения задачи. Первая отмечена для Вас.

**ОТВЕТЫ**

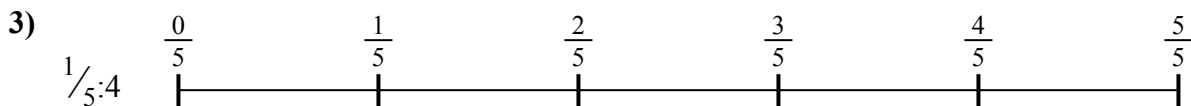
1. \_\_\_\_\_

2. \_\_\_\_\_



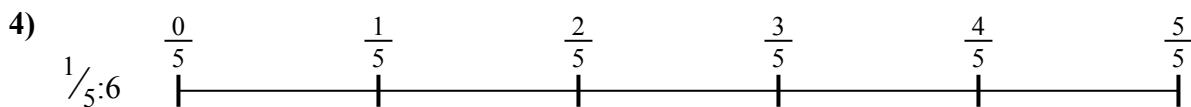
3. \_\_\_\_\_

4. \_\_\_\_\_



5. \_\_\_\_\_

6. \_\_\_\_\_



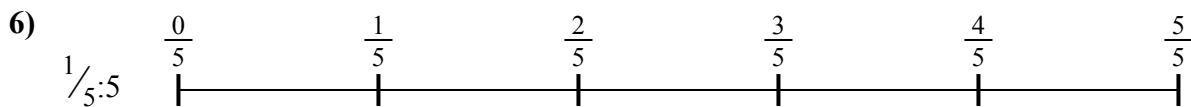


7. \_\_\_\_\_

8. \_\_\_\_\_



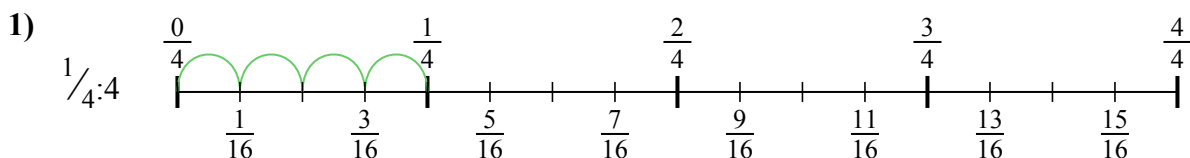
9. \_\_\_\_\_



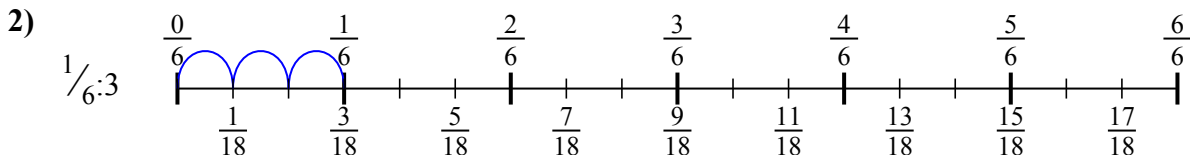


Используйте числовую прямую для решения задачи. Первая отмечена для Вас.

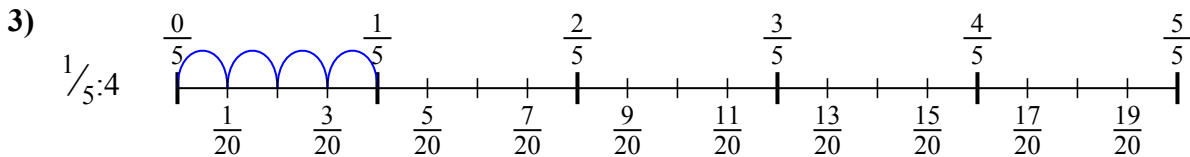
**ОТВЕТЫ**



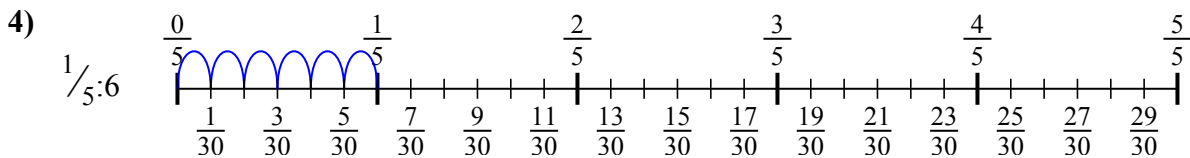
1.  $\frac{1}{16}$



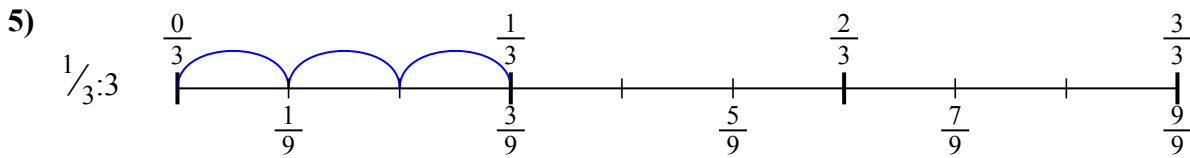
2.  $\frac{1}{18}$



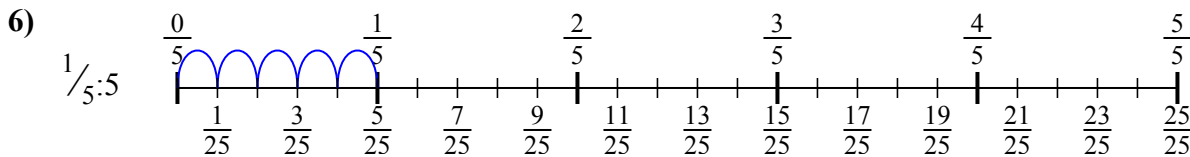
3.  $\frac{1}{20}$



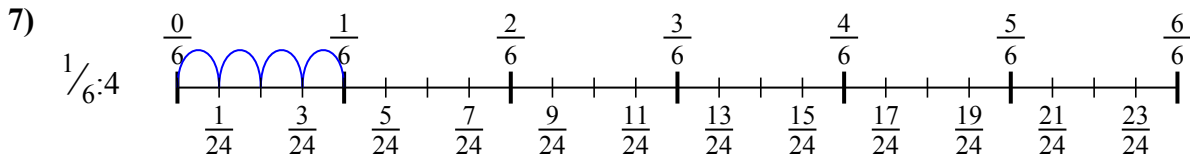
4.  $\frac{1}{30}$



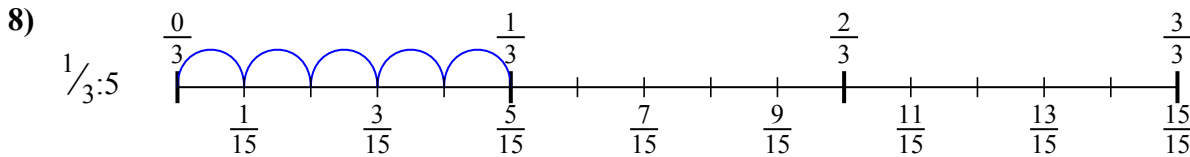
5.  $\frac{1}{9}$



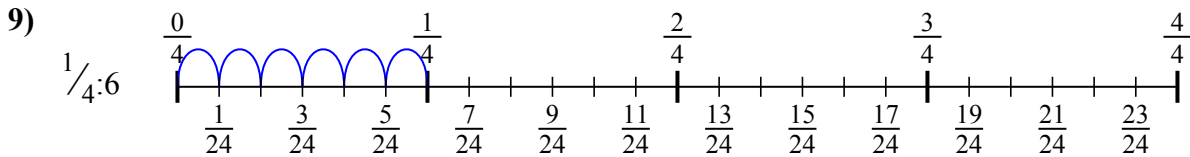
6.  $\frac{1}{25}$



7.  $\frac{1}{24}$



8.  $\frac{1}{15}$



9.  $\frac{1}{24}$



Используйте числовую прямую для решения задачи. Первая отмечена для Вас.




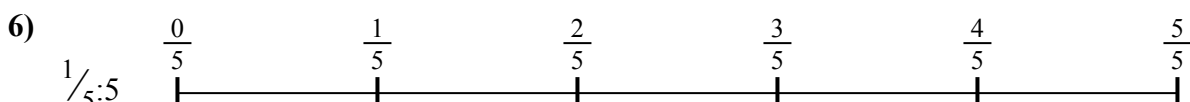
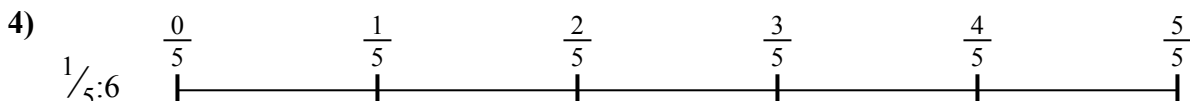
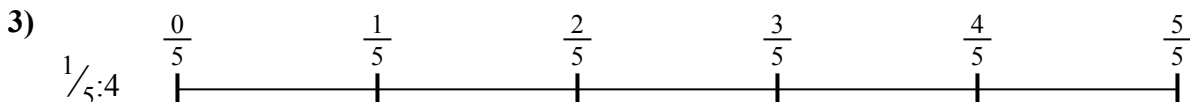

**ОТВЕТЫ**

$\frac{1}{30}$   
 $\frac{1}{25}$   
 $\frac{1}{15}$

$\frac{1}{9}$   
 $\frac{1}{24}$

$\frac{1}{20}$   
 $\frac{1}{18}$

$\frac{1}{24}$   
 $\frac{1}{16}$

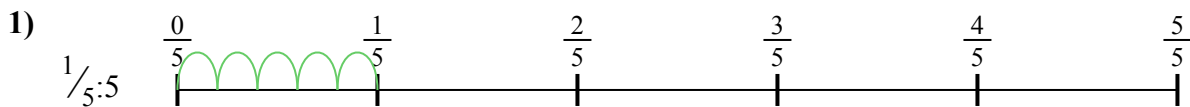


1. \_\_\_\_\_
2. \_\_\_\_\_
3. \_\_\_\_\_
4. \_\_\_\_\_
5. \_\_\_\_\_
6. \_\_\_\_\_
7. \_\_\_\_\_
8. \_\_\_\_\_
9. \_\_\_\_\_



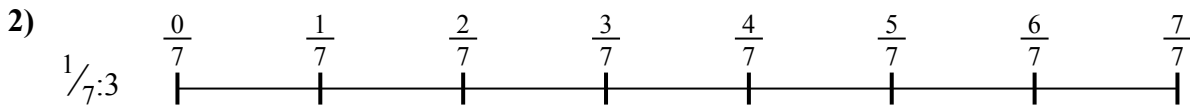
Используйте числовую прямую для решения задачи. Первая отмечена для Вас.

**ОТВЕТЫ**



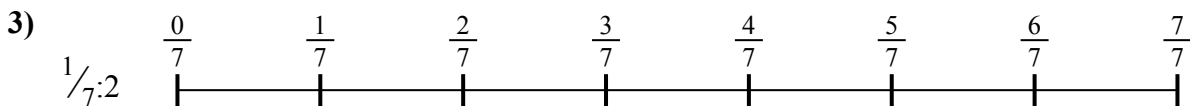
1. \_\_\_\_\_

2. \_\_\_\_\_



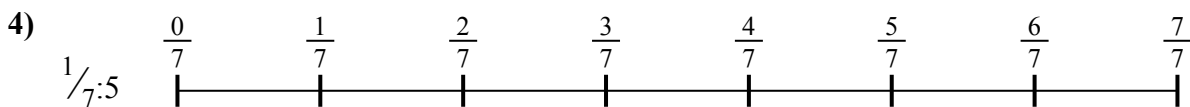
3. \_\_\_\_\_

4. \_\_\_\_\_



5. \_\_\_\_\_

6. \_\_\_\_\_

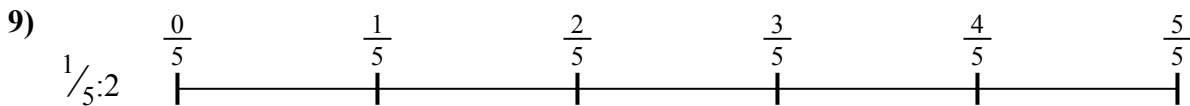


7. \_\_\_\_\_

8. \_\_\_\_\_



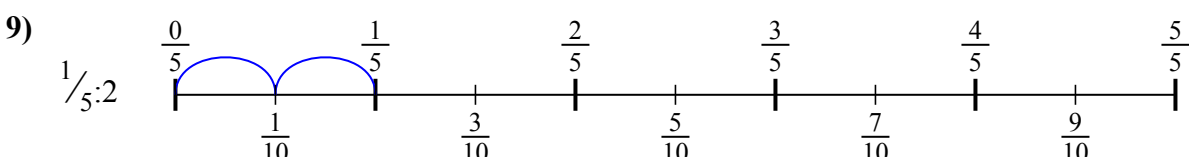
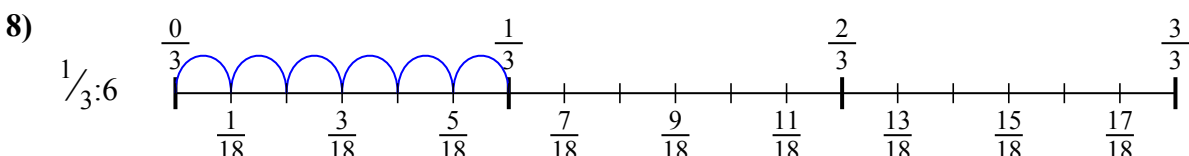
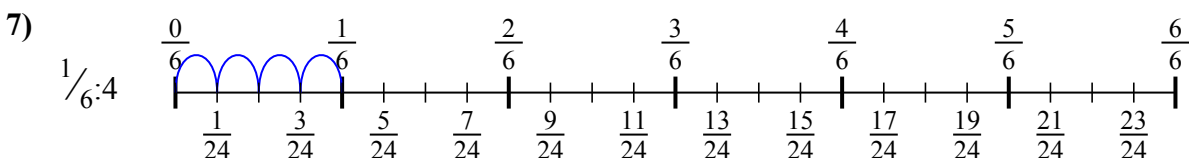
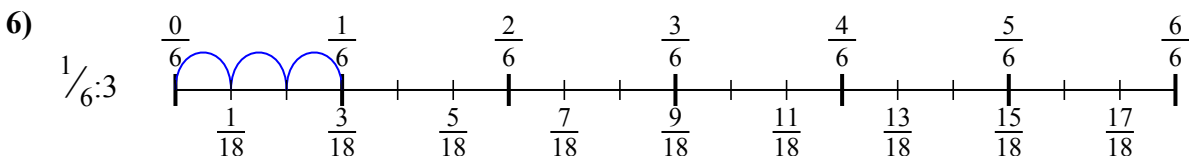
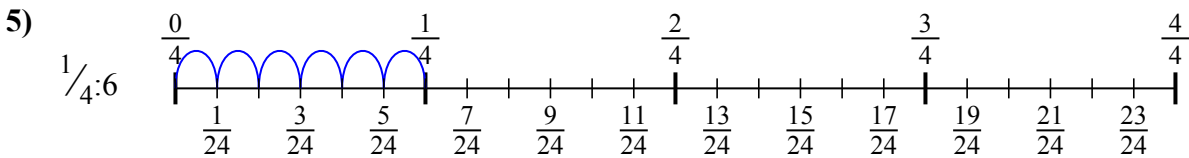
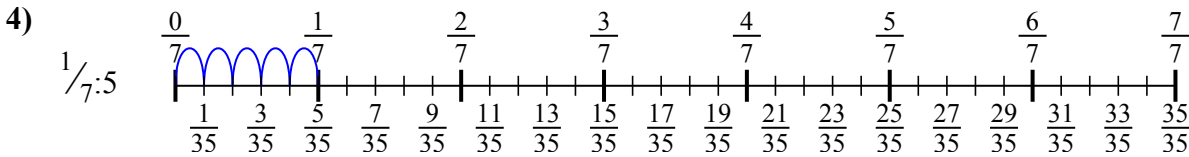
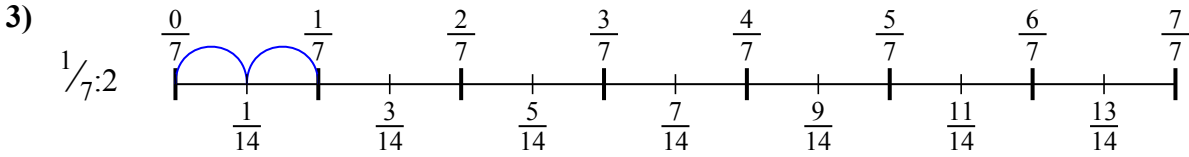
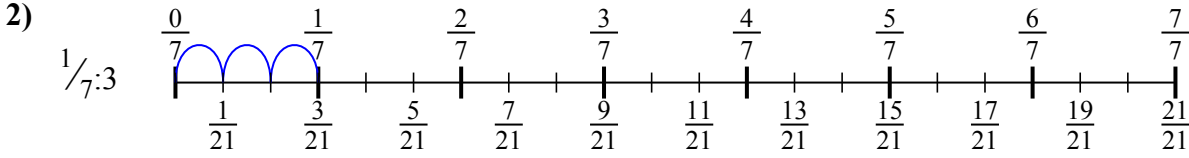
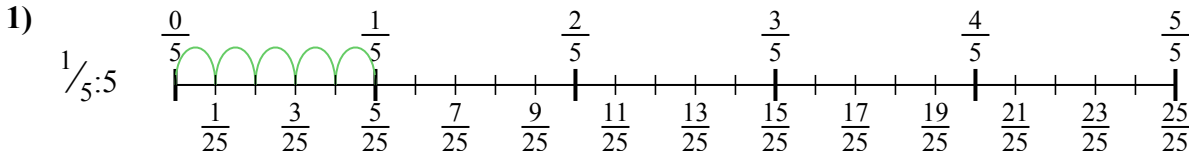
9. \_\_\_\_\_





Используйте числовую прямую для решения задачи. Первая отмечена для Вас.

**ОТВЕТЫ**



1.  $\frac{1}{25}$

2.  $\frac{1}{21}$

3.  $\frac{1}{14}$

4.  $\frac{1}{35}$

5.  $\frac{1}{24}$

6.  $\frac{1}{18}$

7.  $\frac{1}{24}$

8.  $\frac{1}{18}$

9.  $\frac{1}{10}$



Используйте числовую прямую для решения задачи. Первая отмечена для Вас.

**ОТВЕТЫ**

$\frac{1}{18}$

$\frac{1}{35}$

$\frac{1}{18}$

$\frac{1}{21}$

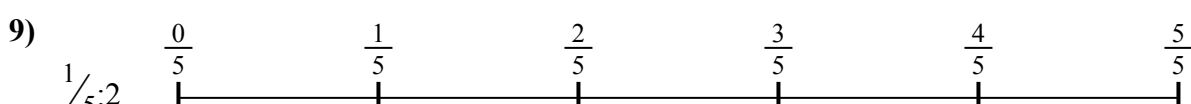

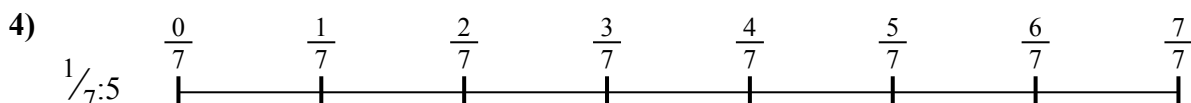
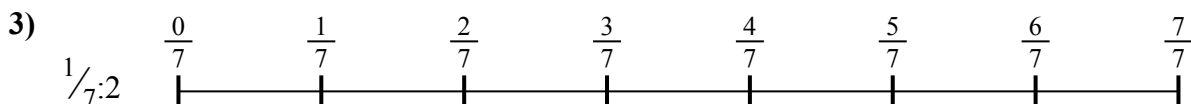
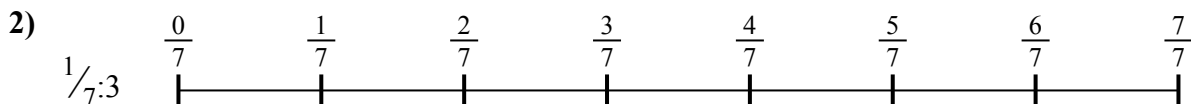
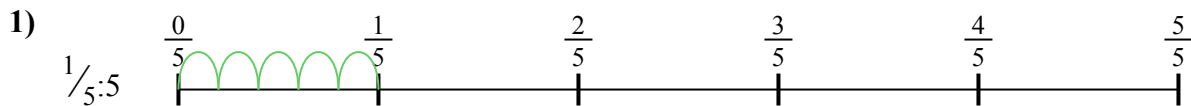
$\frac{1}{24}$

$\frac{1}{14}$

$\frac{1}{10}$

$\frac{1}{25}$

$\frac{1}{24}$



1. \_\_\_\_\_

2. \_\_\_\_\_

3. \_\_\_\_\_

4. \_\_\_\_\_

5. \_\_\_\_\_

6. \_\_\_\_\_

7. \_\_\_\_\_

8. \_\_\_\_\_

9. \_\_\_\_\_



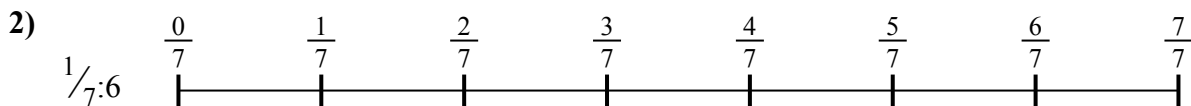
Используйте числовую прямую для решения задачи. Первая отмечена для Вас.

**ОТВЕТЫ**



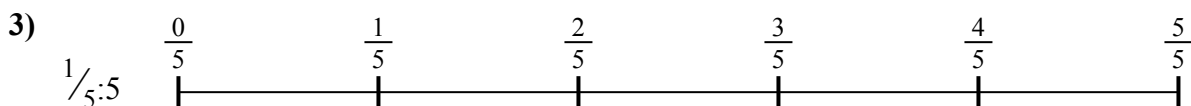
1. \_\_\_\_\_

2. \_\_\_\_\_




3. \_\_\_\_\_

4. \_\_\_\_\_



5. \_\_\_\_\_

6. \_\_\_\_\_

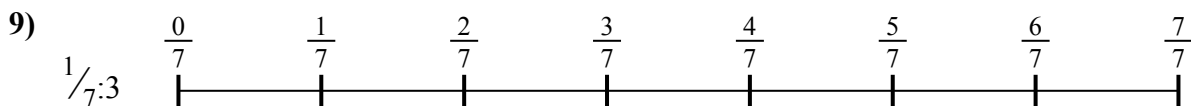
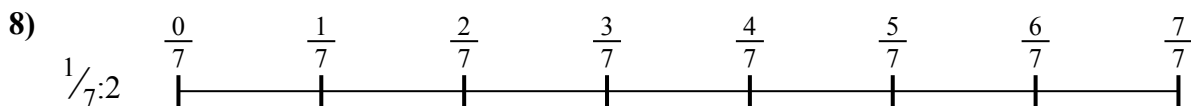


7. \_\_\_\_\_

8. \_\_\_\_\_



9. \_\_\_\_\_

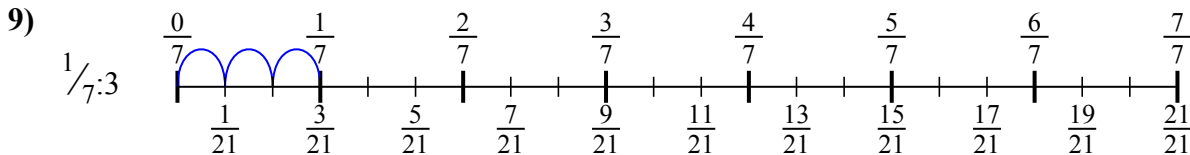
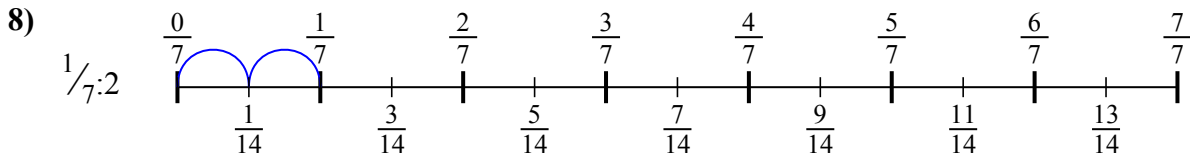
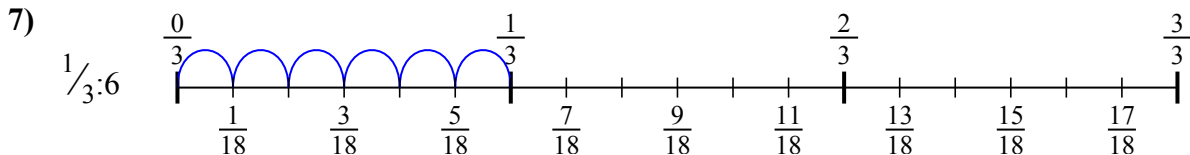
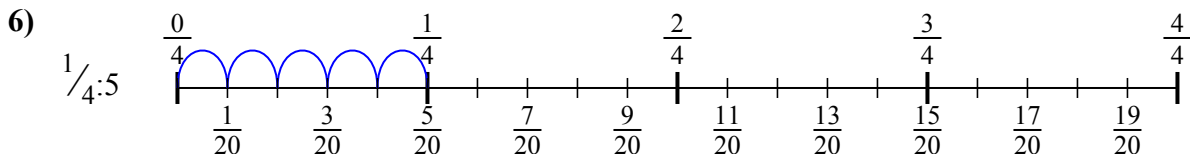
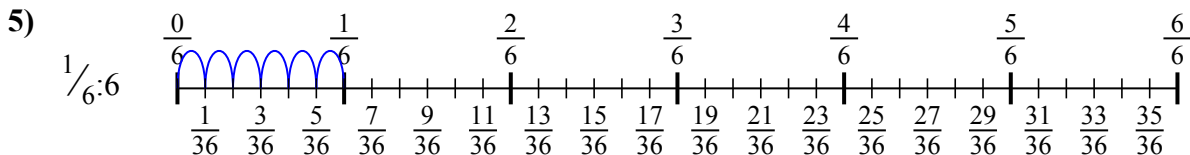
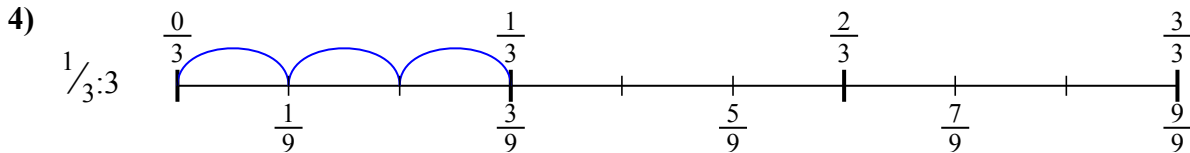
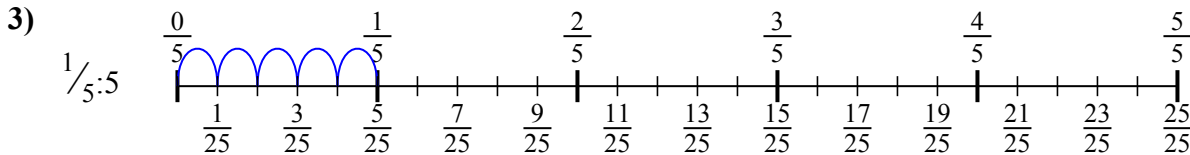
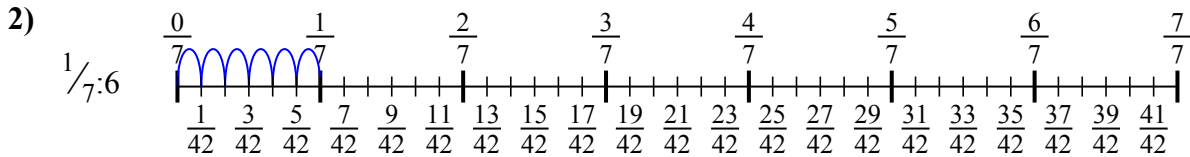
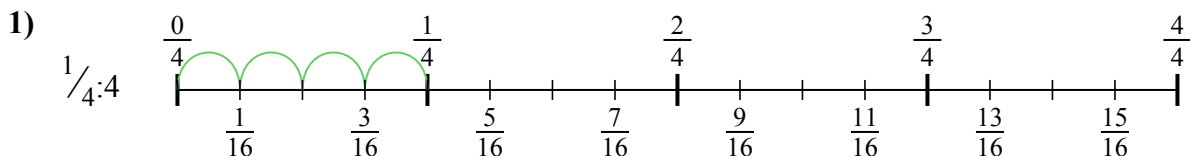






Используйте числовую прямую для решения задачи. Первая отмечена для Вас.

**ОТВЕТЫ**



1.  $\frac{1}{16}$

2.  $\frac{1}{42}$

3.  $\frac{1}{25}$

4.  $\frac{1}{9}$

5.  $\frac{1}{36}$

6.  $\frac{1}{20}$

7.  $\frac{1}{18}$

8.  $\frac{1}{14}$

9.  $\frac{1}{21}$



Используйте числовую прямую для решения задачи. Первая отмечена для Вас.

**ОТВЕТЫ**

$\frac{1}{42}$

$\frac{1}{20}$

$\frac{1}{14}$

$\frac{1}{21}$

$\frac{1}{36}$

$\frac{1}{25}$

$\frac{1}{16}$

$\frac{1}{9}$

$\frac{1}{18}$

1. \_\_\_\_\_

2. \_\_\_\_\_

3. \_\_\_\_\_

4. \_\_\_\_\_

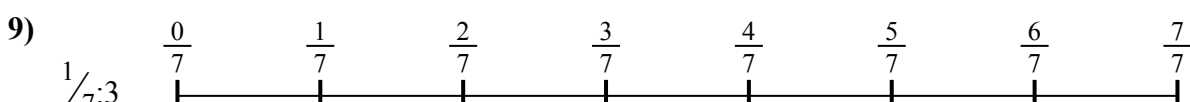
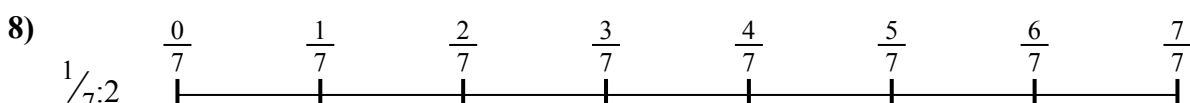

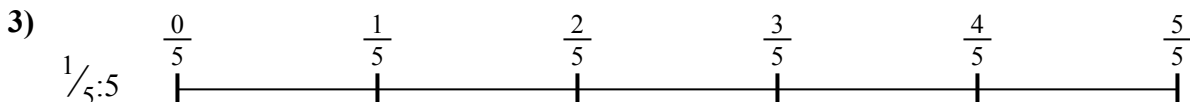
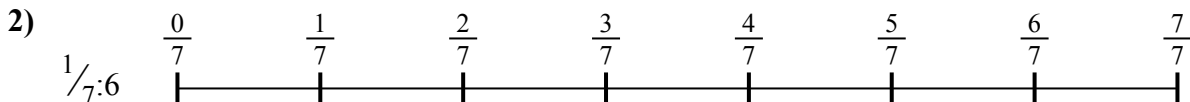

5. \_\_\_\_\_

6. \_\_\_\_\_

7. \_\_\_\_\_

8. \_\_\_\_\_

9. \_\_\_\_\_





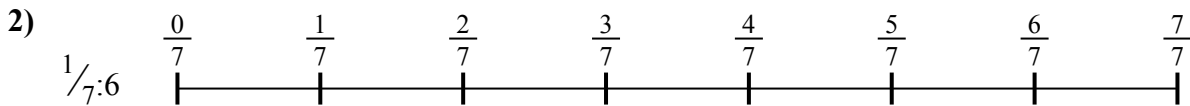
Используйте числовую прямую для решения задачи. Первая отмечена для Вас.

**ОТВЕТЫ**



1. \_\_\_\_\_

2. \_\_\_\_\_



3. \_\_\_\_\_

4. \_\_\_\_\_



5. \_\_\_\_\_

6. \_\_\_\_\_


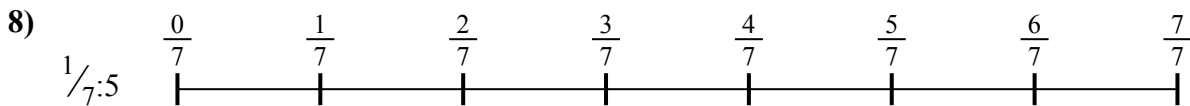
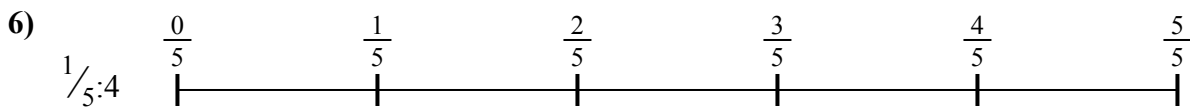


7. \_\_\_\_\_

8. \_\_\_\_\_



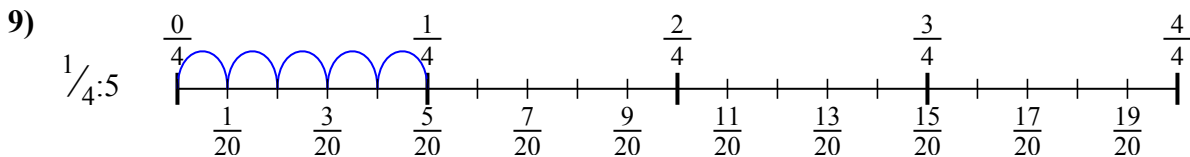
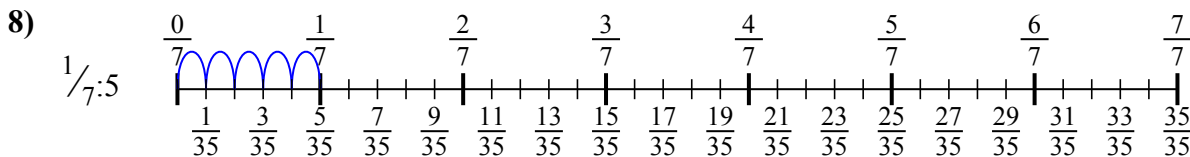
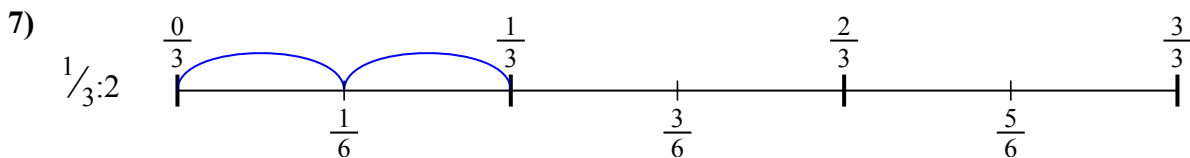
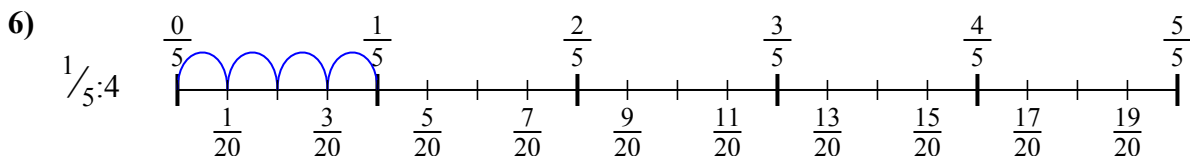
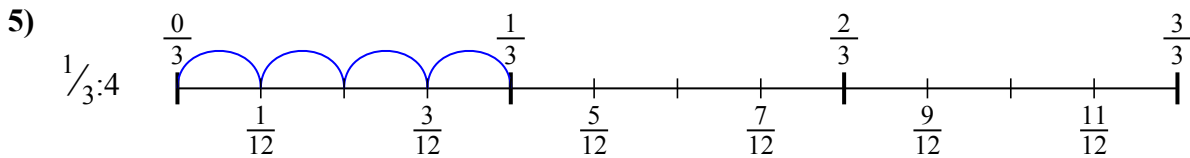
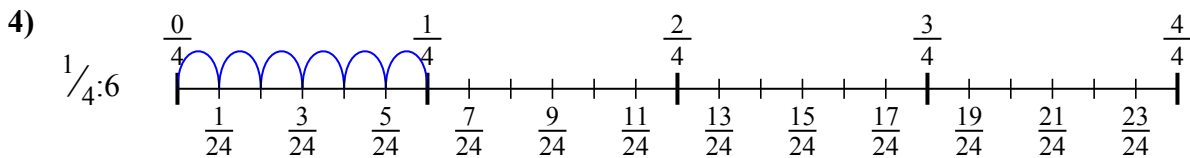
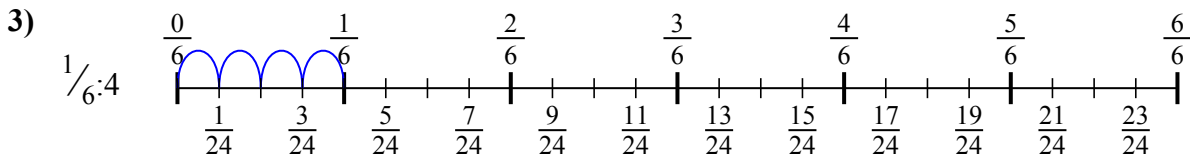
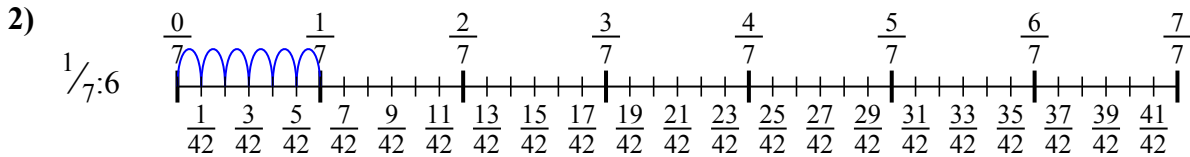
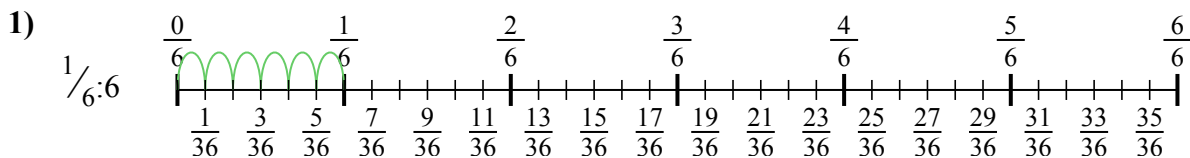
9. \_\_\_\_\_





Используйте числовую прямую для решения задачи. Первая отмечена для Вас.

**ОТВЕТЫ**



1.  $\frac{1}{36}$

2.  $\frac{1}{42}$

3.  $\frac{1}{24}$

4.  $\frac{1}{24}$

5.  $\frac{1}{12}$

6.  $\frac{1}{20}$

7.  $\frac{1}{6}$

8.  $\frac{1}{35}$

9.  $\frac{1}{20}$



Используйте числовую прямую для решения задачи. Первая отмечена для Вас.

**ОТВЕТЫ**

$\frac{1}{35}$

$\frac{1}{6}$

$\frac{1}{24}$

$\frac{1}{42}$

$\frac{1}{24}$

$\frac{1}{36}$

$\frac{1}{20}$

$\frac{1}{20}$

$\frac{1}{12}$

1. \_\_\_\_\_

2. \_\_\_\_\_

3. \_\_\_\_\_

4. \_\_\_\_\_

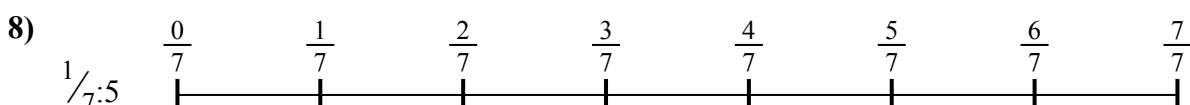
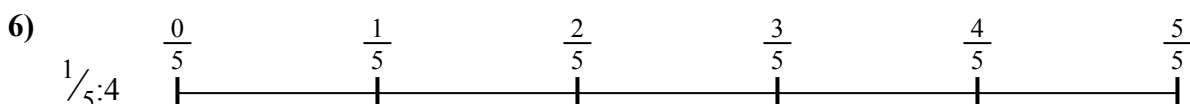


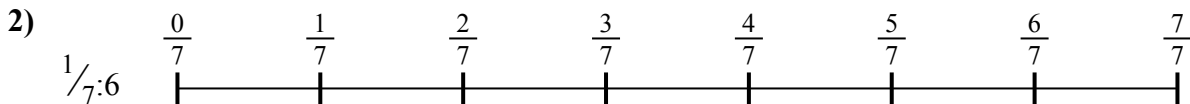
5. \_\_\_\_\_

6. \_\_\_\_\_

7. \_\_\_\_\_

8. \_\_\_\_\_


9. \_\_\_\_\_





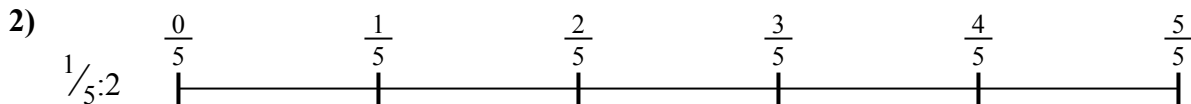
Используйте числовую прямую для решения задачи. Первая отмечена для Вас.

**ОТВЕТЫ**



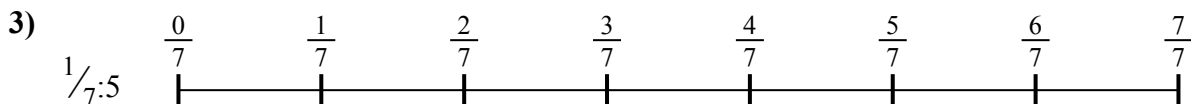
1. \_\_\_\_\_

2. \_\_\_\_\_



3. \_\_\_\_\_

4. \_\_\_\_\_



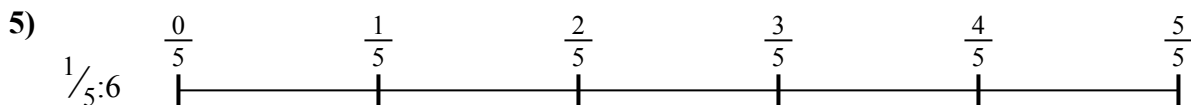
5. \_\_\_\_\_

6. \_\_\_\_\_

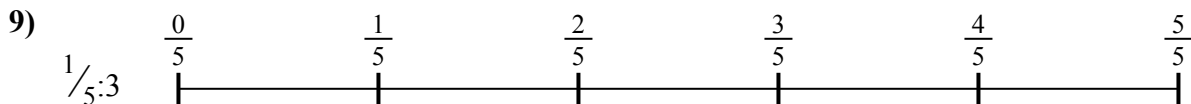




7. \_\_\_\_\_

8. \_\_\_\_\_



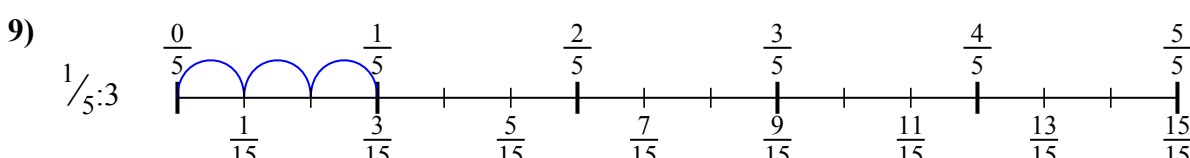
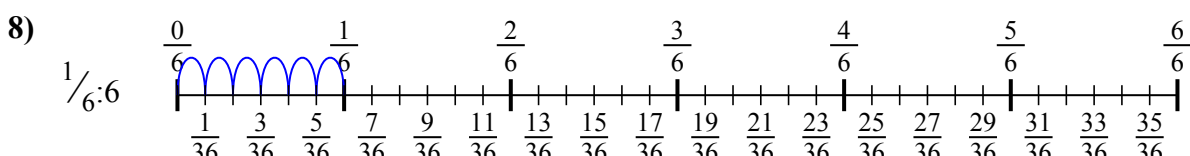
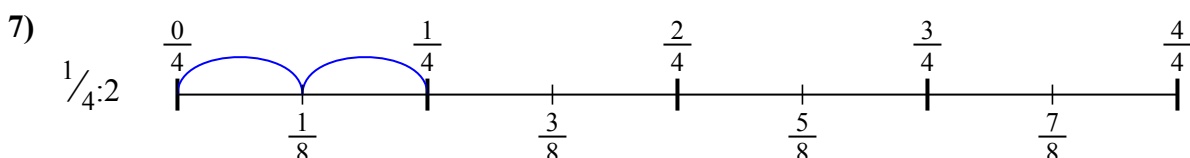
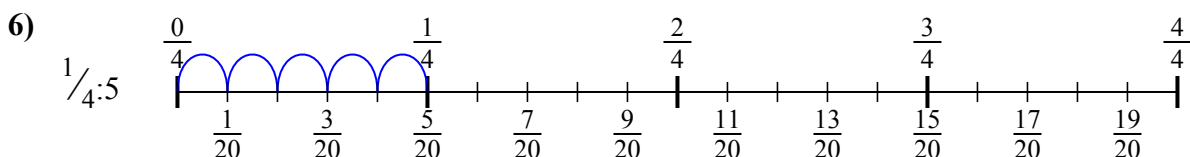
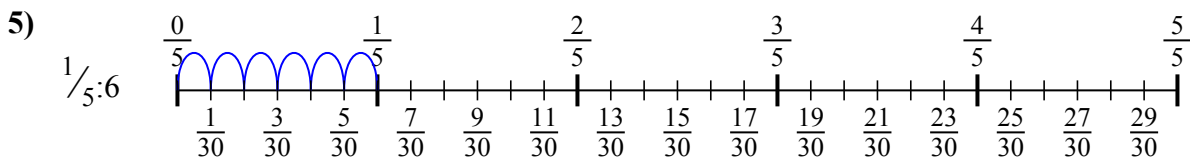
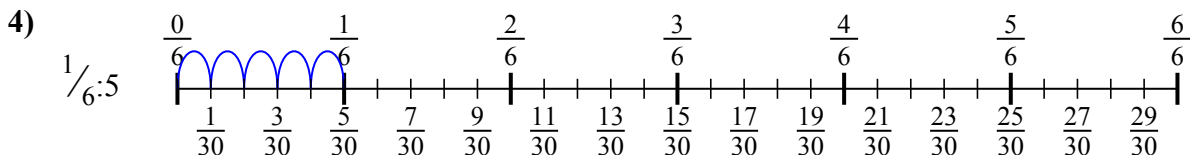
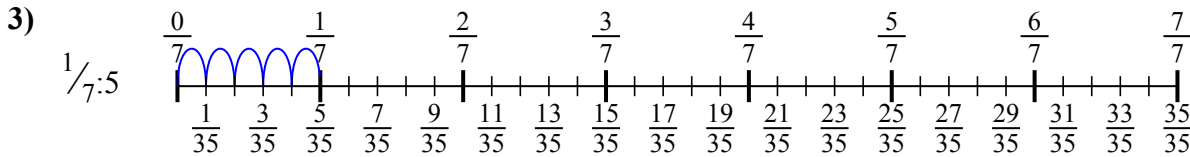
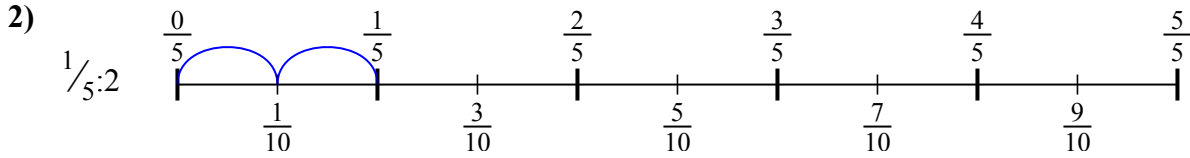
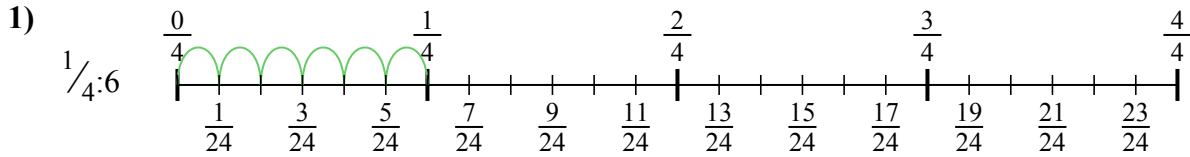
9. \_\_\_\_\_





Используйте числовую прямую для решения задачи. Первая отмечена для Вас.

**ОТВЕТЫ**



1.  $\frac{1}{24}$

2.  $\frac{1}{10}$

3.  $\frac{1}{35}$

4.  $\frac{1}{30}$

5.  $\frac{1}{30}$

6.  $\frac{1}{20}$

7.  $\frac{1}{8}$

8.  $\frac{1}{36}$

9.  $\frac{1}{15}$



Используйте числовую прямую для решения задачи. Первая отмечена для Вас.

**ОТВЕТЫ**

$\frac{1}{30}$

$\frac{1}{36}$

$\frac{1}{20}$

$\frac{1}{8}$

$\frac{1}{15}$

$\frac{1}{24}$

$\frac{1}{30}$

$\frac{1}{35}$

$\frac{1}{10}$

1. \_\_\_\_\_

2. \_\_\_\_\_

3. \_\_\_\_\_

4. \_\_\_\_\_

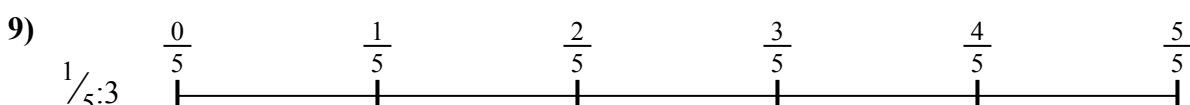

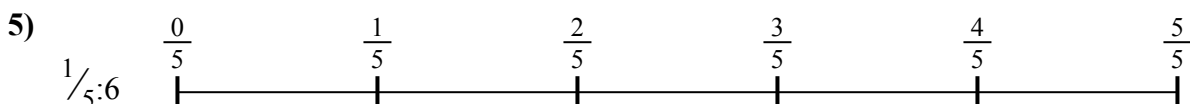
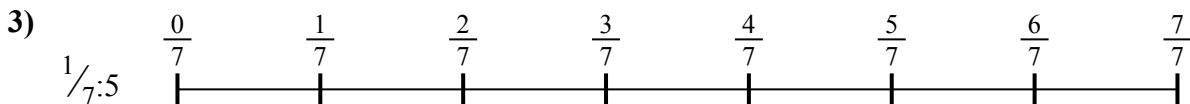
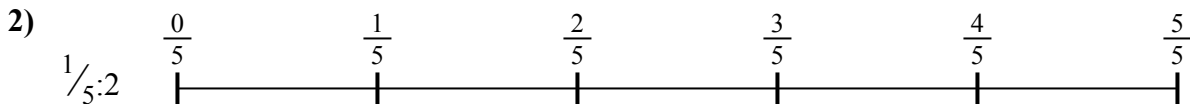
5. \_\_\_\_\_

6. \_\_\_\_\_

7. \_\_\_\_\_

8. \_\_\_\_\_

9. \_\_\_\_\_







Используйте числовую прямую для решения задачи. Первая отмечена для Вас.

**ОТВЕТЫ**

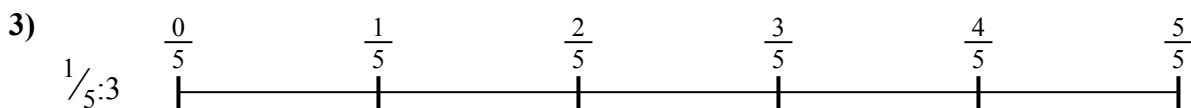
1. \_\_\_\_\_

2. \_\_\_\_\_



3. \_\_\_\_\_

4. \_\_\_\_\_



5. \_\_\_\_\_

6. \_\_\_\_\_

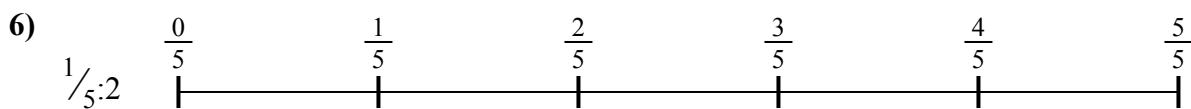


7. \_\_\_\_\_

8. \_\_\_\_\_



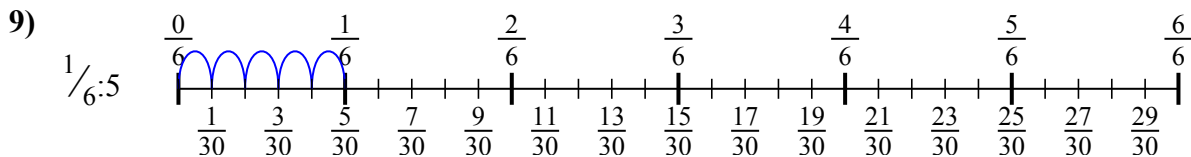
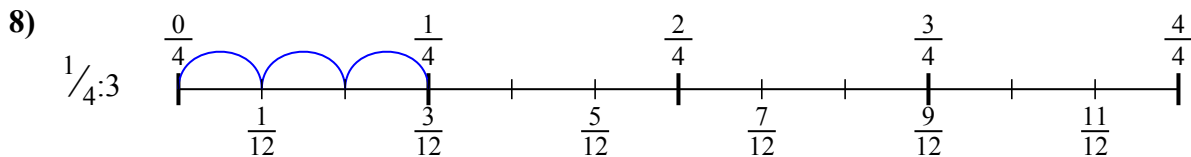
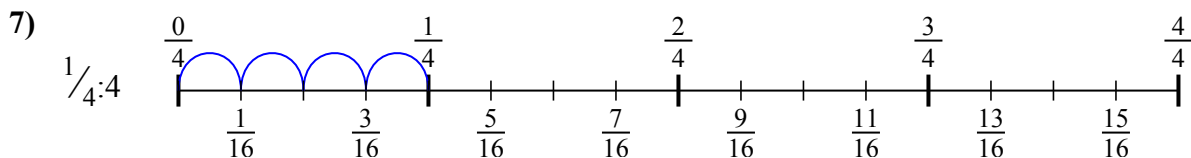
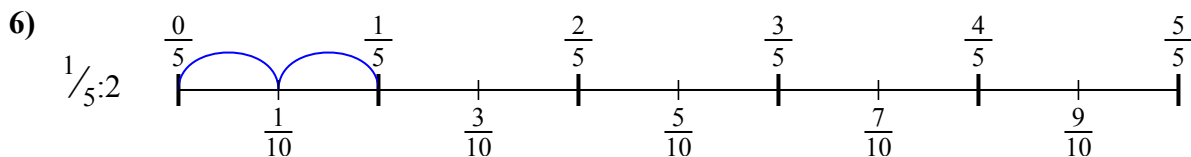
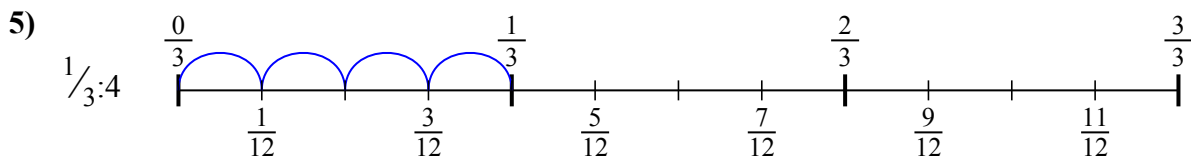
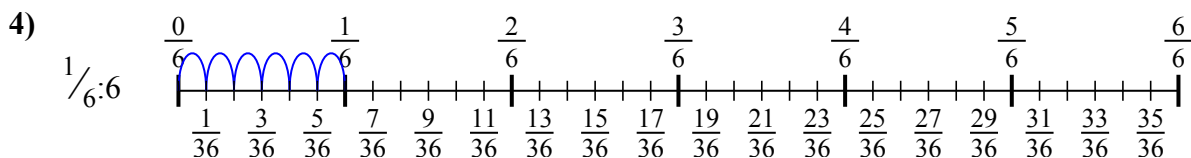
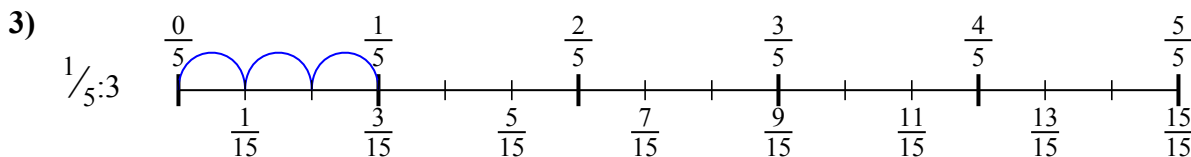
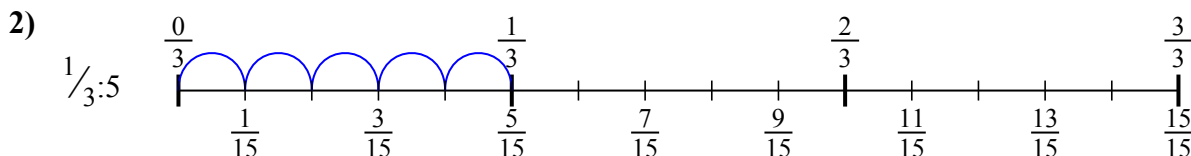
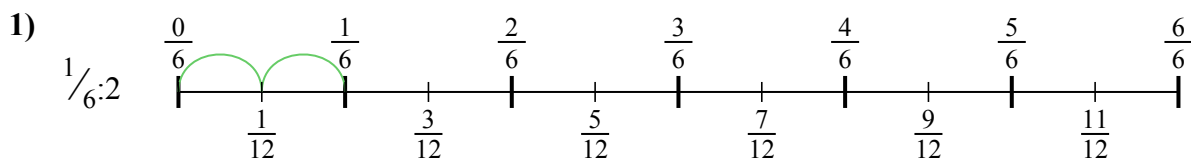
9. \_\_\_\_\_





Используйте числовую прямую для решения задачи. Первая отмечена для Вас.

**ОТВЕТЫ**



1.  $\frac{1}{12}$

2.  $\frac{1}{15}$

3.  $\frac{1}{15}$

4.  $\frac{1}{36}$

5.  $\frac{1}{12}$

6.  $\frac{1}{10}$

7.  $\frac{1}{16}$

8.  $\frac{1}{12}$

9.  $\frac{1}{30}$



Используйте числовую прямую для решения задачи. Первая отмечена для Вас.



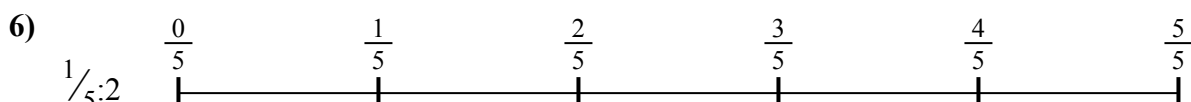

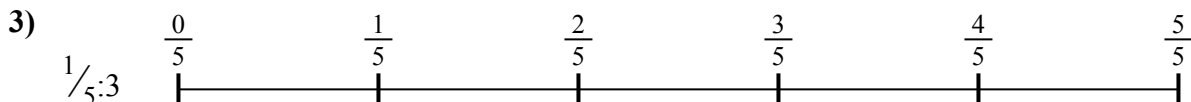
**ОТВЕТЫ**

$\frac{1}{36}$   
 $\frac{1}{15}$   
 $\frac{1}{15}$

$\frac{1}{12}$   
 $\frac{1}{10}$

$\frac{1}{30}$   
 $\frac{1}{12}$

$\frac{1}{12}$   
 $\frac{1}{16}$



1. \_\_\_\_\_
2. \_\_\_\_\_
3. \_\_\_\_\_
4. \_\_\_\_\_
5. \_\_\_\_\_
6. \_\_\_\_\_
7. \_\_\_\_\_
8. \_\_\_\_\_
9. \_\_\_\_\_



Используйте числовую прямую для решения задачи. Первая отмечена для Вас.

**ОТВЕТЫ**



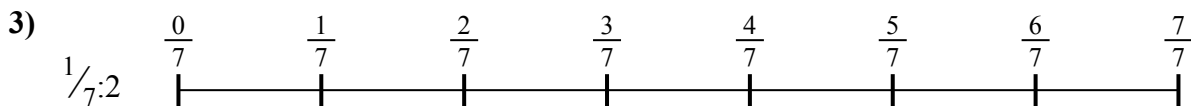
1. \_\_\_\_\_

2. \_\_\_\_\_



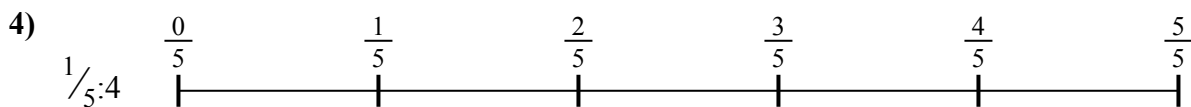
3. \_\_\_\_\_

4. \_\_\_\_\_



5. \_\_\_\_\_

6. \_\_\_\_\_

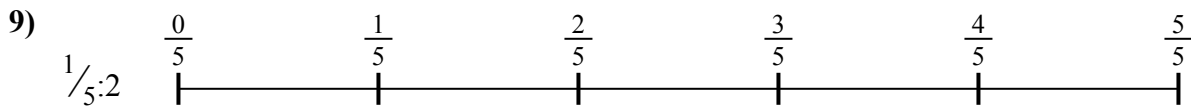
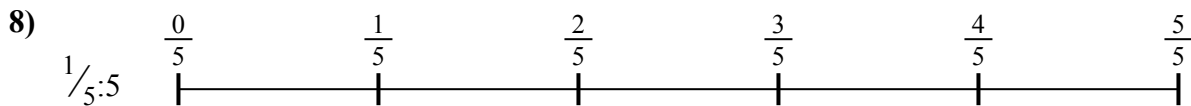


7. \_\_\_\_\_

8. \_\_\_\_\_



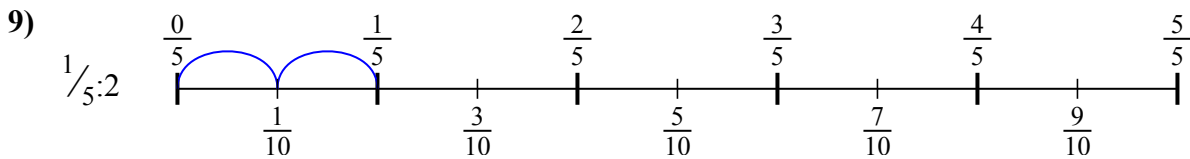
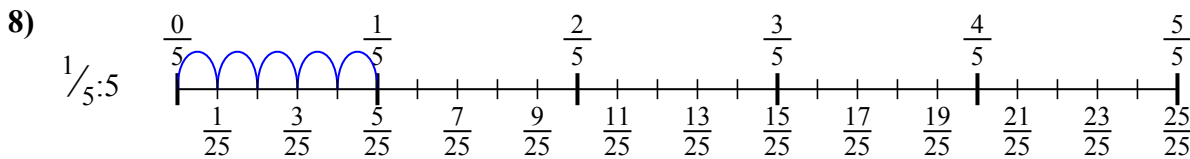
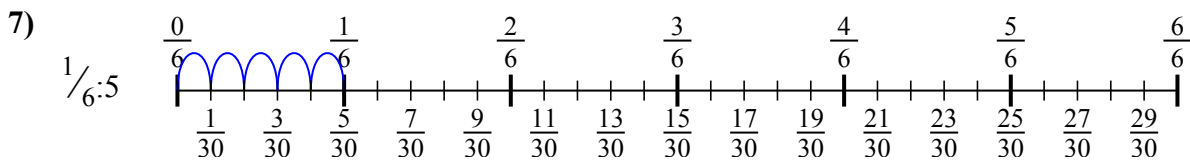
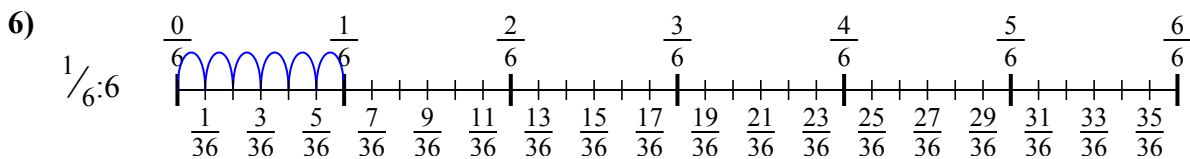
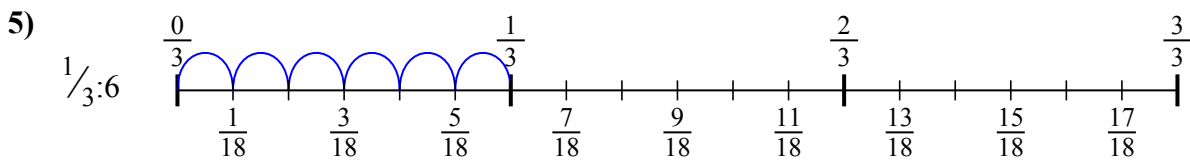
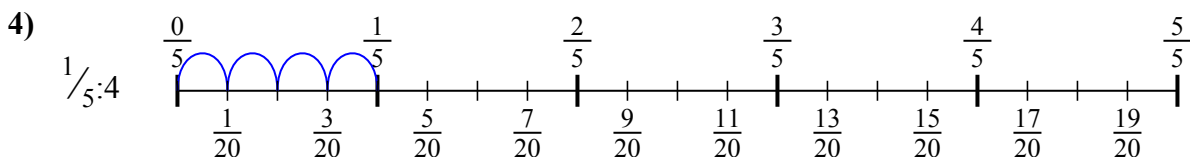
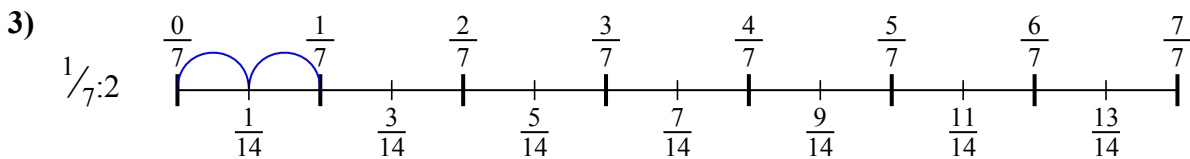
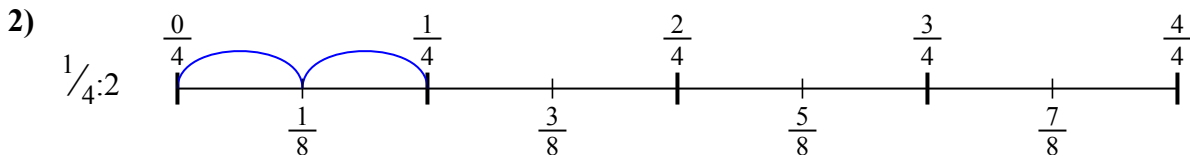
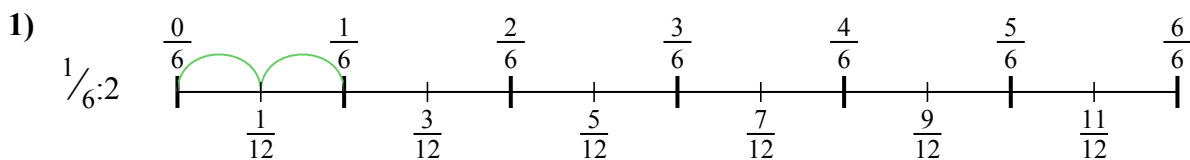
9. \_\_\_\_\_





Используйте числовую прямую для решения задачи. Первая отмечена для Вас.

**ОТВЕТЫ**



1.  $\frac{1}{12}$

2.  $\frac{1}{8}$

3.  $\frac{1}{14}$

4.  $\frac{1}{20}$

5.  $\frac{1}{18}$

6.  $\frac{1}{36}$

7.  $\frac{1}{30}$

8.  $\frac{1}{25}$

9.  $\frac{1}{10}$



Используйте числовую прямую для решения задачи. Первая отмечена для Вас.

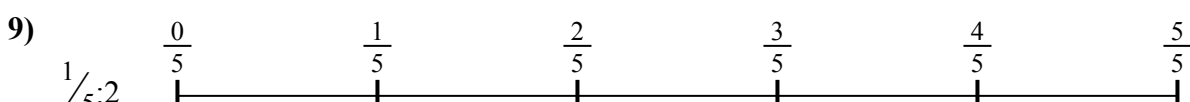
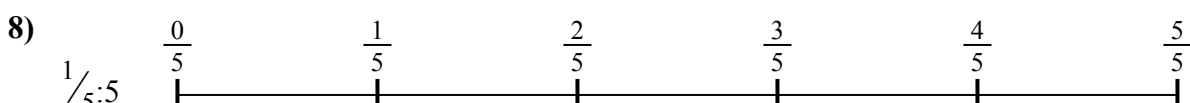
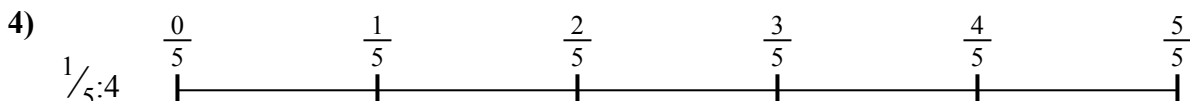
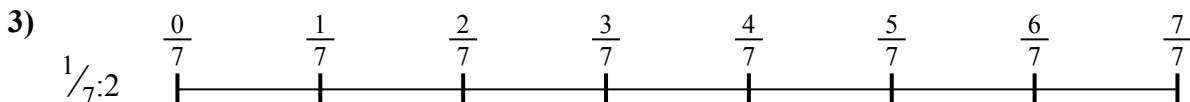
**ОТВЕТЫ**

$\frac{1}{30}$   
 $\frac{1}{18}$   
 $\frac{1}{10}$

$\frac{1}{12}$   
 $\frac{1}{25}$

$\frac{1}{36}$   
 $\frac{1}{14}$

$\frac{1}{8}$   
 $\frac{1}{20}$



1. \_\_\_\_\_
2. \_\_\_\_\_
3. \_\_\_\_\_
4. \_\_\_\_\_
5. \_\_\_\_\_
6. \_\_\_\_\_
7. \_\_\_\_\_
8. \_\_\_\_\_
9. \_\_\_\_\_