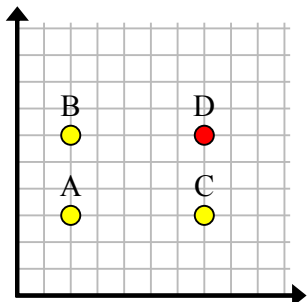


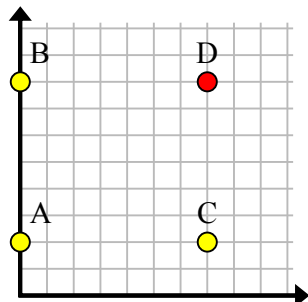


Найдите координаты точки D, чтобы получился прямоугольник.

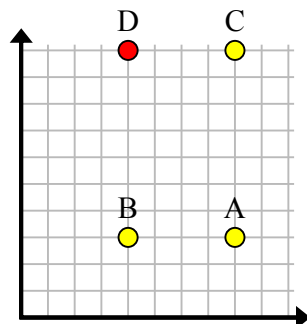
об)



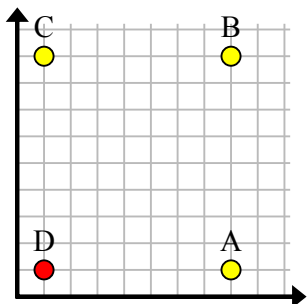
1)



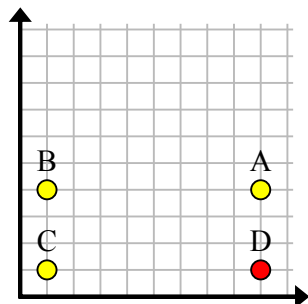
2)



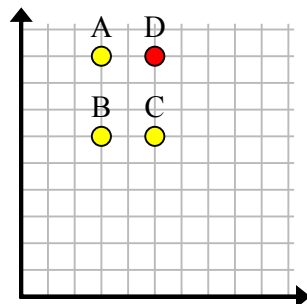
3)



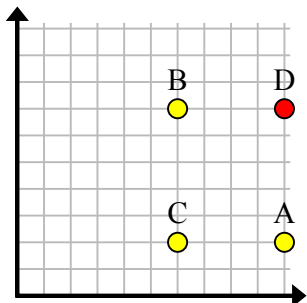
4)



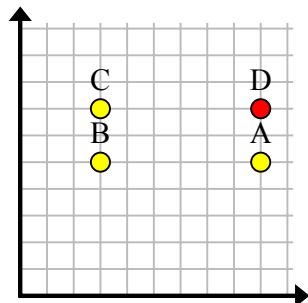
5)



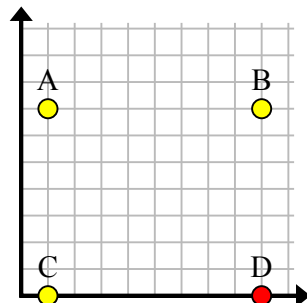
6)



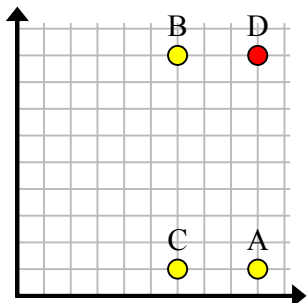
7)



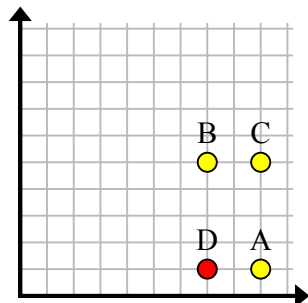
8)



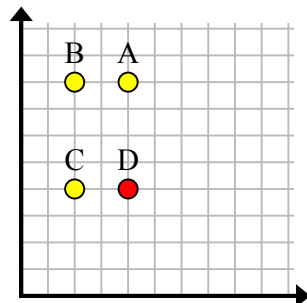
9)



10)



11)

**Ответы**об. (7, 6)1. (7, 8)2. (4, 10)3. (1, 1)4. (9, 1)5. (5, 9)6. (10, 7)7. (9, 7)8. (9, 0)9. (9, 9)10. (7, 1)11. (4, 4)