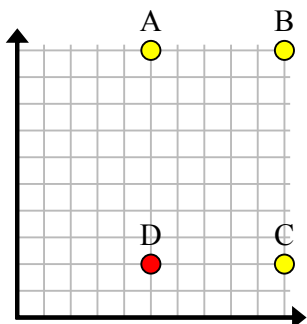




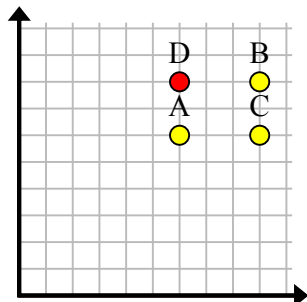


Найдите координаты точки D, чтобы получился прямоугольник.

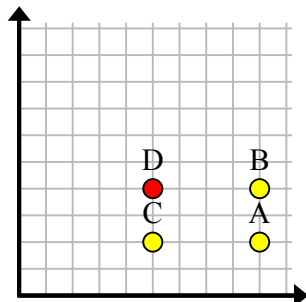
об)



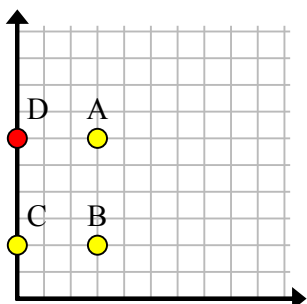
1)



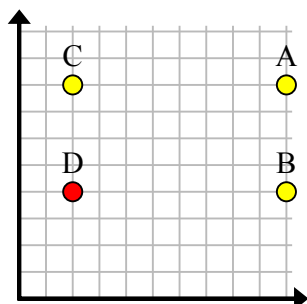
2)



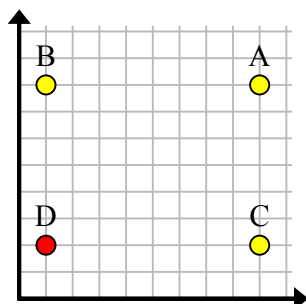
3)



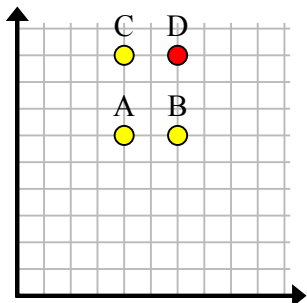
4)



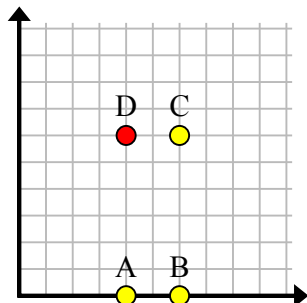
5)



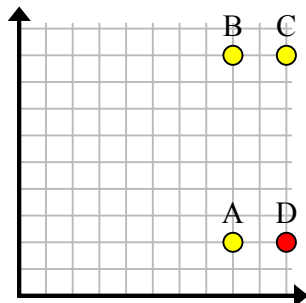
6)



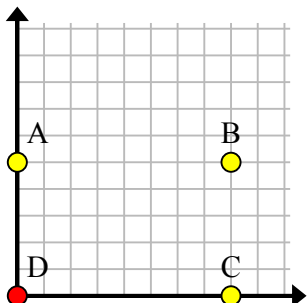
7)



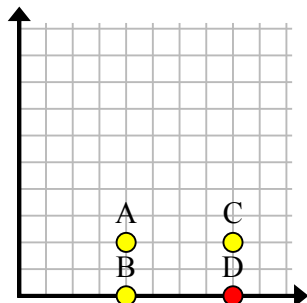
8)



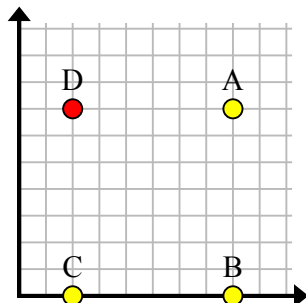
9)



10)



11)

**Ответы**об. (5, 2)1. (6, 8)2. (5, 4)3. (0, 6)4. (2, 4)5. (1, 2)6. (6, 9)7. (4, 6)8. (10, 2)9. (0, 0)10. (8, 0)11. (2, 7)