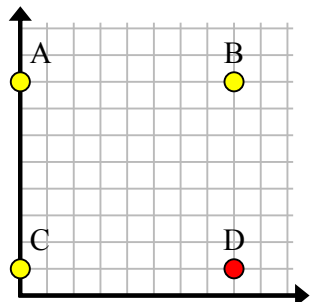




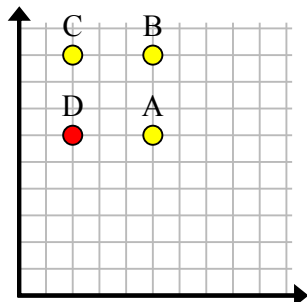


Найдите координаты точки D, чтобы получился прямоугольник.

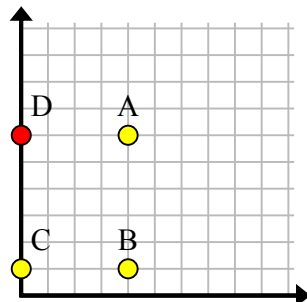
об)



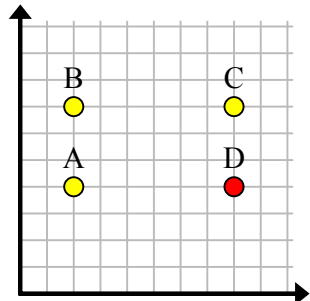
1)



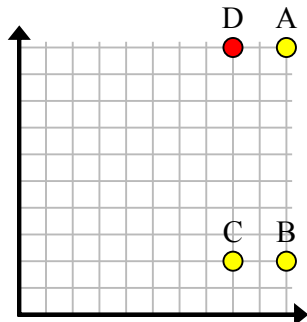
2)



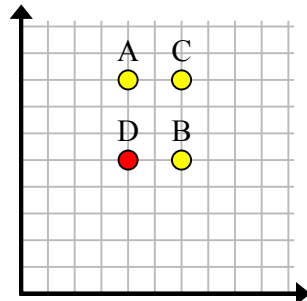
3)



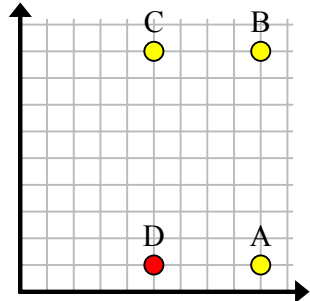
4)



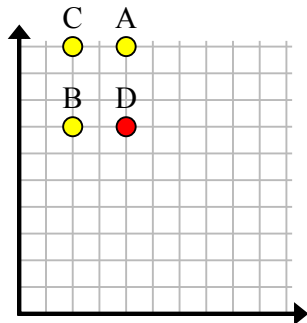
5)



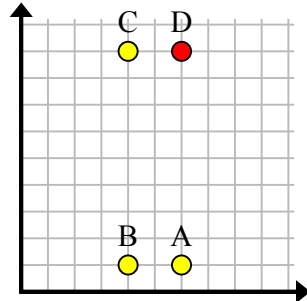
6)



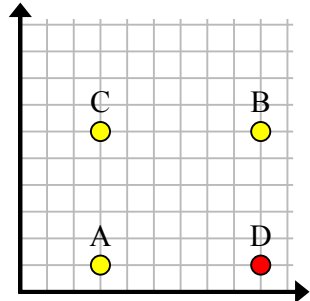
7)



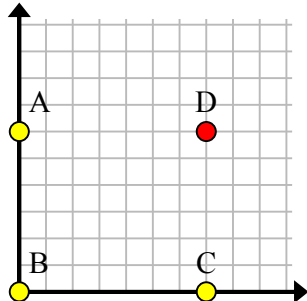
8)



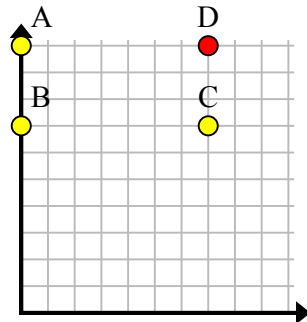
9)



10)



11)

**Ответы**об. (8, 1)1. (2, 6)2. (0, 6)3. (8, 4)4. (8, 10)5. (4, 5)6. (5, 1)7. (4, 7)8. (6, 9)9. (9, 1)10. (7, 6)11. (7, 10)