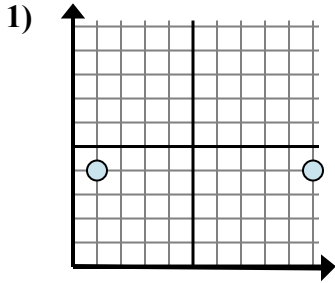


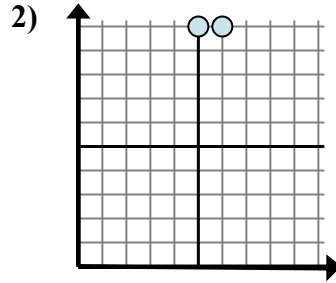


Определите, какое выражение лучше всего показывает расстояние между двумя точками.

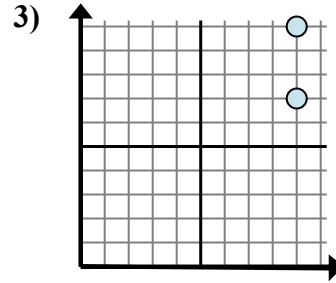
**ОТВЕТЫ**



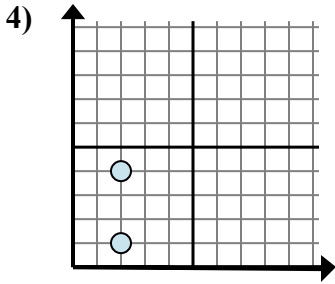
- A.  $4 - 4$
- B.  $4 - 4$
- C.  $4 - 10$
- D.  $10 - 1$



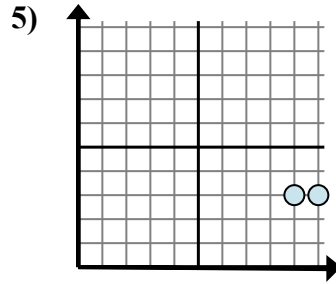
- A.  $6 - 10$
- B.  $5 - 10$
- C.  $6 - 5$
- D.  $10 - 5$



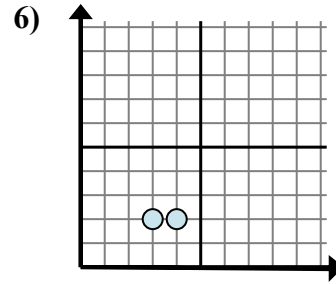
- A.  $10 - 7$
- B.  $9 - 9$
- C.  $7 - 10$
- D.  $9 - 7$



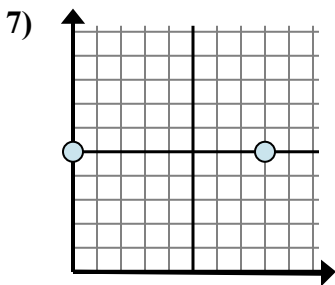
- A.  $2 - 4$
- B.  $4 - 1$
- C.  $1 - 4$
- D.  $2 - 2$



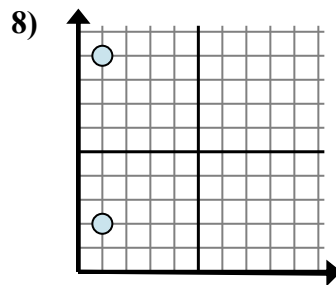
- A.  $9 - 10$
- B.  $10 - 3$
- C.  $3 - 9$
- D.  $10 - 9$



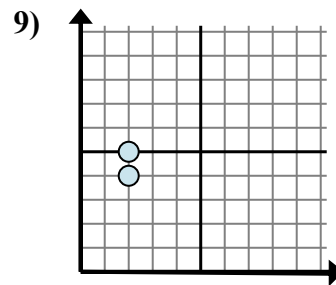
- A.  $3 - 2$
- B.  $2 - 4$
- C.  $2 - 4$
- D.  $4 - 3$



- A.  $5 - 8$
- B.  $5 - 5$
- C.  $8 - 0$
- D.  $8 - 5$



- A.  $1 - 1$
- B.  $1 - 2$
- C.  $9 - 2$
- D.  $2 - 9$

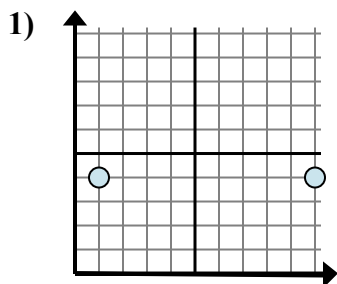


- A.  $5 - 2$
- B.  $5 - 4$
- C.  $2 - 2$
- D.  $2 - 2$

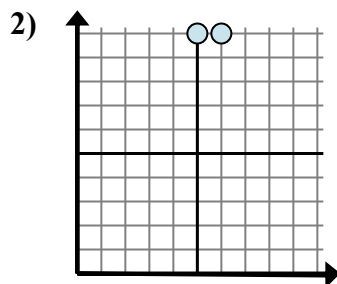
- 1. \_\_\_\_\_
- 2. \_\_\_\_\_
- 3. \_\_\_\_\_
- 4. \_\_\_\_\_
- 5. \_\_\_\_\_
- 6. \_\_\_\_\_
- 7. \_\_\_\_\_
- 8. \_\_\_\_\_
- 9. \_\_\_\_\_



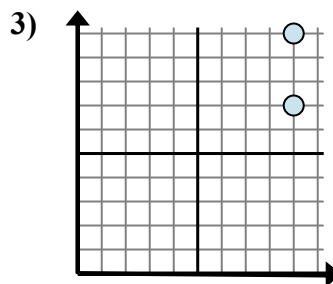
Определите, какое выражение лучше всего показывает расстояние между двумя точками.



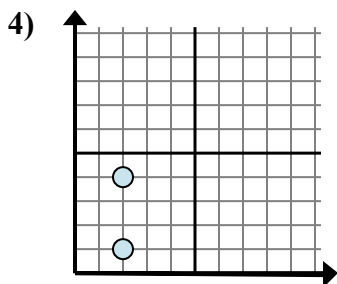
- A.  $4 - 4$
- B.  $4 - 4$
- C.  $4 - 10$
- D.  $10 - 1$



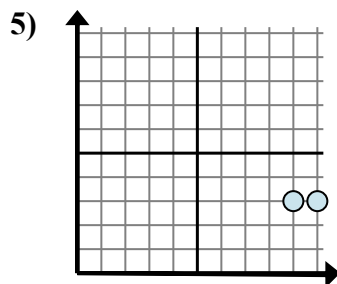
- A.  $6 - 10$
- B.  $5 - 10$
- C.  $6 - 5$
- D.  $10 - 5$



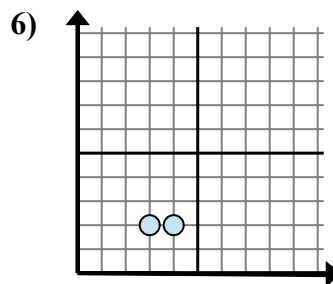
- A.  $10 - 7$
- B.  $9 - 9$
- C.  $7 - 10$
- D.  $9 - 7$



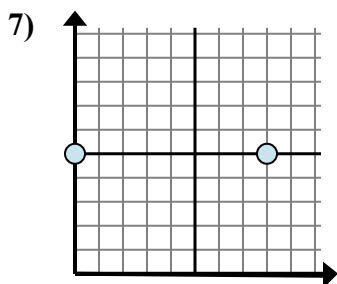
- A.  $2 - 4$
- B.  $4 - 1$
- C.  $1 - 4$
- D.  $2 - 2$



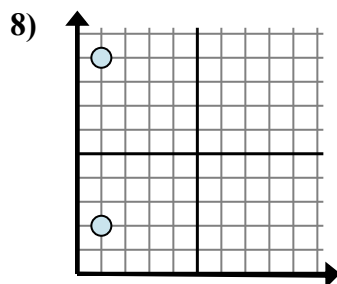
- A.  $9 - 10$
- B.  $10 - 3$
- C.  $3 - 9$
- D.  $10 - 9$



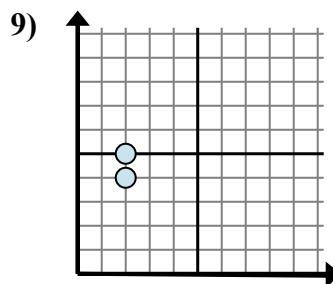
- A.  $3 - 2$
- B.  $2 - 4$
- C.  $2 - 4$
- D.  $4 - 3$



- A.  $5 - 8$
- B.  $5 - 5$
- C.  $8 - 0$
- D.  $8 - 5$



- A.  $1 - 1$
- B.  $1 - 2$
- C.  $9 - 2$
- D.  $2 - 9$



- A.  $5 - 2$
- B.  $5 - 4$
- C.  $2 - 2$
- D.  $2 - 2$

**ОТВЕТЫ**

- 1.           **D**
- 2.           **C**
- 3.           **A**
- 4.           **B**
- 5.           **D**
- 6.           **D**
- 7.           **C**
- 8.           **C**
- 9.           **B**