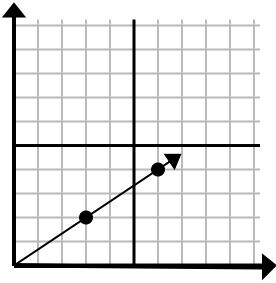




Определите, какой вариант представляет собой точку на линии, если она будет продолжаться.

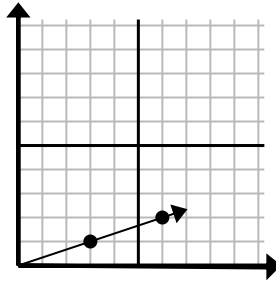
Ответы

1)



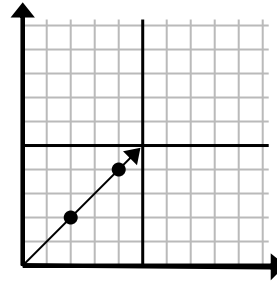
- A. (21 14)  
 B. (12 8)  
 C. (9 6)  
 D. (15 10)

2)



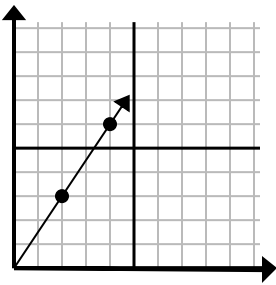
- A. (18 6)  
 B. (12 4)  
 C. (9 3)  
 D. (10 3)

3)



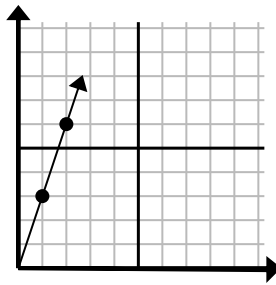
- A. (6 6)  
 B. (12 12)  
 C. (7 7)  
 D. (8 4)

4)



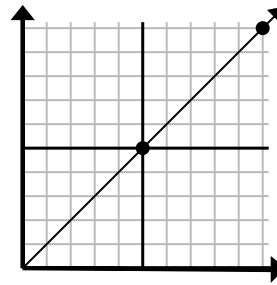
- A. (6 9)  
 B. (14 21)  
 C. (7 5)  
 D. (8 7)

5)



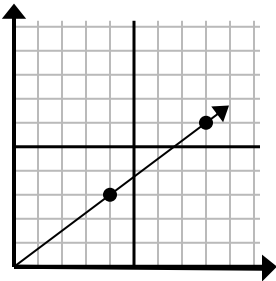
- A. (5 4)  
 B. (4 8)  
 C. (7 21)  
 D. (3 9)

6)



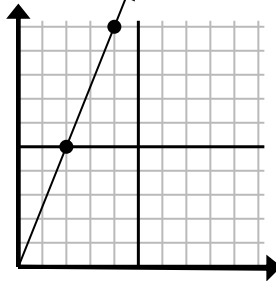
- A. (15 6)  
 B. (30 30)  
 C. (15 15)  
 D. (35 35)

7)



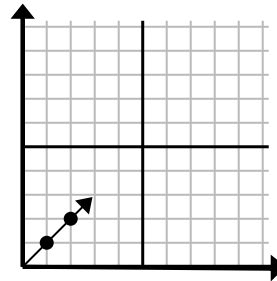
- A. (10 5)  
 B. (10 6)  
 C. (12 9)  
 D. (28 21)

8)



- A. (12 30)  
 B. (8 20)  
 C. (6 15)  
 D. (8 6)

9)



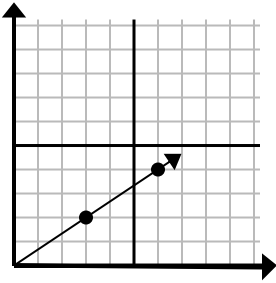
- A. (3 3)  
 B. (3 2)  
 C. (6 6)  
 D. (6 3)

1. \_\_\_\_\_  
 2. \_\_\_\_\_  
 3. \_\_\_\_\_  
 4. \_\_\_\_\_  
 5. \_\_\_\_\_  
 6. \_\_\_\_\_  
 7. \_\_\_\_\_  
 8. \_\_\_\_\_  
 9. \_\_\_\_\_



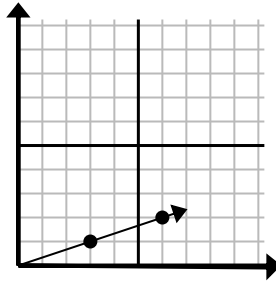
Определите, какой вариант представляет собой точку на линии, если она будет продолжаться.

1)



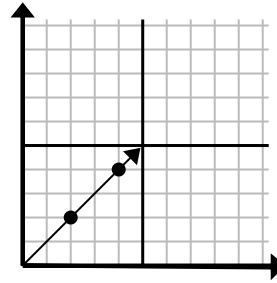
- A. (21 14)  
 B. (12 8)  
 C. (9 6)  
 D. (15 10)

2)



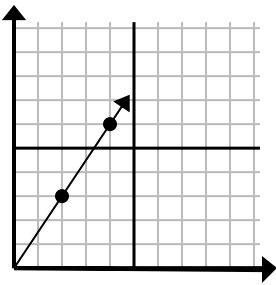
- A. (18 6)  
 B. (12 4)  
 C. (9 3)  
 D. (10 3)

3)



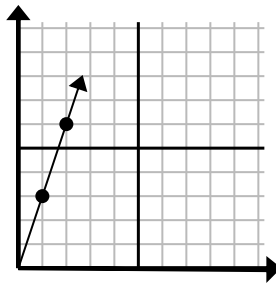
- A. (6 6)  
 B. (12 12)  
 C. (7 7)  
 D. (8 4)

4)



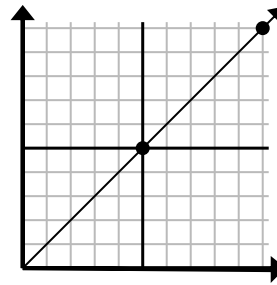
- A. (6 9)  
 B. (14 21)  
 C. (7 5)  
 D. (8 7)

5)



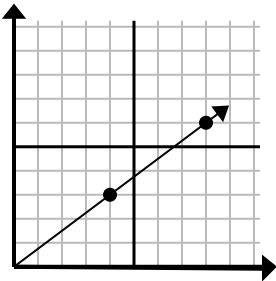
- A. (5 4)  
 B. (4 8)  
 C. (7 21)  
 D. (3 9)

6)



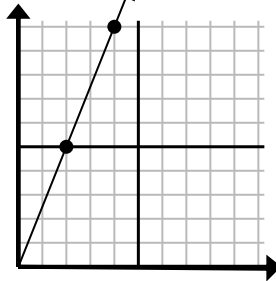
- A. (15 6)  
 B. (30 30)  
 C. (15 15)  
 D. (35 35)

7)



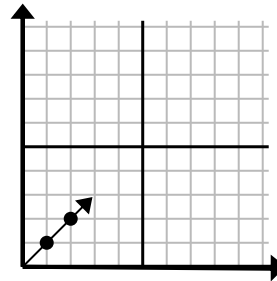
- A. (10 5)  
 B. (10 6)  
 C. (12 9)  
 D. (28 21)

8)



- A. (12 30)  
 B. (8 20)  
 C. (6 15)  
 D. (8 6)

9)



- A. (3 3)  
 B. (3 2)  
 C. (6 6)  
 D. (6 3)

Ответы

1.         C          
 2.         C          
 3.         A          
 4.         A          
 5.         D          
 6.         C          
 7.         C          
 8.         C          
 9.         A