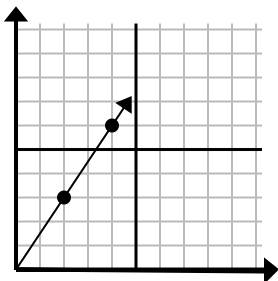




Определите, какой вариант представляет собой точку на линии, если она будет продолжаться.

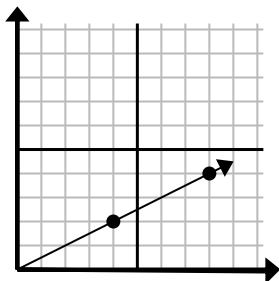
ОТВЕТЫ

1)



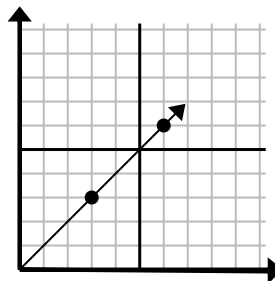
- A. (6 9)  
B. (8 6)  
C. (5 8)  
D. (5 5)

2)



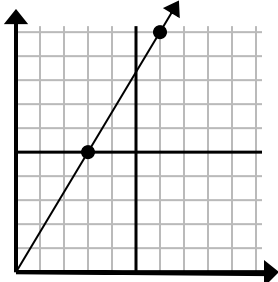
- A. (12 7)  
B. (12 6)  
C. (24 12)  
D. (20 10)

3)



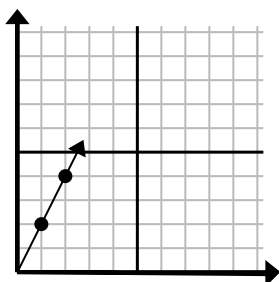
- A. (11 5)  
B. (9 9)  
C. (18 18)  
D. (11 8)

4)



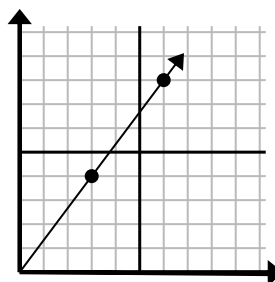
- A. (8 9)  
B. (12 20)  
C. (9 15)  
D. (11 6)

5)



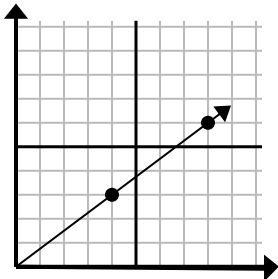
- A. (7 14)  
B. (7 7)  
C. (3 6)  
D. (6 12)

6)



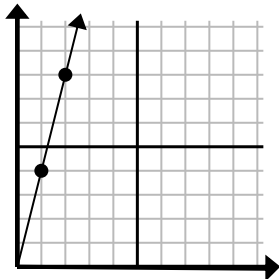
- A. (18 24)  
B. (21 28)  
C. (9 12)  
D. (11 9)

7)



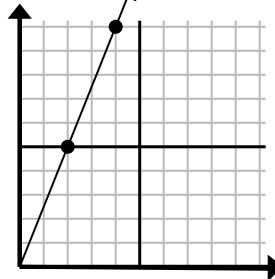
- A. (12 9)  
B. (28 21)  
C. (24 18)  
D. (11 8)

8)



- A. (3 12)  
B. (4 6)  
C. (4 16)  
D. (7 28)

9)



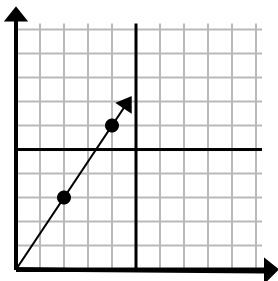
- A. (8 20)  
B. (14 35)  
C. (5 9)  
D. (6 15)

1. \_\_\_\_\_  
2. \_\_\_\_\_  
3. \_\_\_\_\_  
4. \_\_\_\_\_  
5. \_\_\_\_\_  
6. \_\_\_\_\_  
7. \_\_\_\_\_  
8. \_\_\_\_\_  
9. \_\_\_\_\_



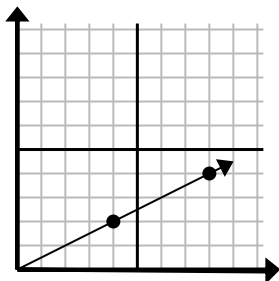
Определите, какой вариант представляет собой точку на линии, если она будет продолжаться.

1)



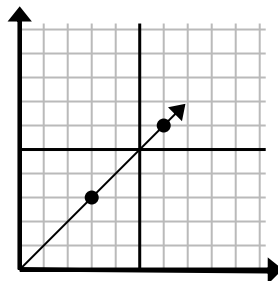
- A. (6 9)
- B. (8 6)
- C. (5 8)
- D. (5 5)

2)



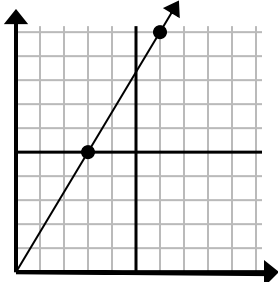
- A. (12 7)
- B. (12 6)
- C. (24 12)
- D. (20 10)

3)



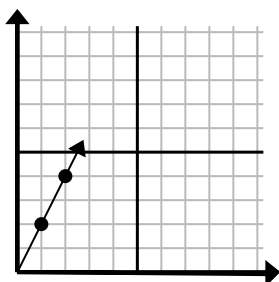
- A. (11 5)
- B. (9 9)
- C. (18 18)
- D. (11 8)

4)



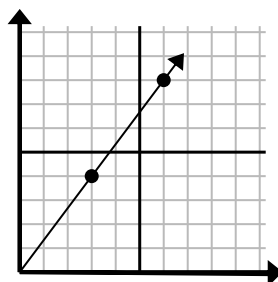
- A. (8 9)
- B. (12 20)
- C. (9 15)
- D. (11 6)

5)



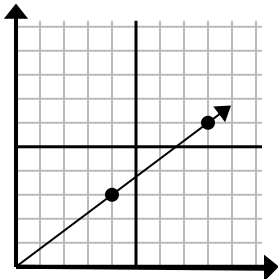
- A. (7 14)
- B. (7 7)
- C. (3 6)
- D. (6 12)

6)



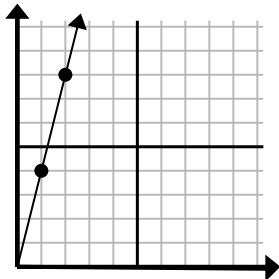
- A. (18 24)
- B. (21 28)
- C. (9 12)
- D. (11 9)

7)



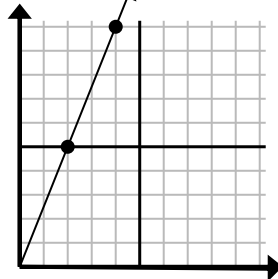
- A. (12 9)
- B. (28 21)
- C. (24 18)
- D. (11 8)

8)



- A. (3 12)
- B. (4 6)
- C. (4 16)
- D. (7 28)

9)



- A. (8 20)
- B. (14 35)
- C. (5 9)
- D. (6 15)

ОТВЕТЫ1.     **A**    2.     **B**    3.     **B**    4.     **C**    5.     **C**    6.     **C**    7.     **A**    8.     **A**    9.     **D**