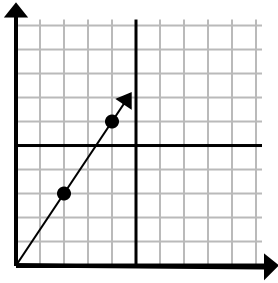




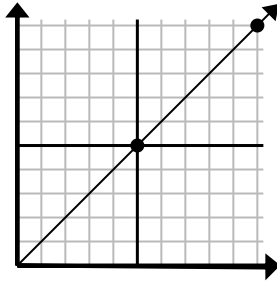
Определите, какой вариант представляет собой точку на линии, если она будет продолжаться.

1)



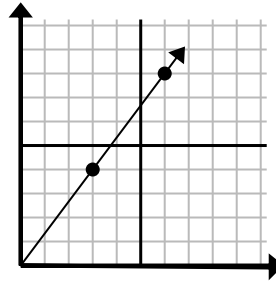
- A. (6 9)
- B. (5 4)
- C. (12 18)
- D. (14 21)

2)



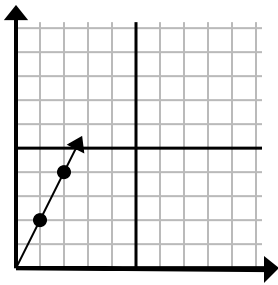
- A. (30 30)
- B. (15 15)
- C. (15 7)
- D. (20 20)

3)



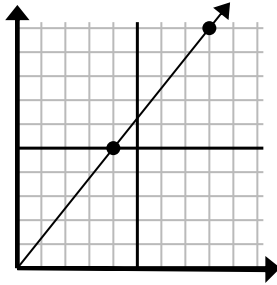
- A. (8 5)
- B. (12 16)
- C. (9 12)
- D. (11 6)

4)



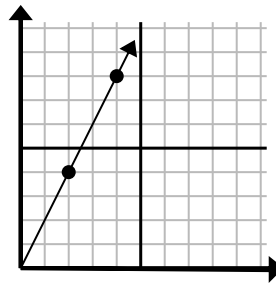
- A. (3 6)
- B. (4 8)
- C. (6 12)
- D. (7 14)

5)



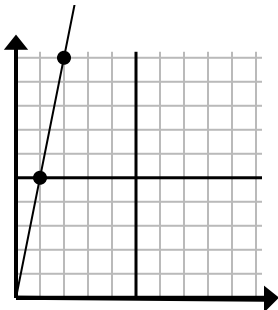
- A. (16 20)
- B. (13 10)
- C. (28 35)
- D. (12 15)

6)



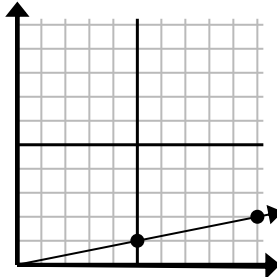
- A. (14 28)
- B. (7 8)
- C. (10 20)
- D. (6 12)

7)



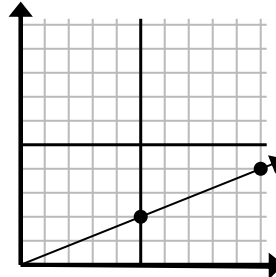
- A. (5 8)
- B. (7 35)
- C. (3 15)
- D. (6 30)

8)



- A. (25 5)
- B. (15 3)
- C. (35 7)
- D. (11 4)

9)



- A. (20 8)
- B. (14 6)
- C. (15 6)
- D. (25 10)

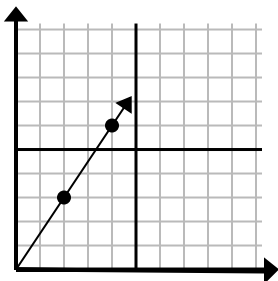
Ответы

1. _____
2. _____
3. _____
4. _____
5. _____
6. _____
7. _____
8. _____
9. _____



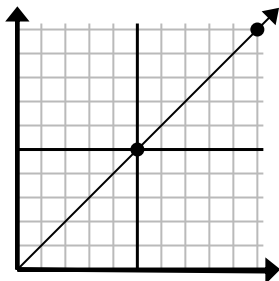
Определите, какой вариант представляет собой точку на линии, если она будет продолжаться.

1)



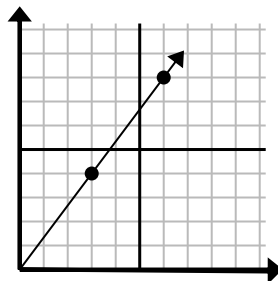
- A. (6 9)
- B. (5 4)
- C. (12 18)
- D. (14 21)

2)



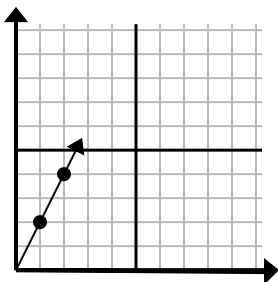
- A. (30 30)
- B. (15 15)
- C. (15 7)
- D. (20 20)

3)



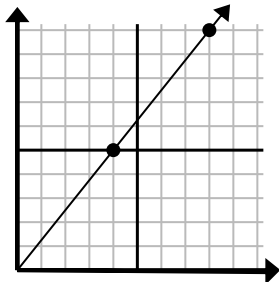
- A. (8 5)
- B. (12 16)
- C. (9 12)
- D. (11 6)

4)



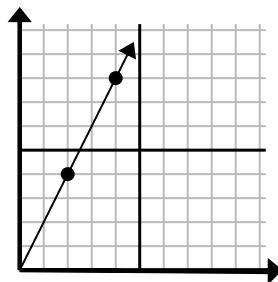
- A. (3 6)
- B. (4 8)
- C. (6 12)
- D. (7 14)

5)



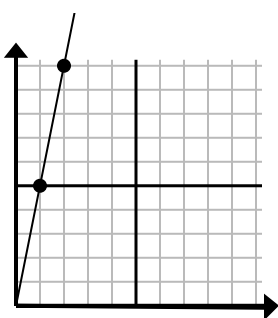
- A. (16 20)
- B. (13 10)
- C. (28 35)
- D. (12 15)

6)



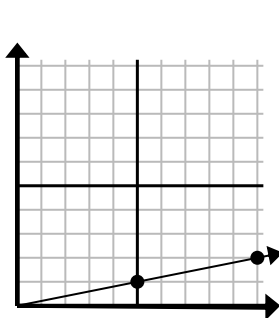
- A. (14 28)
- B. (7 8)
- C. (10 20)
- D. (6 12)

7)



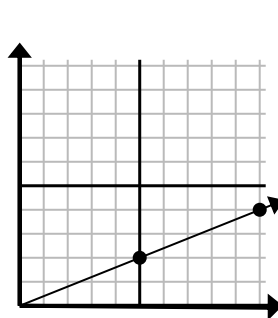
- A. (5 8)
- B. (7 35)
- C. (3 15)
- D. (6 30)

8)



- A. (25 5)
- B. (15 3)
- C. (35 7)
- D. (11 4)

9)



- A. (20 8)
- B. (14 6)
- C. (15 6)
- D. (25 10)

ОТВЕТЫ1. **A** 2. **B** 3. **C** 4. **A** 5. **D** 6. **D** 7. **C** 8. **B** 9. **C**