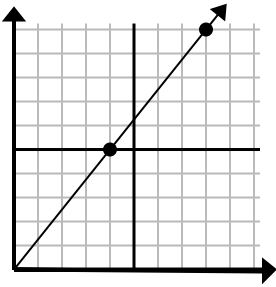




Определите, какой вариант представляет собой точку на линии, если она будет продолжаться.

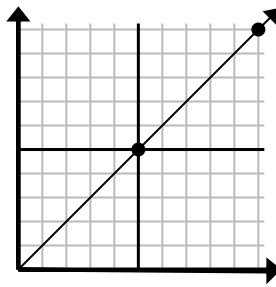
Ответы

1)



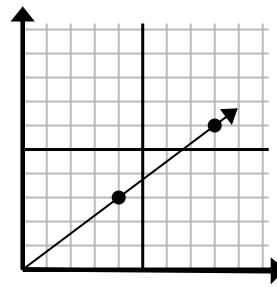
- A. (20 25)  
 B. (12 15)  
 C. (24 30)  
 D. (11 10)

2)



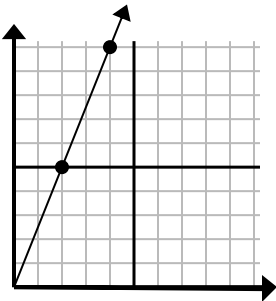
- A. (15 15)  
 B. (12 10)  
 C. (14 6)  
 D. (25 25)

3)



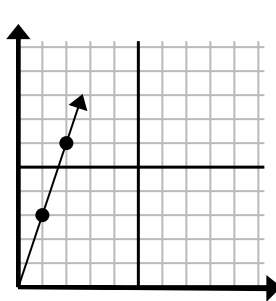
- A. (28 21)  
 B. (12 9)  
 C. (24 18)  
 D. (16 12)

4)



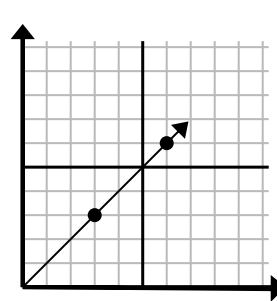
- A. (6 15)  
 B. (5 9)  
 C. (8 20)  
 D. (12 30)

5)



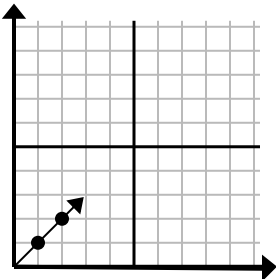
- A. (4 12)  
 B. (3 9)  
 C. (4 6)  
 D. (7 6)

6)



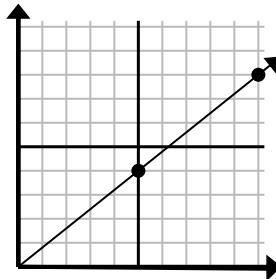
- A. (12 12)  
 B. (9 9)  
 C. (18 18)  
 D. (9 5)

7)



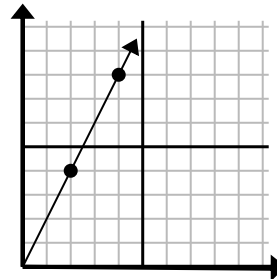
- A. (5 6)  
 B. (3 3)  
 C. (5 5)  
 D. (7 3)

8)



- A. (15 12)  
 B. (35 28)  
 C. (14 8)  
 D. (14 5)

9)

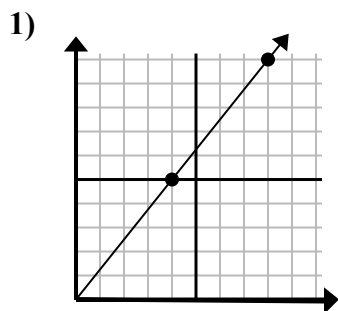


- A. (6 12)  
 B. (7 9)  
 C. (10 20)  
 D. (8 16)

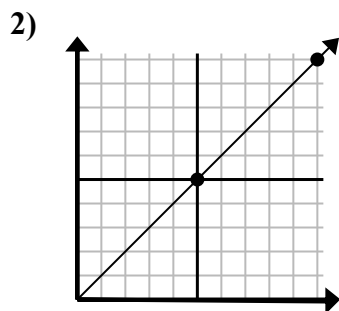
1. \_\_\_\_\_  
 2. \_\_\_\_\_  
 3. \_\_\_\_\_  
 4. \_\_\_\_\_  
 5. \_\_\_\_\_  
 6. \_\_\_\_\_  
 7. \_\_\_\_\_  
 8. \_\_\_\_\_  
 9. \_\_\_\_\_



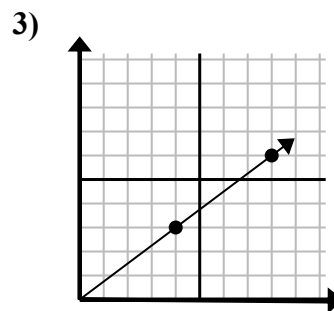
Определите, какой вариант представляет собой точку на линии, если она будет продолжаться.



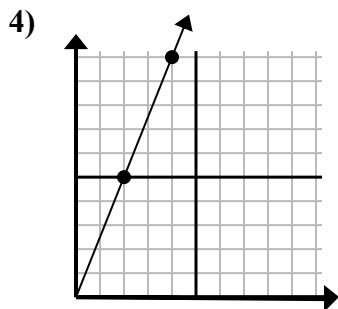
- A. (20 25)  
B. (12 15)  
C. (24 30)  
D. (11 10)



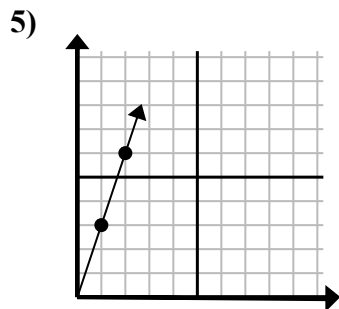
- A. (15 15)  
B. (12 10)  
C. (14 6)  
D. (25 25)



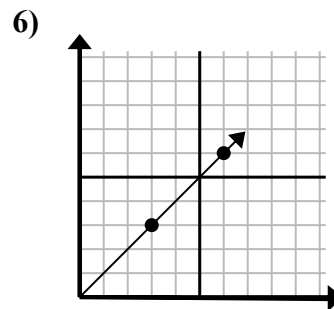
- A. (28 21)  
B. (12 9)  
C. (24 18)  
D. (16 12)



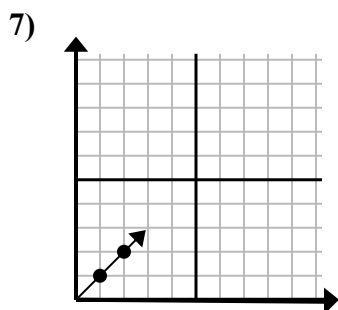
- A. (6 15)  
B. (5 9)  
C. (8 20)  
D. (12 30)



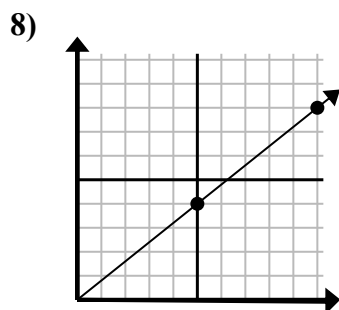
- A. (4 12)  
B. (3 9)  
C. (4 6)  
D. (7 6)



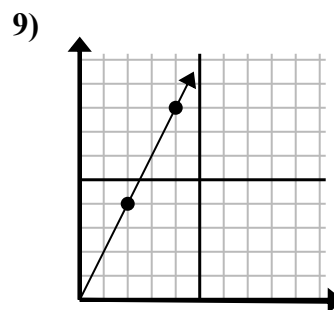
- A. (12 12)  
B. (9 9)  
C. (18 18)  
D. (9 5)



- A. (5 6)  
B. (3 3)  
C. (5 5)  
D. (7 3)



- A. (15 12)  
B. (35 28)  
C. (14 8)  
D. (14 5)



- A. (6 12)  
B. (7 9)  
C. (10 20)  
D. (8 16)

**ОТВЕТЫ**1. **B**2. **A**3. **B**4. **A**5. **B**6. **B**7. **B**8. **A**9. **A**