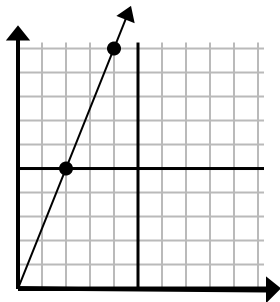




Определите, какой вариант представляет собой точку на линии, если она будет продолжаться.

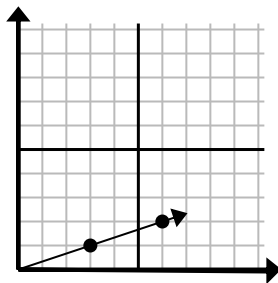
Ответы

1)



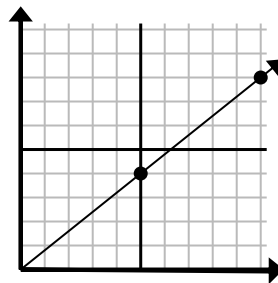
- A. (12 30)
- B. (8 20)
- C. (8 10)
- D. (6 15)

2)



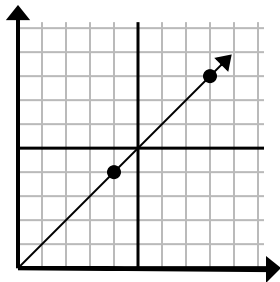
- A. (9 3)
- B. (10 6)
- C. (15 5)
- D. (18 6)

3)



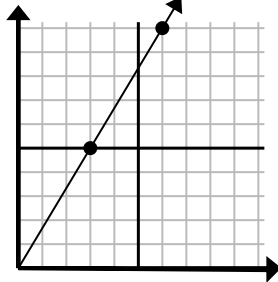
- A. (11 9)
- B. (15 12)
- C. (20 16)
- D. (25 20)

4)



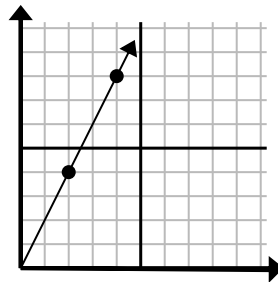
- A. (16 16)
- B. (12 12)
- C. (13 5)
- D. (28 28)

5)



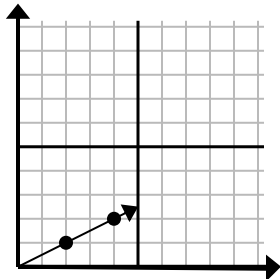
- A. (8 10)
- B. (15 25)
- C. (7 6)
- D. (9 15)

6)



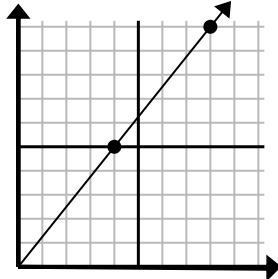
- A. (6 5)
- B. (6 12)
- C. (12 24)
- D. (8 16)

7)



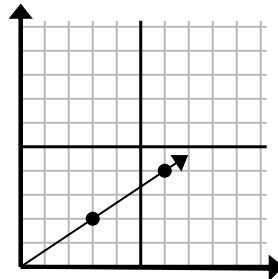
- A. (9 2)
- B. (6 3)
- C. (14 7)
- D. (7 4)

8)



- A. (9 10)
- B. (12 15)
- C. (20 25)
- D. (24 30)

9)



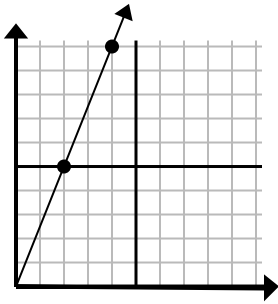
- A. (18 12)
- B. (8 7)
- C. (11 5)
- D. (9 6)

1. _____
2. _____
3. _____
4. _____
5. _____
6. _____
7. _____
8. _____
9. _____



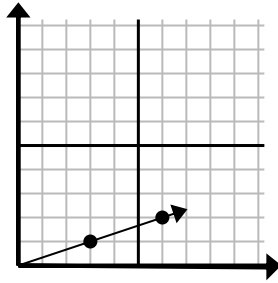
Определите, какой вариант представляет собой точку на линии, если она будет продолжаться.

1)



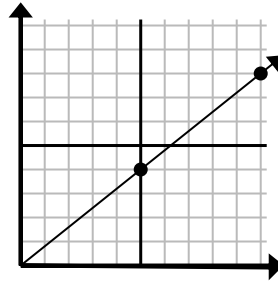
- A. (12 30)
- B. (8 20)
- C. (8 10)
- D. (6 15)

2)



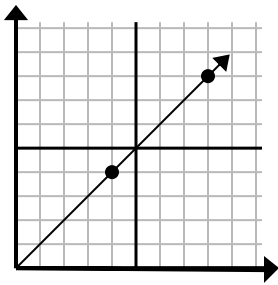
- A. (9 3)
- B. (10 6)
- C. (15 5)
- D. (18 6)

3)



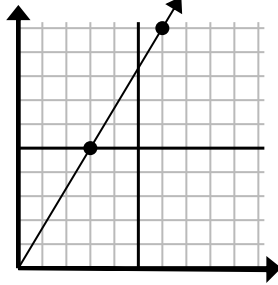
- A. (11 9)
- B. (15 12)
- C. (20 16)
- D. (25 20)

4)



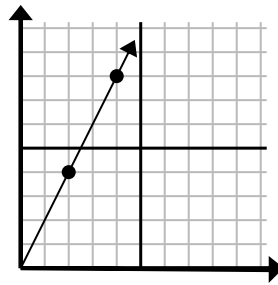
- A. (16 16)
- B. (12 12)
- C. (13 5)
- D. (28 28)

5)



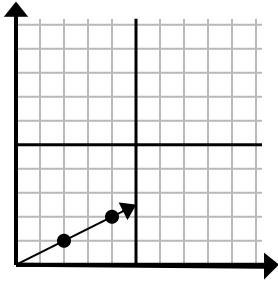
- A. (8 10)
- B. (15 25)
- C. (7 6)
- D. (9 15)

6)



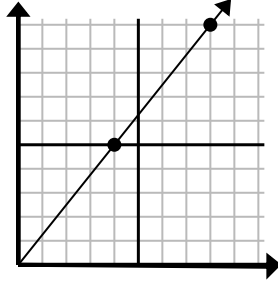
- A. (6 5)
- B. (6 12)
- C. (12 24)
- D. (8 16)

7)



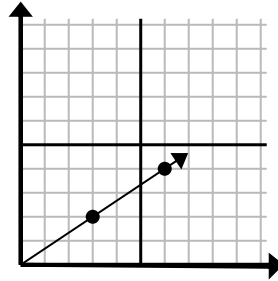
- A. (9 2)
- B. (6 3)
- C. (14 7)
- D. (7 4)

8)



- A. (9 10)
- B. (12 15)
- C. (20 25)
- D. (24 30)

9)



- A. (18 12)
- B. (8 7)
- C. (11 5)
- D. (9 6)

Ответы

1. **D**
2. **A**
3. **B**
4. **B**
5. **D**
6. **B**
7. **B**
8. **B**
9. **D**