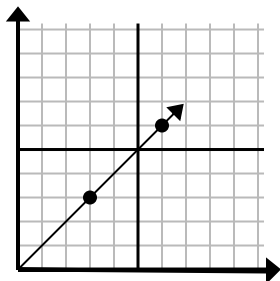




Определите, какой вариант представляет собой точку на линии, если она будет продолжаться.

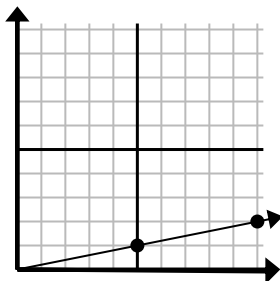
Ответы

1)



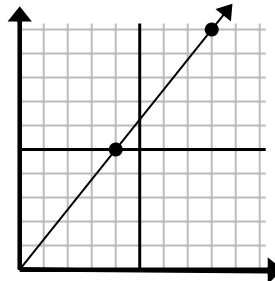
- A. (18 18)
 B. (9 9)
 C. (9 5)
 D. (10 4)

2)



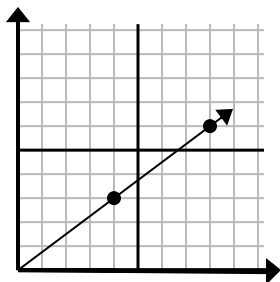
- A. (11 2)
 B. (15 3)
 C. (20 4)
 D. (12 6)

3)



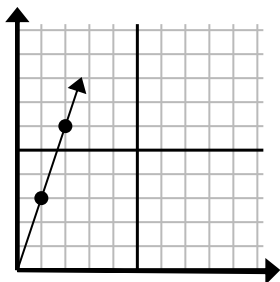
- A. (28 35)
 B. (20 25)
 C. (12 15)
 D. (13 9)

4)



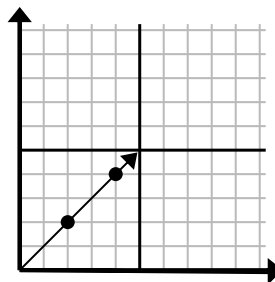
- A. (12 9)
 B. (9 4)
 C. (20 15)
 D. (24 18)

5)



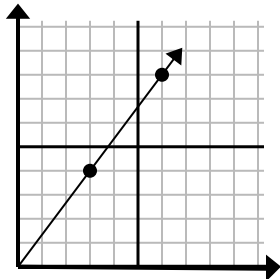
- A. (4 5)
 B. (3 9)
 C. (7 7)
 D. (4 8)

6)



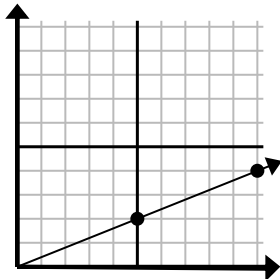
- A. (8 3)
 B. (6 6)
 C. (12 12)
 D. (14 14)

7)



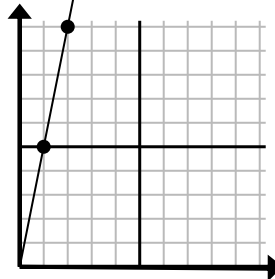
- A. (9 12)
 B. (12 16)
 C. (18 24)
 D. (10 9)

8)



- A. (13 4)
 B. (14 5)
 C. (20 8)
 D. (15 6)

9)



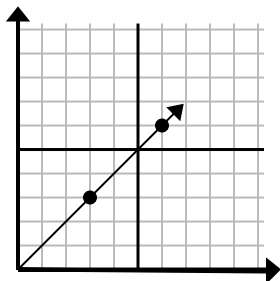
- A. (4 20)
 B. (6 30)
 C. (5 8)
 D. (3 15)

1. _____
 2. _____
 3. _____
 4. _____
 5. _____
 6. _____
 7. _____
 8. _____
 9. _____



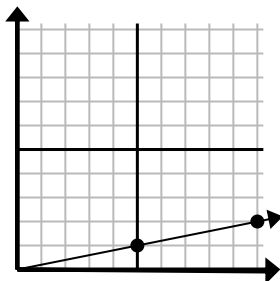
Определите, какой вариант представляет собой точку на линии, если она будет продолжаться.

1)



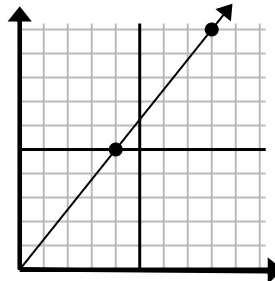
- A. (18 18)
- B. (9 9)
- C. (9 5)
- D. (10 4)

2)



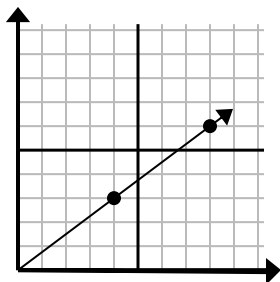
- A. (11 2)
- B. (15 3)
- C. (20 4)
- D. (12 6)

3)



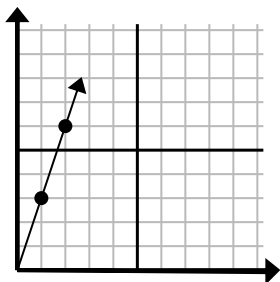
- A. (28 35)
- B. (20 25)
- C. (12 15)
- D. (13 9)

4)



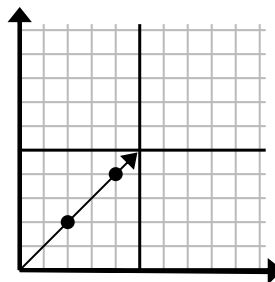
- A. (12 9)
- B. (9 4)
- C. (20 15)
- D. (24 18)

5)



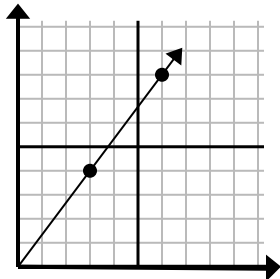
- A. (4 5)
- B. (3 9)
- C. (7 7)
- D. (4 8)

6)



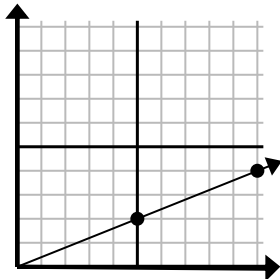
- A. (8 3)
- B. (6 6)
- C. (12 12)
- D. (14 14)

7)



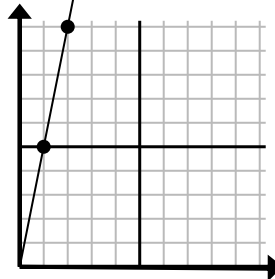
- A. (9 12)
- B. (12 16)
- C. (18 24)
- D. (10 9)

8)



- A. (13 4)
- B. (14 5)
- C. (20 8)
- D. (15 6)

9)



- A. (4 20)
- B. (6 30)
- C. (5 8)
- D. (3 15)

ОТВЕТЫ1. В2. В3. С4. А5. В6. В7. А8. Д9. Д