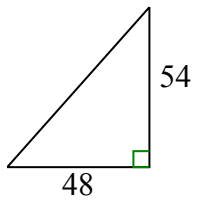




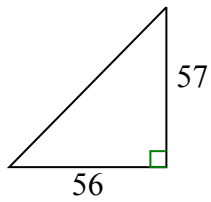
Определите, какой вариант имеет тот же наклон, что и показанный.

**ОТВЕТЫ**

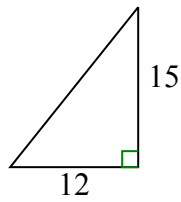
1)



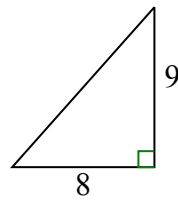
A.



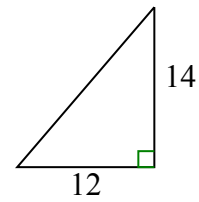
B.



C.



D.



1. \_\_\_\_\_

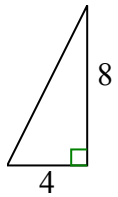
2. \_\_\_\_\_

3. \_\_\_\_\_

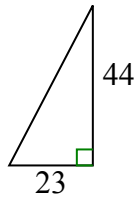
4. \_\_\_\_\_

5. \_\_\_\_\_

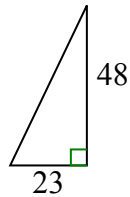
2)



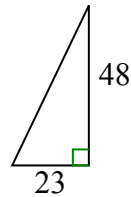
A.



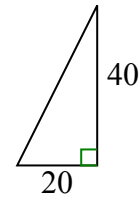
B.



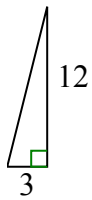
C.



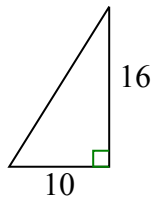
D.



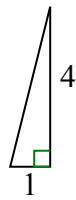
3)



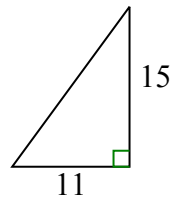
A.



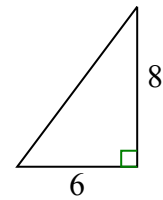
B.



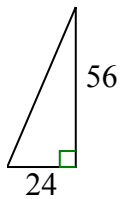
C.



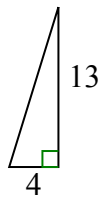
D.



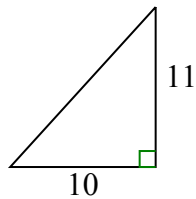
4)



A.



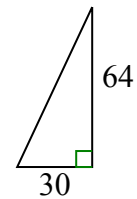
B.



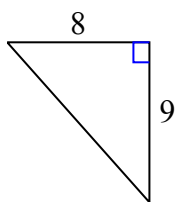
C.



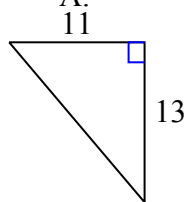
D.



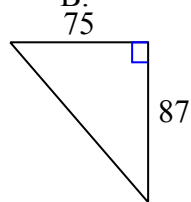
5)



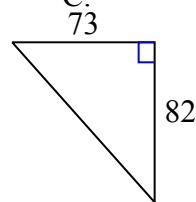
A.



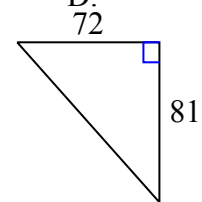
B.



C.



D.

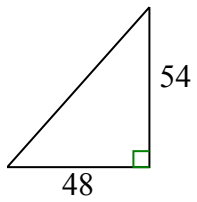




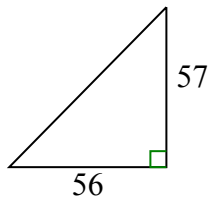
Определите, какой вариант имеет тот же наклон, что и показанный.

**ОТВЕТЫ**

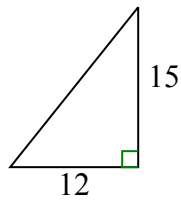
1)



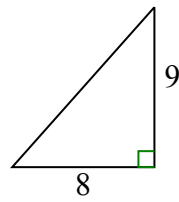
A.



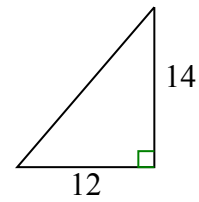
B.



C.

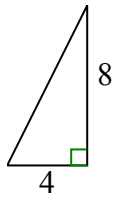


D.

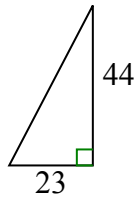


1. C

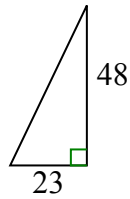
2)



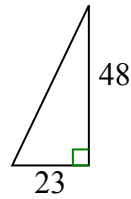
A.



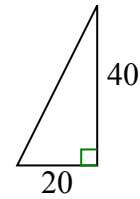
B.



C.



D.



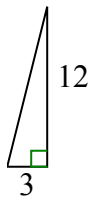
2. D

3. B

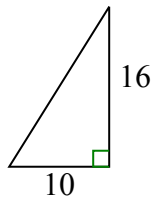
4. C

5. D

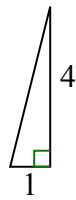
3)



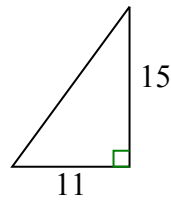
A.



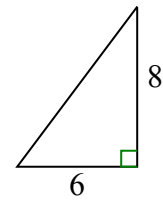
B.



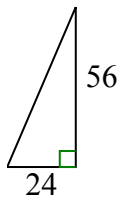
C.



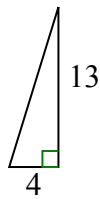
D.



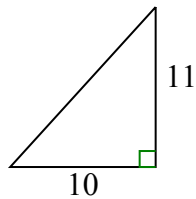
4)



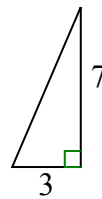
A.



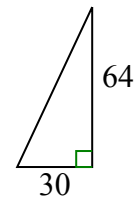
B.



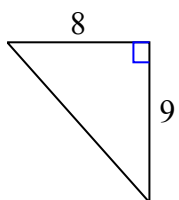
C.



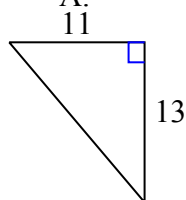
D.



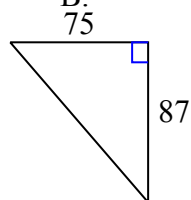
5)



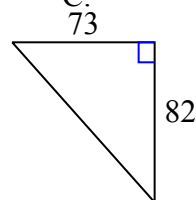
A.



B.



C.



D.

