



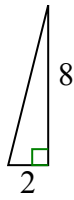
Определите, какой вариант имеет тот же наклон, что и показанный.

ОТВЕТЫ

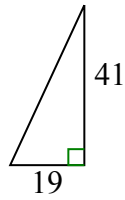
1)



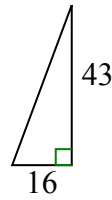
A.



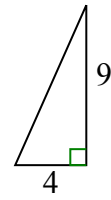
B.



C.



D.



1. _____

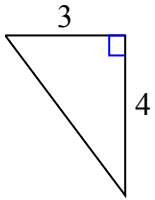
2. _____

3. _____

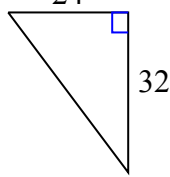
4. _____

5. _____

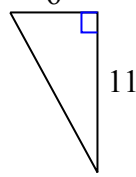
2)



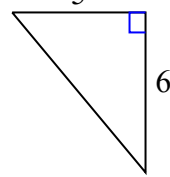
A.



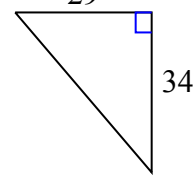
B.



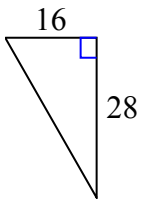
C.



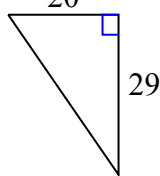
D.



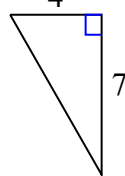
3)



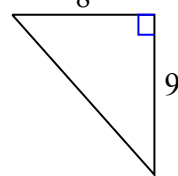
A.



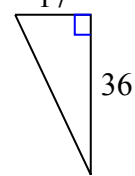
B.



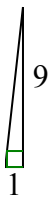
C.



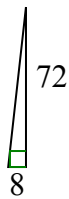
D.



4)



A.



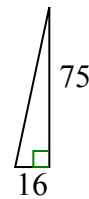
B.



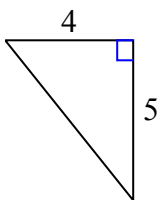
C.



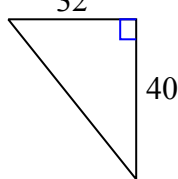
D.



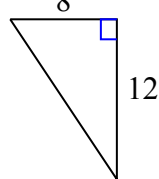
5)



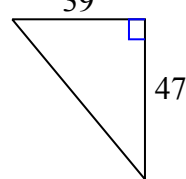
A.



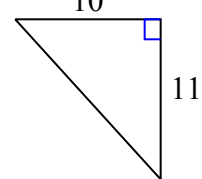
B.



C.



D.

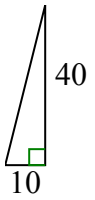




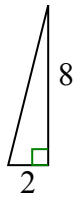
Определите, какой вариант имеет тот же наклон, что и показанный.

ОТВЕТЫ

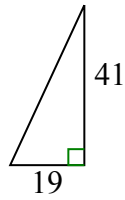
1)



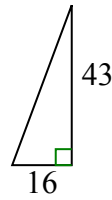
A.



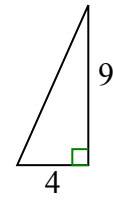
B.



C.

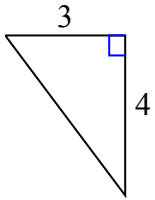


D.

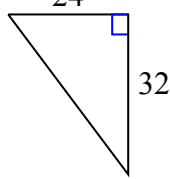


1. **A**

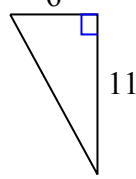
2)



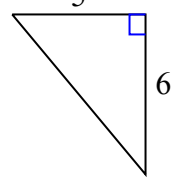
A.



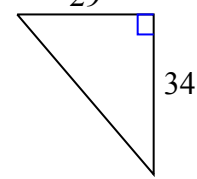
B.



C.



D.



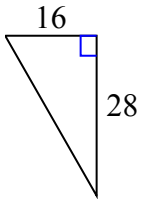
2. **A**

3. **B**

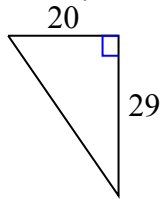
4. **A**

5. **A**

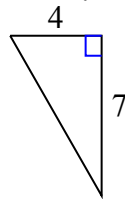
3)



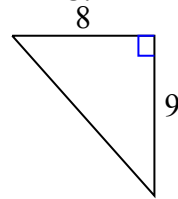
A.



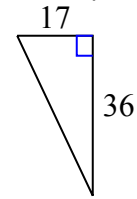
B.



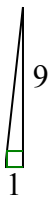
C.



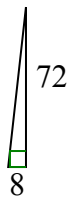
D.



4)



A.



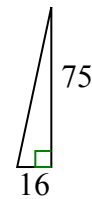
B.



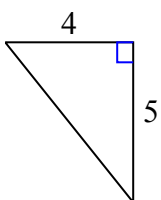
C.



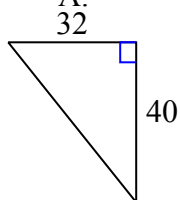
D.



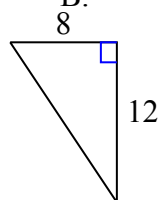
5)



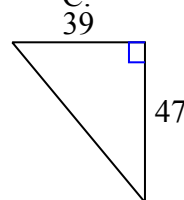
A.



B.



C.



D.

