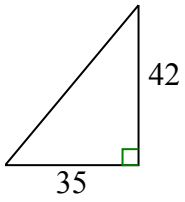




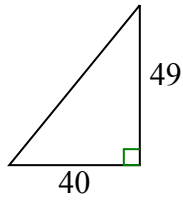
Определите, какой вариант имеет тот же наклон, что и показанный.

ОТВЕТЫ

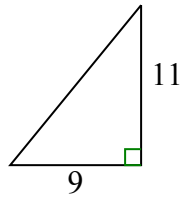
1)



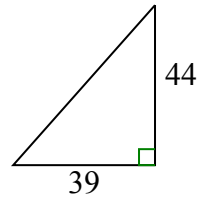
A.



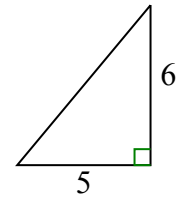
B.



C.



D.



1. _____

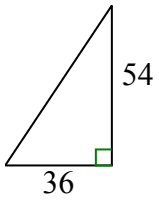
2. _____

3. _____

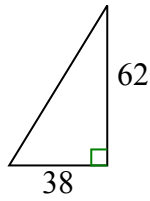
4. _____

5. _____

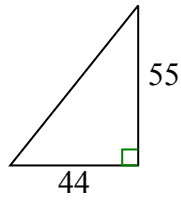
2)



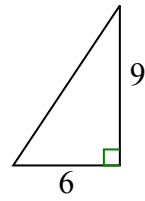
A.



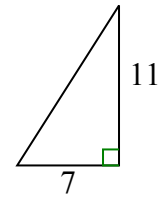
B.



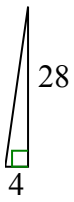
C.



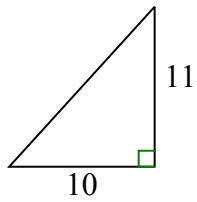
D.



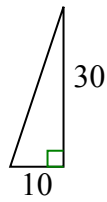
3)



A.



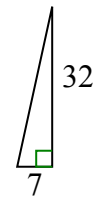
B.



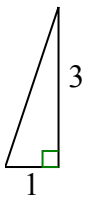
C.



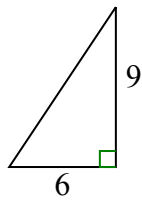
D.



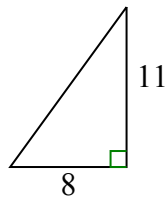
4)



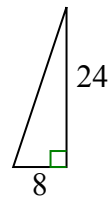
A.



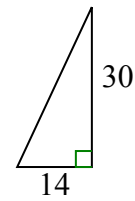
B.



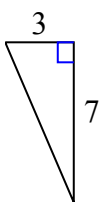
C.



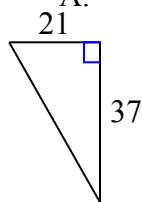
D.



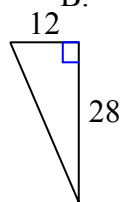
5)



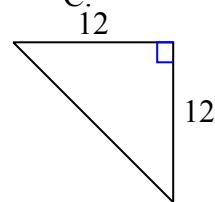
A.



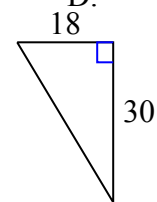
B.



C.



D.

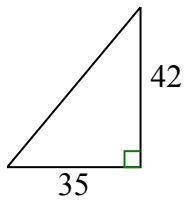




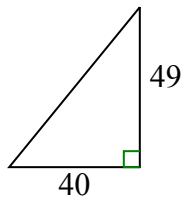
Определите, какой вариант имеет тот же наклон, что и показанный.

ОТВЕТЫ

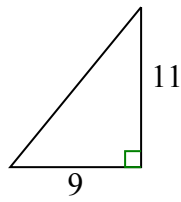
1)



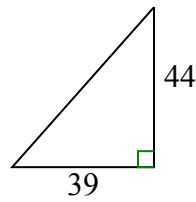
A.



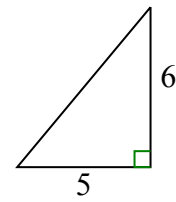
B.



C.

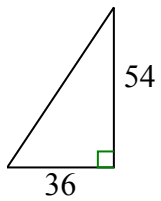


D.

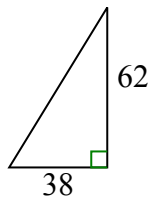


1. D

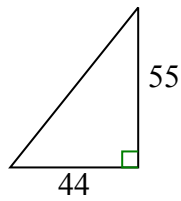
2)



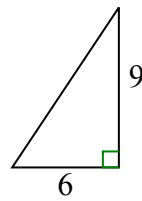
A.



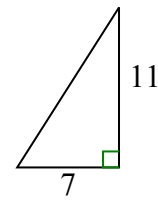
B.



C.



D.

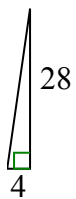


2. C

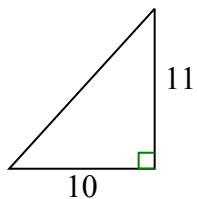
3. C

4. C

3)



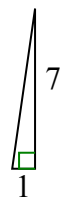
A.



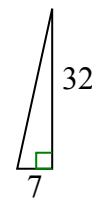
B.



C.

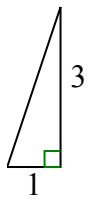


D.

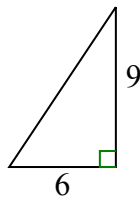


5. B

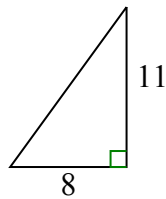
4)



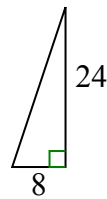
A.



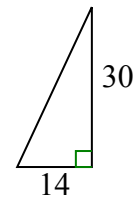
B.



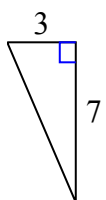
C.



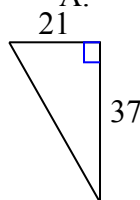
D.



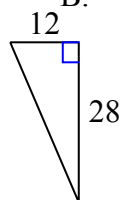
5)



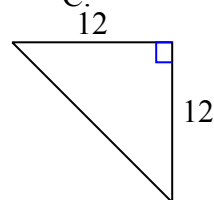
A.



B.



C.



D.

