





Создайте и обозначьте линейный график, используя предоставленный набор чисел.


1)  $4$        $3\frac{1}{4}$        $5\frac{1}{4}$        $4\frac{3}{4}$        $3$        $5\frac{3}{4}$        $5\frac{1}{4}$        $4\frac{2}{4}$   
 $4\frac{3}{4}$        $3\frac{1}{4}$        $5\frac{1}{4}$        $4$        $4\frac{1}{4}$        $3\frac{3}{4}$        $3\frac{3}{4}$        $3\frac{3}{4}$




2)  $3\frac{1}{4}$        $3\frac{2}{4}$        $3\frac{3}{4}$        $3\frac{1}{4}$        $5\frac{3}{4}$        $4\frac{2}{4}$        $4\frac{3}{4}$        $3$   
 $4$        $4$        $5\frac{2}{4}$        $4\frac{2}{4}$        $3\frac{3}{4}$        $4\frac{1}{4}$        $3\frac{3}{4}$        $5\frac{1}{4}$




3)  $9\frac{1}{2}$        $8$        $7\frac{1}{2}$        $9\frac{1}{2}$        $8$        $8$        $9\frac{1}{2}$        $7$   
 $9$        $7$        $7\frac{1}{2}$        $7$        $7\frac{1}{2}$        $9$        $9$        $8\frac{1}{2}$



4)  $7$        $9\frac{6}{8}$        $7\frac{4}{8}$        $7\frac{7}{8}$        $7\frac{1}{8}$        $8\frac{4}{8}$        $9\frac{1}{8}$        $8\frac{6}{8}$   
 $7\frac{7}{8}$        $9\frac{1}{8}$        $9\frac{5}{8}$        $7\frac{6}{8}$        $7$        $8\frac{6}{8}$        $7\frac{4}{8}$        $7\frac{1}{8}$



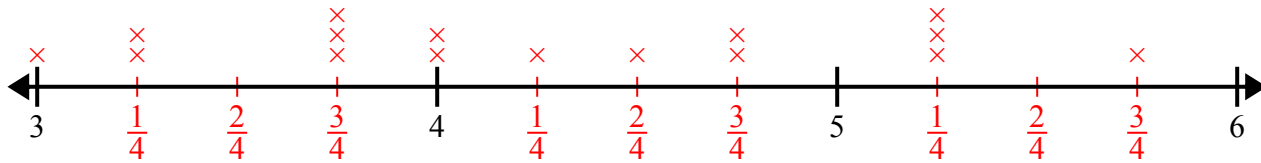
5)  $10\frac{7}{8}$        $9\frac{6}{8}$        $10\frac{6}{8}$        $8\frac{1}{8}$        $8\frac{5}{8}$        $8\frac{4}{8}$        $8\frac{3}{8}$        $8\frac{3}{8}$   
 $9\frac{2}{8}$        $10\frac{3}{8}$        $10\frac{5}{8}$        $10\frac{6}{8}$        $9\frac{2}{8}$        $9\frac{4}{8}$        $10\frac{3}{8}$        $10\frac{2}{8}$



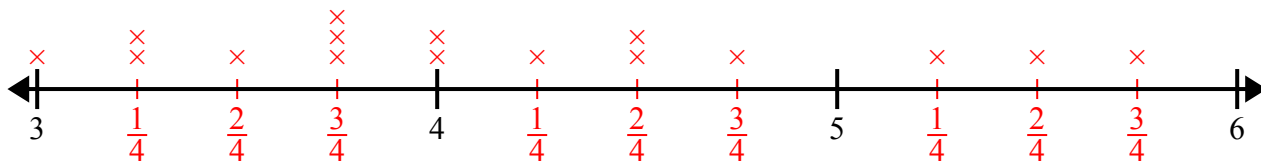


Создайте и обозначьте линейный график, используя предоставленный набор чисел.

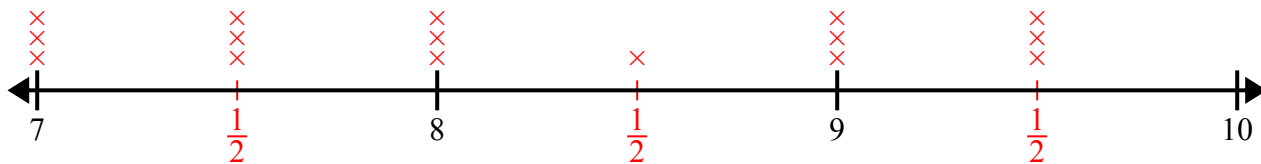
- 1) 4       $3\frac{1}{4}$        $5\frac{1}{4}$        $4\frac{3}{4}$       3       $5\frac{3}{4}$        $5\frac{1}{4}$        $4\frac{2}{4}$   
 $4\frac{3}{4}$        $3\frac{1}{4}$        $5\frac{1}{4}$       4       $4\frac{1}{4}$        $3\frac{3}{4}$        $3\frac{3}{4}$        $3\frac{3}{4}$



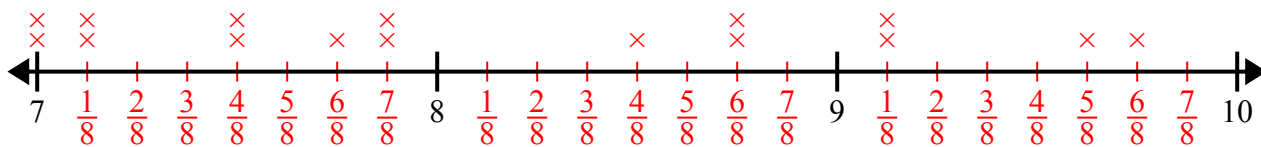
- 2)  $3\frac{1}{4}$        $3\frac{2}{4}$        $3\frac{3}{4}$        $3\frac{1}{4}$        $5\frac{3}{4}$        $4\frac{2}{4}$        $4\frac{3}{4}$       3  
 4      4       $5\frac{2}{4}$        $4\frac{2}{4}$        $3\frac{3}{4}$        $4\frac{1}{4}$        $3\frac{3}{4}$        $5\frac{1}{4}$



- 3)  $9\frac{1}{2}$       8       $7\frac{1}{2}$        $9\frac{1}{2}$       8      8       $9\frac{1}{2}$       7  
 9      7       $7\frac{1}{2}$       7       $7\frac{1}{2}$       9      9       $8\frac{1}{2}$



- 4) 7       $9\frac{6}{8}$        $7\frac{4}{8}$        $7\frac{7}{8}$        $7\frac{1}{8}$        $8\frac{4}{8}$        $9\frac{1}{8}$        $8\frac{6}{8}$   
 $7\frac{7}{8}$        $9\frac{1}{8}$        $9\frac{5}{8}$        $7\frac{6}{8}$       7       $8\frac{6}{8}$        $7\frac{4}{8}$        $7\frac{1}{8}$



- 5)  $10\frac{7}{8}$        $9\frac{6}{8}$        $10\frac{6}{8}$        $8\frac{1}{8}$        $8\frac{5}{8}$        $8\frac{4}{8}$        $8\frac{3}{8}$        $8\frac{3}{8}$   
 $9\frac{2}{8}$        $10\frac{3}{8}$        $10\frac{5}{8}$        $10\frac{6}{8}$        $9\frac{2}{8}$        $9\frac{4}{8}$        $10\frac{3}{8}$        $10\frac{2}{8}$

