


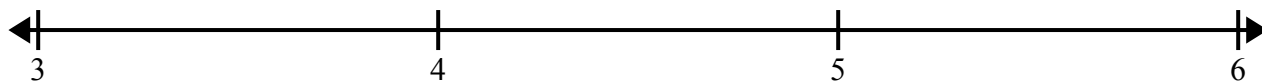


Создайте и обозначьте линейный график, используя предоставленный набор чисел.


1) $7\frac{6}{8}$ $7\frac{5}{8}$ $9\frac{3}{8}$ $9\frac{7}{8}$ $8\frac{3}{8}$ 8 $7\frac{3}{8}$ $9\frac{2}{8}$
 $7\frac{3}{8}$ $8\frac{4}{8}$ $9\frac{1}{8}$ $8\frac{3}{8}$ $8\frac{2}{8}$ $7\frac{6}{8}$ $9\frac{1}{8}$ $9\frac{2}{8}$



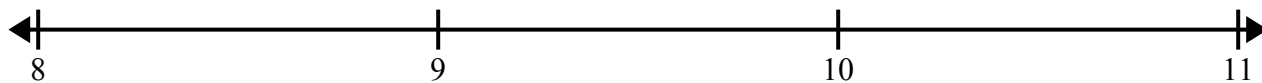
2) $3\frac{1}{8}$ $5\frac{1}{8}$ $3\frac{7}{8}$ 3 4 $3\frac{5}{8}$ $5\frac{6}{8}$ $3\frac{6}{8}$
 $4\frac{5}{8}$ $5\frac{5}{8}$ $3\frac{5}{8}$ $4\frac{6}{8}$ $4\frac{2}{8}$ $3\frac{3}{8}$ 4 $3\frac{4}{8}$




3) 6 $8\frac{1}{4}$ $6\frac{2}{4}$ $6\frac{1}{4}$ $7\frac{2}{4}$ $8\frac{2}{4}$ $8\frac{2}{4}$ $8\frac{1}{4}$
 $6\frac{2}{4}$ $6\frac{2}{4}$ 8 8 6 8 $8\frac{1}{4}$ $8\frac{3}{4}$



4) $9\frac{2}{4}$ 8 $9\frac{1}{4}$ $8\frac{2}{4}$ $9\frac{2}{4}$ $8\frac{2}{4}$ $10\frac{2}{4}$ $9\frac{3}{4}$
 $8\frac{1}{4}$ $9\frac{3}{4}$ $8\frac{2}{4}$ $9\frac{2}{4}$ $9\frac{1}{4}$ $9\frac{3}{4}$ $8\frac{3}{4}$ $8\frac{3}{4}$



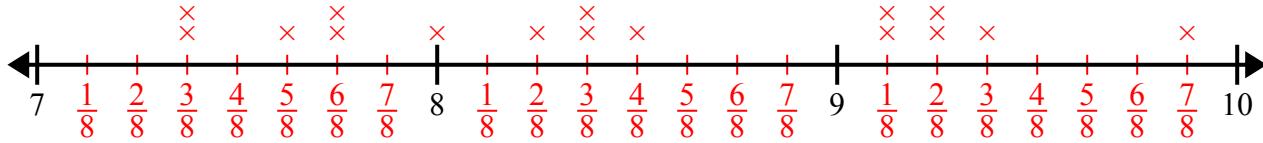
5) $8\frac{1}{2}$ 10 $10\frac{1}{2}$ 10 $10\frac{1}{2}$ 10 $9\frac{1}{2}$ 9
 $10\frac{1}{2}$ $8\frac{1}{2}$ 8 9 9 $9\frac{1}{2}$ $9\frac{1}{2}$ 8



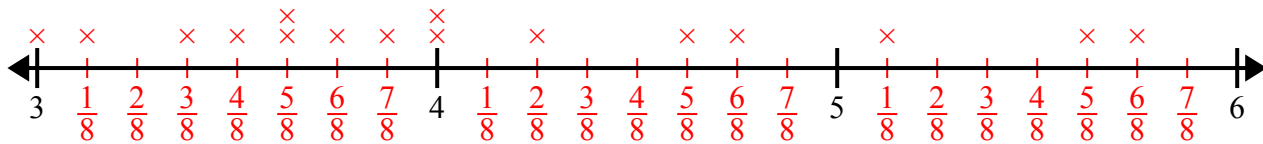


Создайте и обозначьте линейный график, используя предоставленный набор чисел.

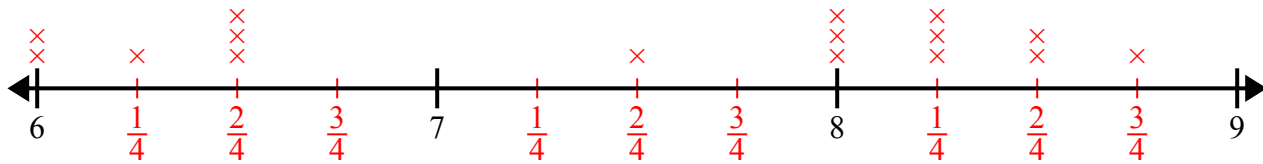
- 1) $7\frac{6}{8}$ $7\frac{5}{8}$ $9\frac{3}{8}$ $9\frac{7}{8}$ $8\frac{3}{8}$ 8 $7\frac{3}{8}$ $9\frac{2}{8}$
 $7\frac{3}{8}$ $8\frac{4}{8}$ $9\frac{1}{8}$ $8\frac{3}{8}$ $8\frac{2}{8}$ $7\frac{6}{8}$ $9\frac{1}{8}$ $9\frac{2}{8}$



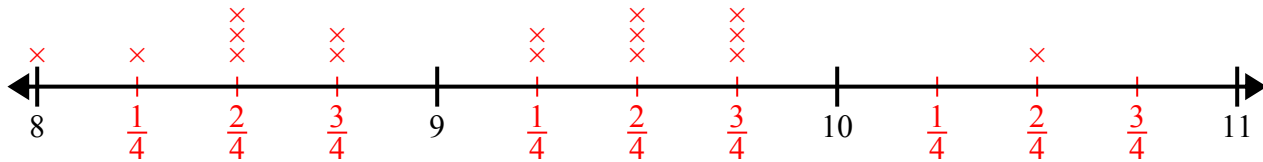
- 2) $3\frac{1}{8}$ $5\frac{1}{8}$ $3\frac{7}{8}$ 3 4 $3\frac{5}{8}$ $5\frac{6}{8}$ $3\frac{6}{8}$
 $4\frac{5}{8}$ $5\frac{5}{8}$ $3\frac{5}{8}$ $4\frac{6}{8}$ $4\frac{2}{8}$ $3\frac{3}{8}$ 4 $3\frac{4}{8}$



- 3) 6 $8\frac{1}{4}$ $6\frac{2}{4}$ $6\frac{1}{4}$ $7\frac{2}{4}$ $8\frac{2}{4}$ $8\frac{2}{4}$ $8\frac{1}{4}$
 $6\frac{2}{4}$ $6\frac{2}{4}$ 8 8 6 8 $8\frac{1}{4}$ $8\frac{3}{4}$



- 4) $9\frac{2}{4}$ 8 $9\frac{1}{4}$ $8\frac{2}{4}$ $9\frac{2}{4}$ $8\frac{2}{4}$ $10\frac{2}{4}$ $9\frac{3}{4}$
 $8\frac{1}{4}$ $9\frac{3}{4}$ $8\frac{2}{4}$ $9\frac{2}{4}$ $9\frac{1}{4}$ $9\frac{3}{4}$ $8\frac{3}{4}$ $8\frac{3}{4}$



- 5) $8\frac{1}{2}$ 10 $10\frac{1}{2}$ 10 $10\frac{1}{2}$ 10 $9\frac{1}{2}$ 9
 $10\frac{1}{2}$ $8\frac{1}{2}$ 8 9 9 $9\frac{1}{2}$ $9\frac{1}{2}$ 8

