


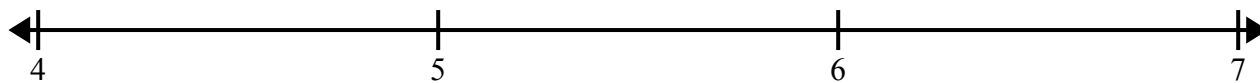


Создайте и обозначьте линейный график, используя предоставленный набор чисел.


- 1) 7 7 5 $5\frac{1}{2}$ $5\frac{1}{2}$ 5 7 $7\frac{1}{2}$
6 $7\frac{1}{2}$ 5 $6\frac{1}{2}$ $7\frac{1}{2}$ $5\frac{1}{2}$ 6 6



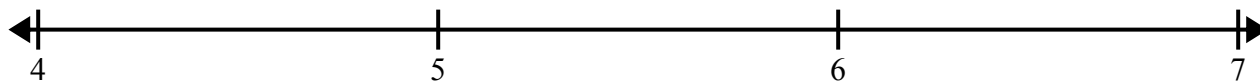
- 2) 6 $4\frac{3}{8}$ $6\frac{5}{8}$ $6\frac{6}{8}$ 6 $4\frac{4}{8}$ $4\frac{7}{8}$ $6\frac{5}{8}$
 $6\frac{6}{8}$ $4\frac{6}{8}$ $4\frac{4}{8}$ $4\frac{4}{8}$ $5\frac{1}{8}$ $5\frac{6}{8}$ $4\frac{3}{8}$ $6\frac{7}{8}$




- 3) $4\frac{2}{4}$ 3 $4\frac{1}{4}$ $2\frac{1}{4}$ $2\frac{2}{4}$ $3\frac{1}{4}$ $4\frac{2}{4}$ 3
 $4\frac{2}{4}$ 3 $2\frac{3}{4}$ 2 $2\frac{1}{4}$ $3\frac{1}{4}$ $2\frac{3}{4}$ $3\frac{3}{4}$



- 4) 6 $6\frac{1}{2}$ 5 $6\frac{1}{2}$ $5\frac{1}{2}$ $6\frac{1}{2}$ 4 $4\frac{1}{2}$
 $5\frac{1}{2}$ 4 5 6 $4\frac{1}{2}$ 5 4 $5\frac{1}{2}$



- 5) 11 9 $10\frac{2}{4}$ 11 $9\frac{3}{4}$ 9 9 $11\frac{3}{4}$
 $9\frac{2}{4}$ 10 $11\frac{2}{4}$ $11\frac{2}{4}$ $9\frac{2}{4}$ $9\frac{1}{4}$ $9\frac{2}{4}$ $11\frac{3}{4}$

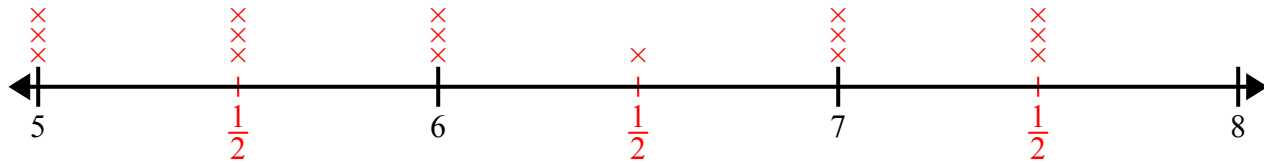




Создайте и обозначьте линейный график, используя предоставленный набор чисел.

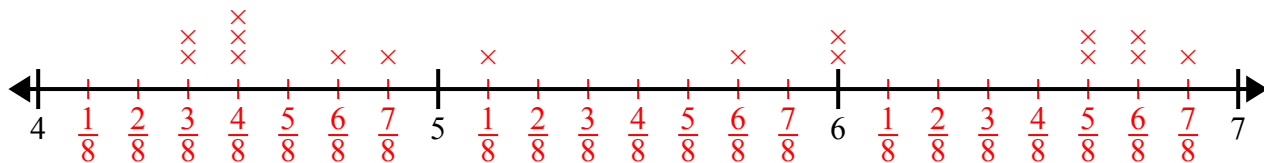
1) 7 7 5 $5\frac{1}{2}$ $5\frac{1}{2}$ 5 7 $7\frac{1}{2}$

6 $7\frac{1}{2}$ 5 $6\frac{1}{2}$ $7\frac{1}{2}$ $5\frac{1}{2}$ 6 6



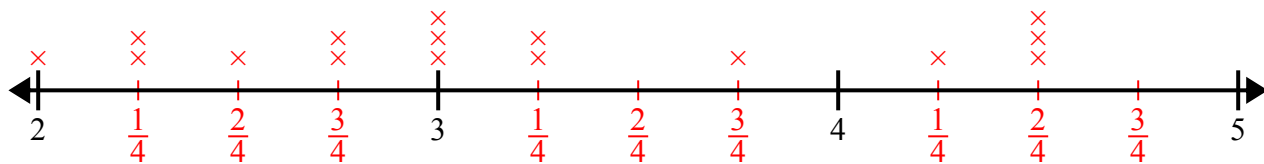
2) 6 $4\frac{3}{8}$ $6\frac{5}{8}$ $6\frac{6}{8}$ 6 $4\frac{4}{8}$ $4\frac{7}{8}$ $6\frac{5}{8}$

$6\frac{6}{8}$ $4\frac{6}{8}$ $4\frac{4}{8}$ $4\frac{4}{8}$ $5\frac{1}{8}$ $5\frac{6}{8}$ $4\frac{3}{8}$ $6\frac{7}{8}$



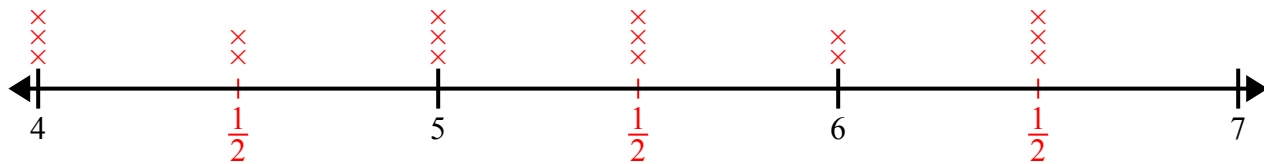
3) $4\frac{2}{4}$ 3 $4\frac{1}{4}$ $2\frac{1}{4}$ $2\frac{2}{4}$ $3\frac{1}{4}$ $4\frac{2}{4}$ 3

$4\frac{2}{4}$ 3 $2\frac{3}{4}$ 2 $2\frac{1}{4}$ $3\frac{1}{4}$ $2\frac{3}{4}$ $3\frac{3}{4}$



4) 6 $6\frac{1}{2}$ 5 $6\frac{1}{2}$ $5\frac{1}{2}$ $6\frac{1}{2}$ 4 $4\frac{1}{2}$

$5\frac{1}{2}$ 4 5 6 $4\frac{1}{2}$ 5 4 $5\frac{1}{2}$



5) 11 9 $10\frac{2}{4}$ 11 $9\frac{3}{4}$ 9 9 $11\frac{3}{4}$

$9\frac{2}{4}$ 10 $11\frac{2}{4}$ $11\frac{2}{4}$ $9\frac{2}{4}$ $9\frac{1}{4}$ $9\frac{2}{4}$ $11\frac{3}{4}$

