


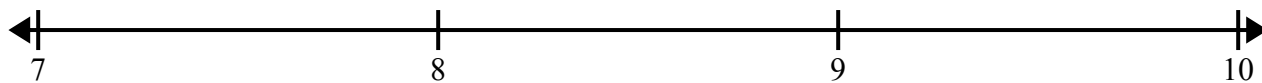


Создайте и обозначьте линейный график, используя предоставленный набор чисел.


- 1)  $6$        $6\frac{2}{4}$        $5\frac{2}{4}$        $7\frac{2}{4}$        $5$        $7\frac{3}{4}$        $6\frac{3}{4}$        $6\frac{2}{4}$   
 $7\frac{1}{4}$        $6\frac{1}{4}$        $7$        $5\frac{1}{4}$        $5$        $5\frac{3}{4}$        $6\frac{2}{4}$        $6\frac{3}{4}$




- 2)  $9\frac{2}{8}$        $8$        $9\frac{5}{8}$        $9\frac{7}{8}$        $9$        $8\frac{6}{8}$        $9$        $7\frac{3}{8}$   
 $8\frac{1}{8}$        $9\frac{2}{8}$        $9\frac{3}{8}$        $8\frac{7}{8}$        $9\frac{4}{8}$        $9\frac{4}{8}$        $7\frac{4}{8}$        $9\frac{7}{8}$




- 3)  $8$        $10\frac{2}{4}$        $8\frac{2}{4}$        $8\frac{3}{4}$        $10\frac{3}{4}$        $9\frac{1}{4}$        $10$        $10$   
 $10\frac{3}{4}$        $8\frac{1}{4}$        $10\frac{3}{4}$        $8\frac{1}{4}$        $8\frac{3}{4}$        $9\frac{2}{4}$        $9\frac{1}{4}$        $10$



- 4)  $9\frac{1}{2}$        $9\frac{1}{2}$        $9$        $9\frac{1}{2}$        $7$        $7$        $7$        $8$   
 $7\frac{1}{2}$        $8\frac{1}{2}$        $8\frac{1}{2}$        $8$        $8\frac{1}{2}$        $7\frac{1}{2}$        $7\frac{1}{2}$        $8$



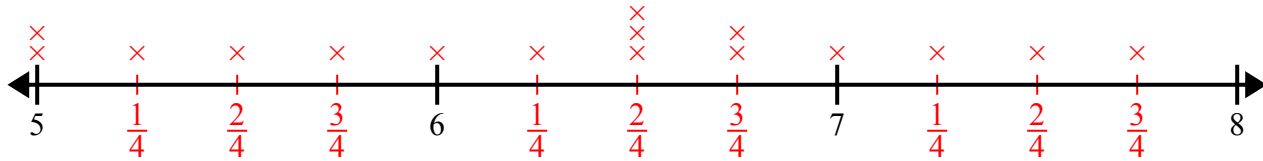
- 5)  $10$        $9\frac{1}{2}$        $11$        $9$        $10$        $11$        $10\frac{1}{2}$        $11$   
 $9$        $10\frac{1}{2}$        $11\frac{1}{2}$        $11\frac{1}{2}$        $10\frac{1}{2}$        $11\frac{1}{2}$        $10$        $9$



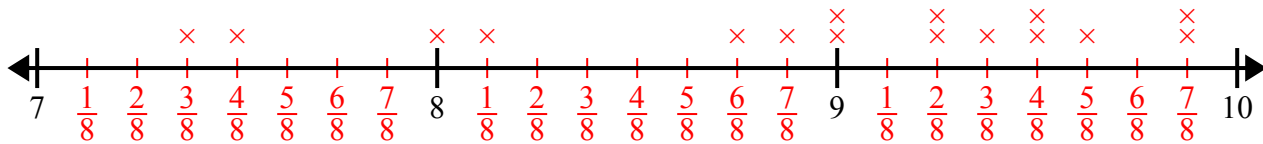


Создайте и обозначьте линейный график, используя предоставленный набор чисел.

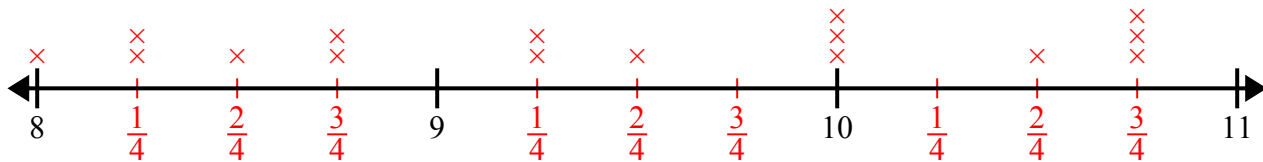
- 1)  $6$        $6\frac{2}{4}$        $5\frac{2}{4}$        $7\frac{2}{4}$        $5$        $7\frac{3}{4}$        $6\frac{3}{4}$        $6\frac{2}{4}$   
 $7\frac{1}{4}$        $6\frac{1}{4}$        $7$        $5\frac{1}{4}$        $5$        $5\frac{3}{4}$        $6\frac{2}{4}$        $6\frac{3}{4}$



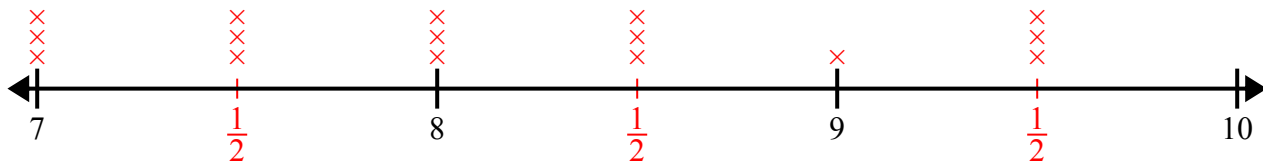
- 2)  $9\frac{2}{8}$        $8$        $9\frac{5}{8}$        $9\frac{7}{8}$        $9$        $8\frac{6}{8}$        $9$        $7\frac{3}{8}$   
 $8\frac{1}{8}$        $9\frac{2}{8}$        $9\frac{3}{8}$        $8\frac{7}{8}$        $9\frac{4}{8}$        $9\frac{4}{8}$        $7\frac{4}{8}$        $9\frac{7}{8}$



- 3)  $8$        $10\frac{2}{4}$        $8\frac{2}{4}$        $8\frac{3}{4}$        $10\frac{3}{4}$        $9\frac{1}{4}$        $10$        $10$   
 $10\frac{3}{4}$        $8\frac{1}{4}$        $10\frac{3}{4}$        $8\frac{1}{4}$        $8\frac{3}{4}$        $9\frac{2}{4}$        $9\frac{1}{4}$        $10$



- 4)  $9\frac{1}{2}$        $9\frac{1}{2}$        $9$        $9\frac{1}{2}$        $7$        $7$        $7$        $8$   
 $7\frac{1}{2}$        $8\frac{1}{2}$        $8\frac{1}{2}$        $8$        $8\frac{1}{2}$        $7\frac{1}{2}$        $7\frac{1}{2}$        $8$



- 5)  $10$        $9\frac{1}{2}$        $11$        $9$        $10$        $11$        $10\frac{1}{2}$        $11$   
 $9$        $10\frac{1}{2}$        $11\frac{1}{2}$        $11\frac{1}{2}$        $10\frac{1}{2}$        $11\frac{1}{2}$        $10$        $9$

