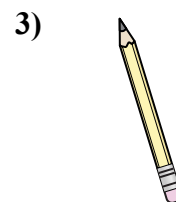





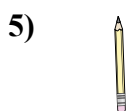
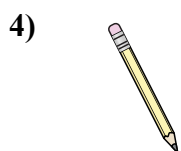
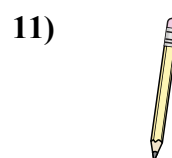

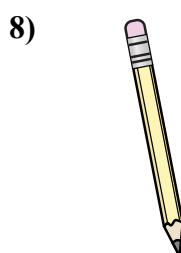




Измерьте каждый ЭЛЕМЕНТ от наконечника до наконечника, затем поместите результаты на линейный график.

ОТВЕТЫоб) об. $\frac{1}{4}$ 1. $1\frac{1}{2}$ 2. $1\frac{3}{4}$ 3. 1 4. $\frac{3}{4}$ 5. $\frac{1}{2}$ 6. $1\frac{1}{4}$ 7. 2 8. $1\frac{1}{4}$ 9. $\frac{1}{2}$ 10. 2 11. $\frac{3}{4}$

Line Plot							
	X	X		X			X
X	X	X	X	X	X	X	X
$\frac{1}{4}$	$\frac{1}{2}$	$\frac{3}{4}$	1	$1\frac{1}{4}$	$1\frac{1}{2}$	$1\frac{3}{4}$	2