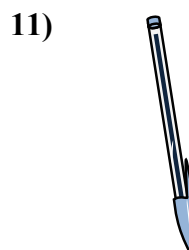
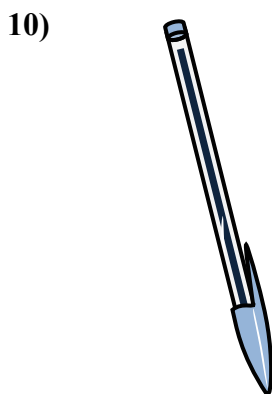
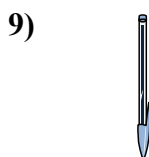
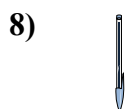
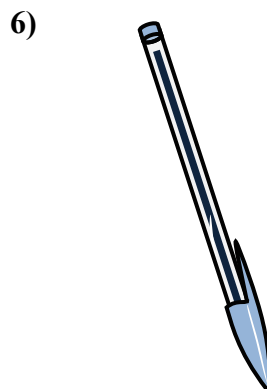
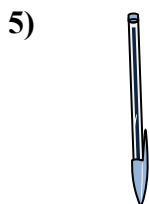

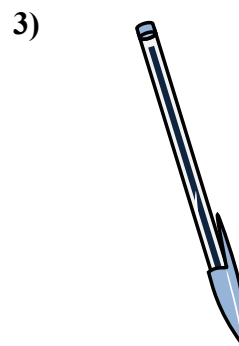
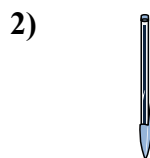







Измерьте каждый ЭЛЕМЕНТ от наконечника до наконечника, затем поместите результаты на линейный график.

**ОТВЕТЫ**об.  $\frac{1}{2}$ 1.  $1\frac{1}{4}$ 2.  $\frac{3}{4}$ 3.  $1\frac{3}{4}$ 4.  $\frac{1}{4}$ 5.  $1$ 6.  $2$ 7.  $1\frac{1}{2}$ 8.  $\frac{1}{2}$ 9.  $\frac{3}{4}$ 10.  $2$ 11.  $1\frac{1}{4}$ 

Line Plot							
	X	X		X			X
X	X	X	X	X	X	X	X
$\frac{1}{4}$	$\frac{1}{2}$	$\frac{3}{4}$	1	$1\frac{1}{4}$	$1\frac{1}{2}$	$1\frac{3}{4}$	2