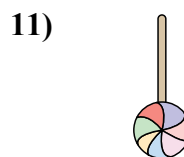
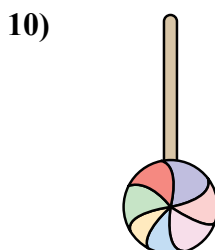


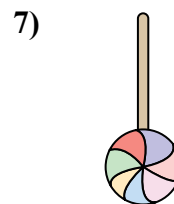

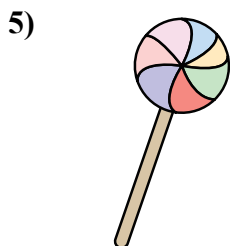
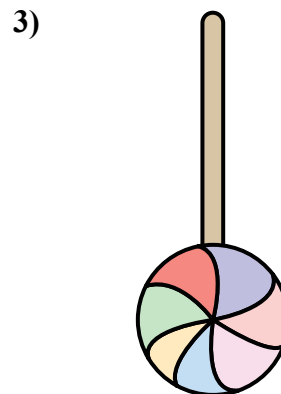
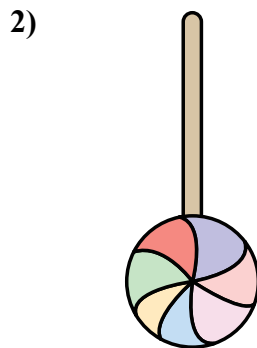
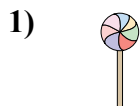





Измерьте каждый ЭЛЕМЕНТ от наконечника до наконечника, затем поместите результаты на линейный график.

ОТВЕТЫоб. $\frac{3}{4}$ 1. $\frac{1}{2}$ 2. $1\frac{3}{4}$ 3. 2 4. $\frac{1}{4}$ 5. $1\frac{1}{4}$ 6. $1\frac{1}{2}$ 7. 1 8. 2 9. 1 10. $1\frac{1}{4}$ 11. $\frac{3}{4}$

Line Plot							
X	X	X	X	X	X	X	X
$\frac{1}{4}$	$\frac{1}{2}$	$\frac{3}{4}$	1	$1\frac{1}{4}$	$1\frac{1}{2}$	$1\frac{3}{4}$	2