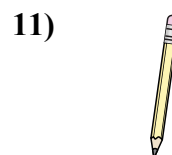




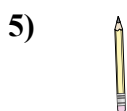
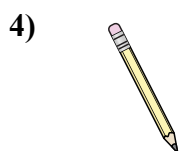










Измерьте каждый ЭЛЕМЕНТ от наконечника до наконечника, затем поместите результаты на линейный график.

**ОТВЕТЫ**об) об.  $\frac{1}{4}$ 1.  $1\frac{1}{2}$ 2.  $1\frac{3}{4}$ 3.  $1$ 4.  $\frac{3}{4}$ 5.  $\frac{1}{2}$ 6.  $1\frac{1}{4}$ 7.  $2$ 8.  $1\frac{1}{4}$ 9.  $\frac{1}{2}$ 10.  $2$ 11.  $\frac{3}{4}$ 

Line Plot							
	X	X		X			X
X	X	X	X	X	X	X	X
$\frac{1}{4}$	$\frac{1}{2}$	$\frac{3}{4}$	1	$1\frac{1}{4}$	$1\frac{1}{2}$	$1\frac{3}{4}$	2







Измерьте каждый ЭЛЕМЕНТ от наконечника до наконечника, затем поместите результаты на линейный график.

**ОТВЕТЫ**

об)



1)



2)



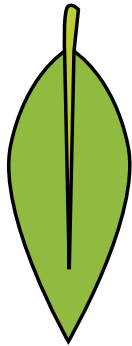
3)

об.  $\frac{1}{2}$ 1.  $1\frac{1}{2}$ 2.  $\frac{3}{4}$ 3.  $1\frac{1}{4}$ 4.  $\frac{1}{4}$ 5.  $1\frac{3}{4}$ 

4)




5)




6)



7)

6. **1**7. **2**8. **2**9.  $\frac{1}{4}$ 10.  $1\frac{3}{4}$ 

8)



9)



10)



11)

11.  $\frac{3}{4}$ 

Line Plot							
X		X				X	X
X	X	X	X	X	X	X	X
$\frac{1}{4}$	$\frac{1}{2}$	$\frac{3}{4}$	1	$1\frac{1}{4}$	$1\frac{1}{2}$	$1\frac{3}{4}$	2







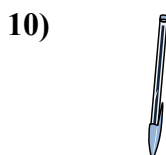

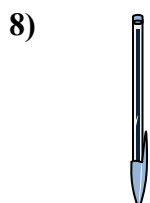

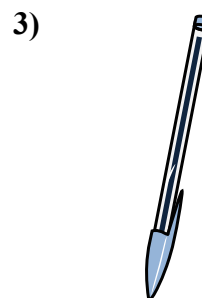
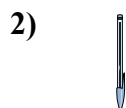

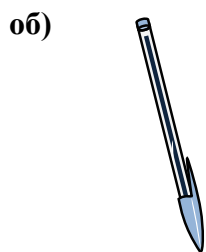








Измерьте каждый ЭЛЕМЕНТ от наконечника до наконечника, затем поместите результаты на линейный график.

**ОТВЕТЫ**об. 1 1/41. 22. 1/23. 1 1/24. 3/45. 1/46. 1 3/47. 18. 19. 210. 3/411. 1 1/2

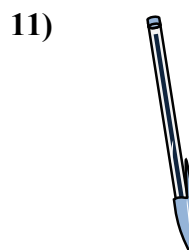
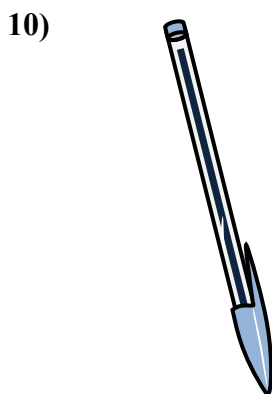
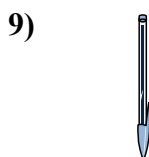
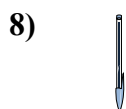
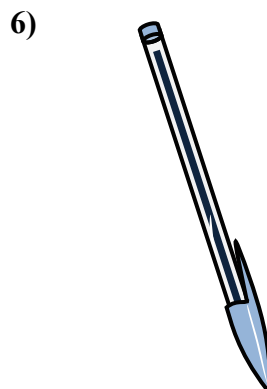
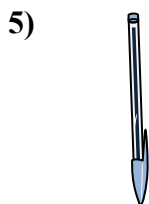

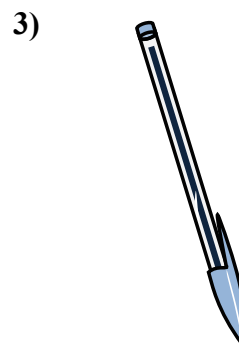
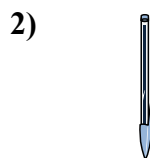


Line Plot							
X	X	X	X	X	X	X	X
1/4	1/2	3/4	1	1 1/4	1 1/2	1 3/4	2







Измерьте каждый ЭЛЕМЕНТ от наконечника до наконечника, затем поместите результаты на линейный график.

**ОТВЕТЫ**об.  $\frac{1}{2}$ 1.  $1\frac{1}{4}$ 2.  $\frac{3}{4}$ 3.  $1\frac{3}{4}$ 4.  $\frac{1}{4}$ 5.  $1$ 6.  $2$ 7.  $1\frac{1}{2}$ 8.  $\frac{1}{2}$ 9.  $\frac{3}{4}$ 10.  $2$ 11.  $1\frac{1}{4}$ 

Line Plot							
	X	X		X			X
X	X	X	X	X	X	X	X
$\frac{1}{4}$	$\frac{1}{2}$	$\frac{3}{4}$	1	$1\frac{1}{4}$	$1\frac{1}{2}$	$1\frac{3}{4}$	2







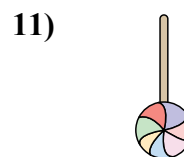
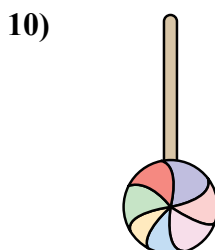


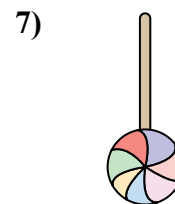

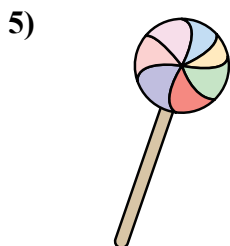
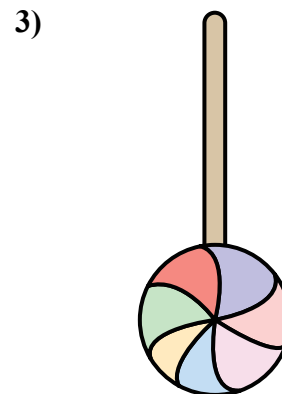
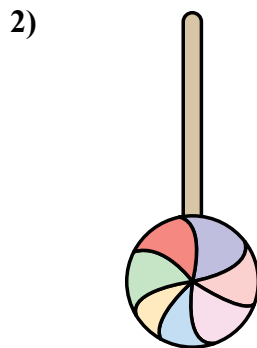
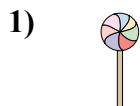









Измерьте каждый ЭЛЕМЕНТ от наконечника до наконечника, затем поместите результаты на линейный график.

**ОТВЕТЫ**об.  $\frac{3}{4}$ 1.  $\frac{1}{2}$ 2.  $1\frac{3}{4}$ 3.  $2$ 4.  $\frac{1}{4}$ 5.  $1\frac{1}{4}$ 6.  $1\frac{1}{2}$ 7.  $1$ 8.  $2$ 9.  $1$ 10.  $1\frac{1}{4}$ 11.  $\frac{3}{4}$ 

Line Plot							
X	X	X	X	X	X	X	X
$\frac{1}{4}$	$\frac{1}{2}$	$\frac{3}{4}$	$1$	$1\frac{1}{4}$	$1\frac{1}{2}$	$1\frac{3}{4}$	$2$





















