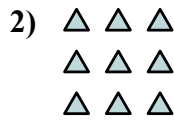





Запишите каждую совокупность в виде суммы и решите ее.



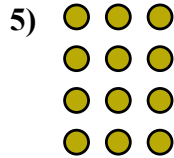
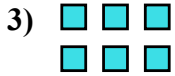
ОТВЕТЫ

об. 2+2=4

1. _____

2. _____

3. _____

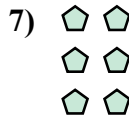



4. _____

5. _____

6. _____

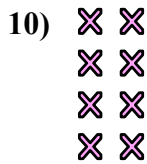
7. _____



8. _____

9. _____

10. _____

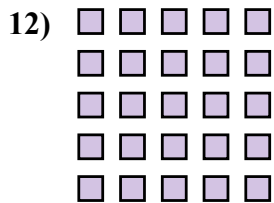


11. _____

12. _____

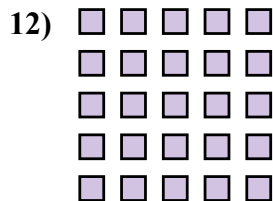


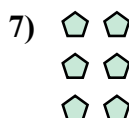
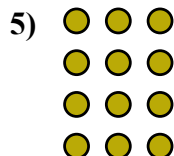
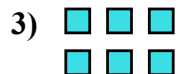
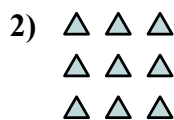
13. _____

14. _____





Запишите каждую совокупность в виде суммы и решите ее.

ОТВЕТЫоб. 2+2=41. 2+2+2+2+2=102. 3+3+3=93. 3+3=64. 4+4+4=125. 3+3+3+3=126. 4+4+4+4+4=207. 2+2+2=68. 3+3+3+3+3=159. 5+5=1010. 2+2+2+2=811. 5+5+5=1512. 5+5+5+5+5=2513. 4+4=814. 4+4+4+4=16