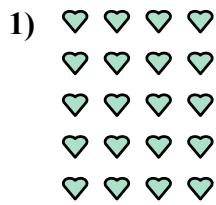





Запишите каждую совокупность в виде суммы и решите ее.

ОТВЕТЫ

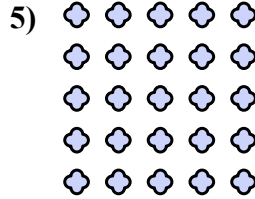


об. $4+4+4+4=16$

1. _____

2. _____

3. _____

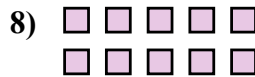
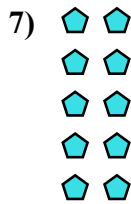


4. _____

5. _____

6. _____

7. _____


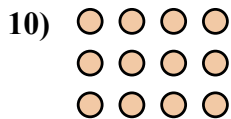
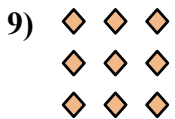


8. _____

9. _____

10. _____


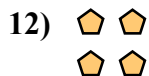
11. _____



12. _____





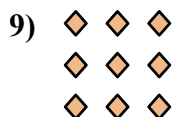
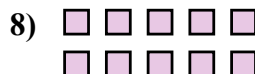


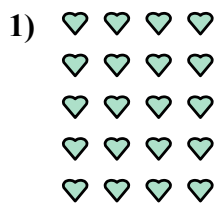

13. _____

14. _____





Запишите каждую совокупность в виде суммы и решите ее.

**ОТВЕТЫ**

об. $4+4+4+4=16$

1. $4+4+4+4+4=20$

2. $5+5+5+5=20$

3. $3+3=6$

4. $3+3+3+3=12$

5. $5+5+5+5+5=25$

6. $5+5+5=15$

7. $2+2+2+2+2=10$

8. $5+5=10$

9. $3+3+3=9$

10. $4+4+4=12$

11. $2+2+2+2=8$

12. $2+2=4$

13. $2+2+2=6$

14. $4+4=8$