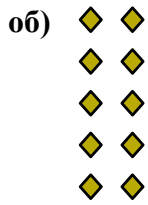




Запишите каждую совокупность в виде суммы и решите ее.



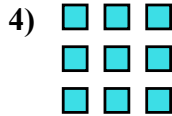
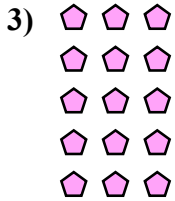
ОТВЕТЫ

об. $2+2+2+2+2=10$

1. _____

2. _____

3. _____


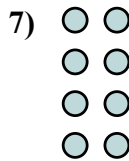



4. _____

5. _____

6. _____

7. _____

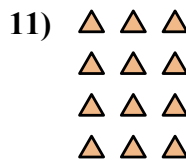



8. _____

9. _____

10. _____

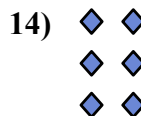
11. _____



12. _____

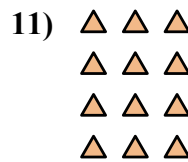



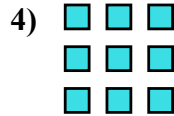
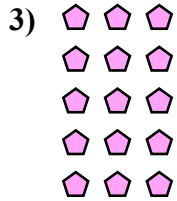

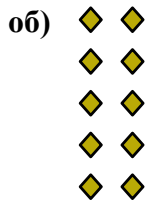
13. _____

14. _____





Запишите каждую совокупность в виде суммы и решите ее.

ОТВЕТЫ

об. $2+2+2+2+2=10$

1. $4+4+4+4=16$

2. $4+4+4=12$

3. $3+3+3+3+3=15$

4. $3+3+3=9$

5. $2+2=4$

6. $5+5+5=15$

7. $2+2+2+2=8$

8. $5+5+5+5+5=25$

9. $4+4+4+4+4=20$

10. $5+5=10$

11. $3+3+3+3=12$

12. $4+4=8$

13. $5+5+5+5=20$

14. $2+2+2=6$