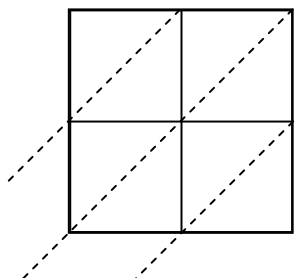




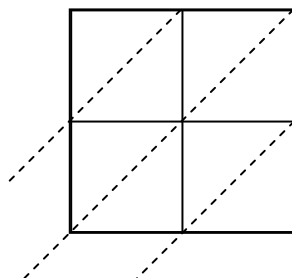
Используйте пространственную решетку для умножения, чтобы решить задачу.

**ОТВЕТЫ**

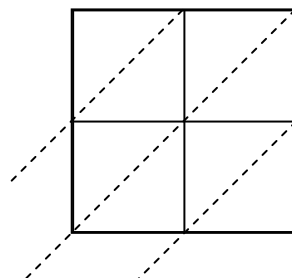
1)  $99 \times 31 =$



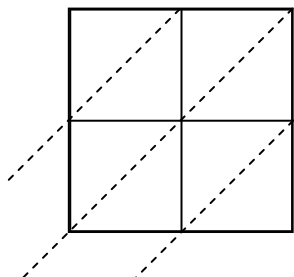
2)  $93 \times 58 =$



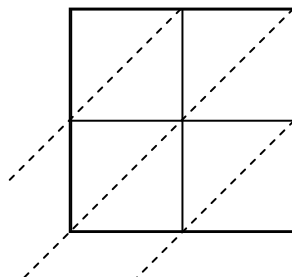
3)  $46 \times 16 =$



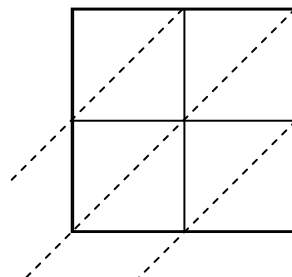
4)  $74 \times 35 =$



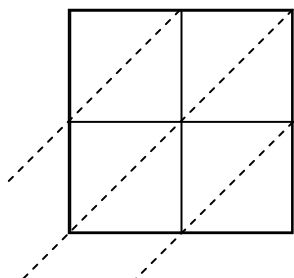
5)  $96 \times 28 =$



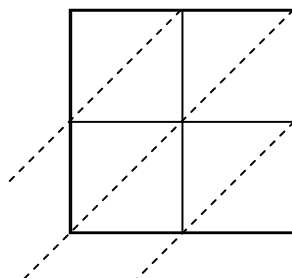
6)  $30 \times 84 =$



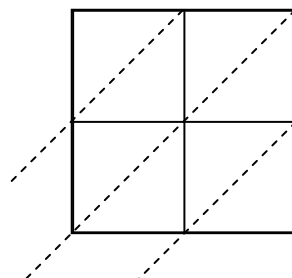
7)  $55 \times 37 =$



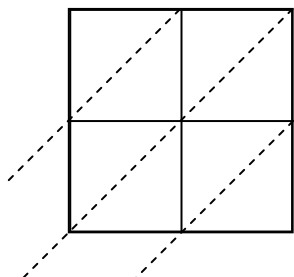
8)  $43 \times 91 =$



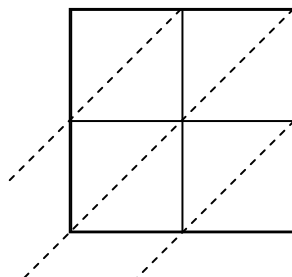
9)  $78 \times 20 =$



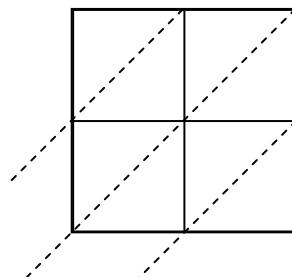
10)  $84 \times 10 =$



11)  $61 \times 10 =$



12)  $47 \times 15 =$

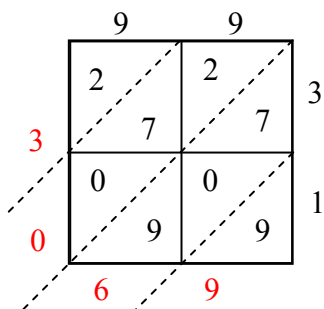


1. \_\_\_\_\_
2. \_\_\_\_\_
3. \_\_\_\_\_
4. \_\_\_\_\_
5. \_\_\_\_\_
6. \_\_\_\_\_
7. \_\_\_\_\_
8. \_\_\_\_\_
9. \_\_\_\_\_
10. \_\_\_\_\_
11. \_\_\_\_\_
12. \_\_\_\_\_

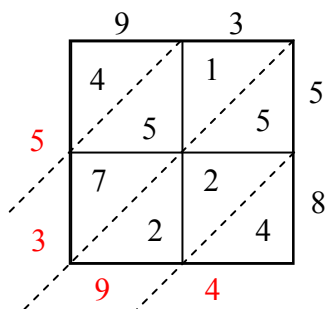


Используйте пространственную решетку для умножения, чтобы решить задачу.

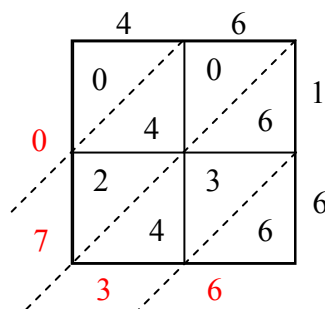
1)  $99 \times 31 =$



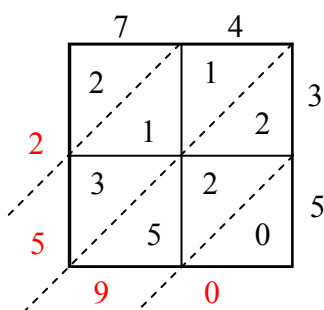
2)  $93 \times 58 =$



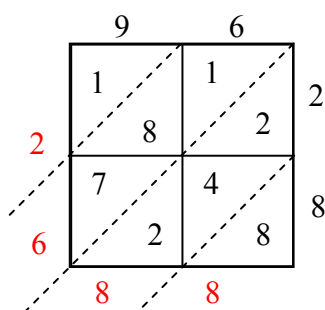
3)  $46 \times 16 =$



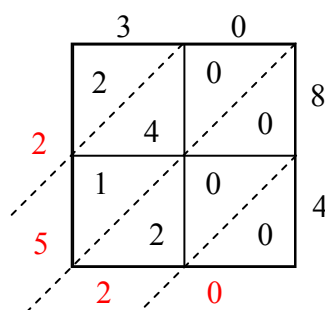
4)  $74 \times 35 =$



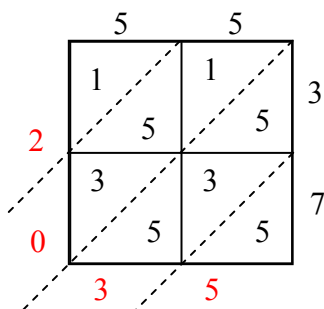
5)  $96 \times 28 =$



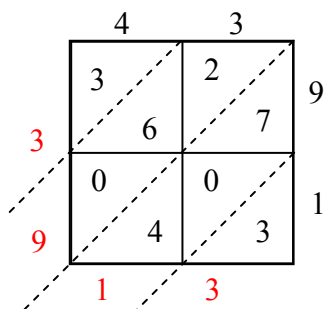
6)  $30 \times 84 =$



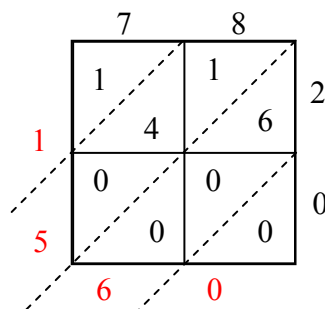
7)  $55 \times 37 =$



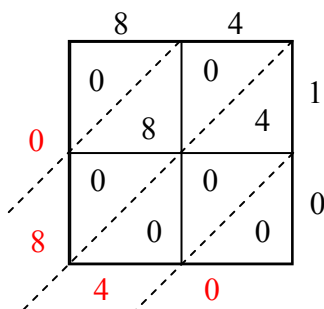
8)  $43 \times 91 =$



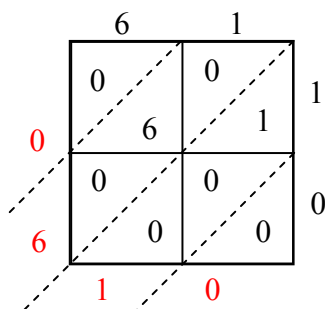
9)  $78 \times 20 =$



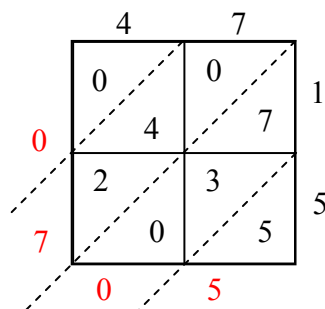
10)  $84 \times 10 =$



11)  $61 \times 10 =$



12)  $47 \times 15 =$



**ОТВЕТЫ**

1. 3 069

2. 5 394

3. 736

4. 2 590

5. 2 688

6. 2 520

7. 2 035

8. 3 913

9. 1 560

10. 840

11. 610

12. 705