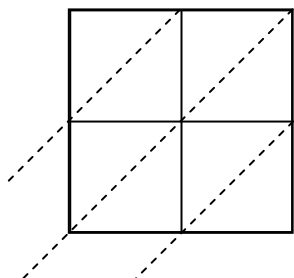




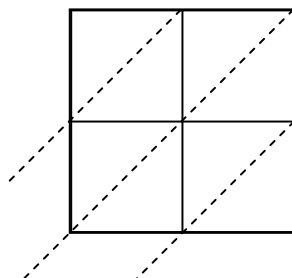
Используйте пространственную решетку для умножения, чтобы решить задачу.

Ответы

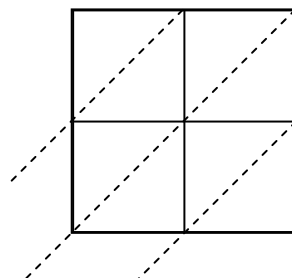
1) $20 \times 50 =$



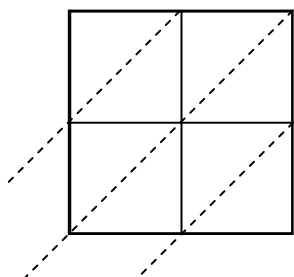
2) $26 \times 75 =$



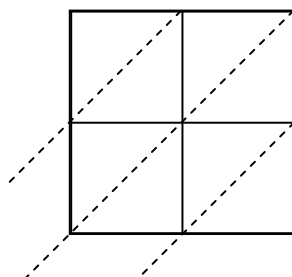
3) $38 \times 11 =$



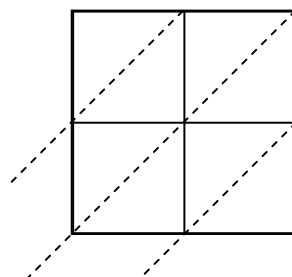
4) $17 \times 23 =$



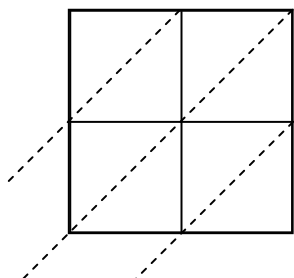
5) $29 \times 67 =$



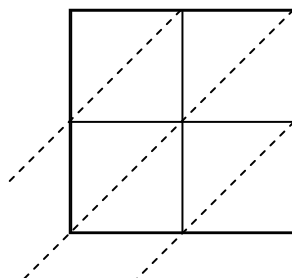
6) $51 \times 89 =$



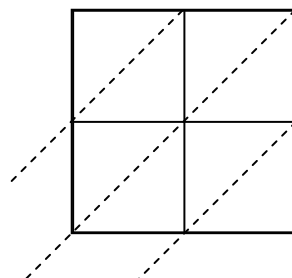
7) $79 \times 16 =$



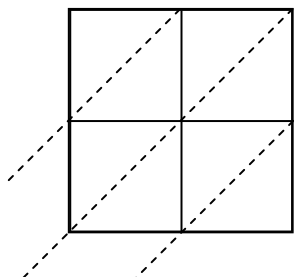
8) $63 \times 72 =$



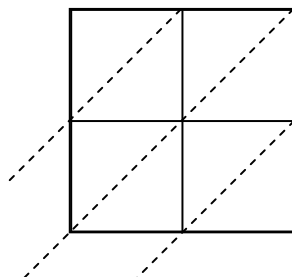
9) $77 \times 27 =$



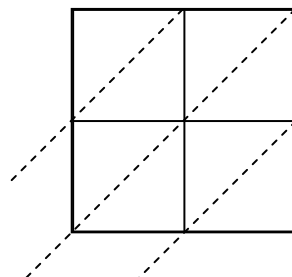
10) $74 \times 56 =$



11) $72 \times 86 =$



12) $72 \times 97 =$

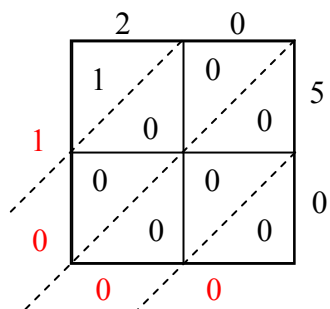


1. _____
2. _____
3. _____
4. _____
5. _____
6. _____
7. _____
8. _____
9. _____
10. _____
11. _____
12. _____

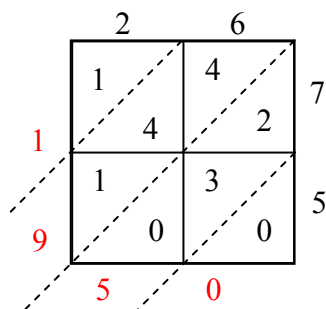


Используйте пространственную решетку для умножения, чтобы решить задачу.

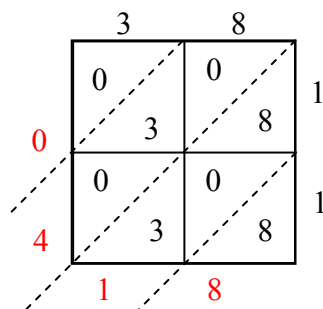
1) $20 \times 50 =$



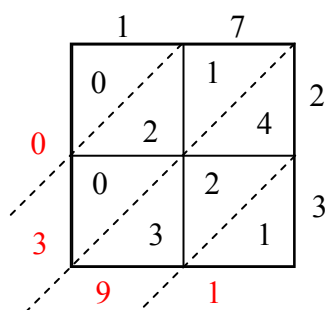
2) $26 \times 75 =$



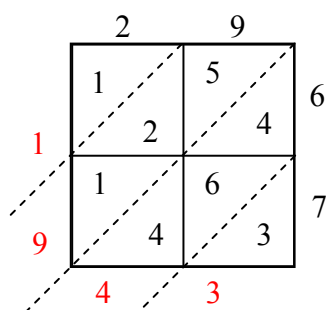
3) $38 \times 11 =$



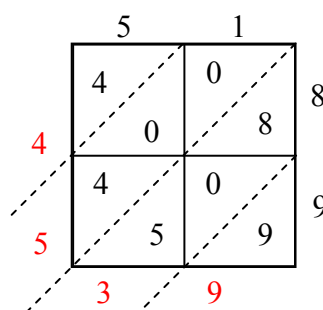
4) $17 \times 23 =$



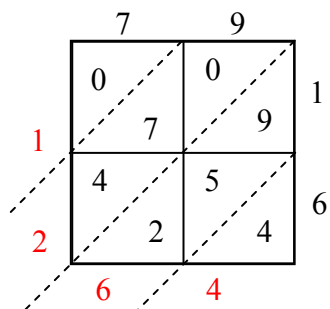
5) $29 \times 67 =$



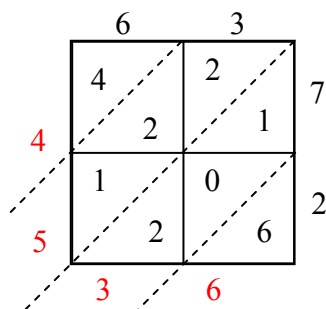
6) $51 \times 89 =$



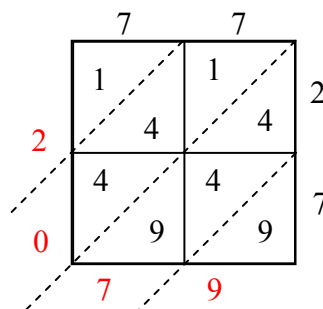
7) $79 \times 16 =$



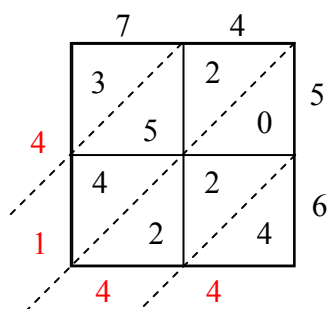
8) $63 \times 72 =$



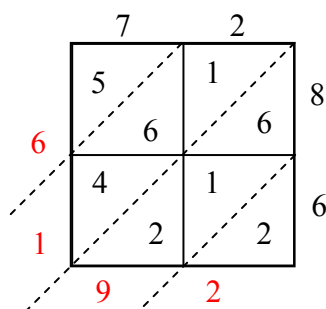
9) $77 \times 27 =$



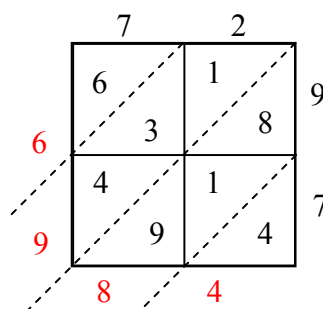
10) $74 \times 56 =$



11) $72 \times 86 =$



12) $72 \times 97 =$



ОТВЕТЫ

1. 1 000
2. 1 950
3. 418
4. 391
5. 1 943
6. 4 539
7. 1 264
8. 4 536
9. 2 079
10. 4 144
11. 6 192
12. 6 984