

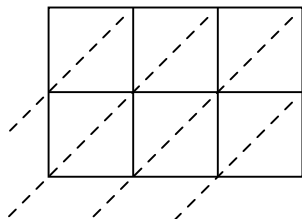


Используйте пространственную решетку для умножения, чтобы решить задачу.

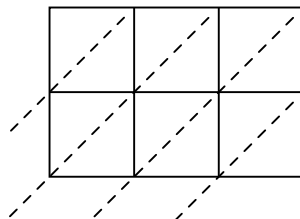
1)  $927 \times 78 =$



2)  $669 \times 51 =$



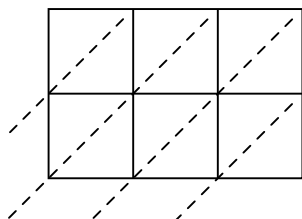
3)  $864 \times 95 =$



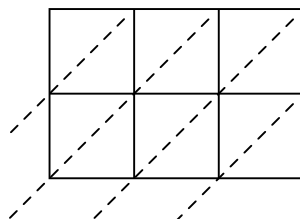
4)  $709 \times 28 =$



5)  $776 \times 14 =$



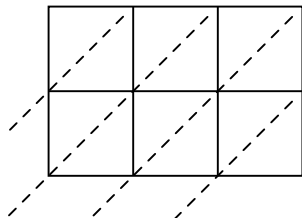
6)  $743 \times 46 =$



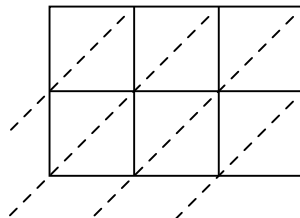
7)  $139 \times 10 =$



8)  $139 \times 15 =$



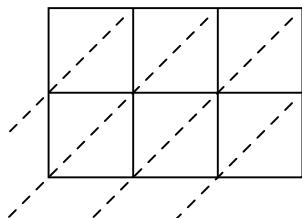
9)  $652 \times 85 =$



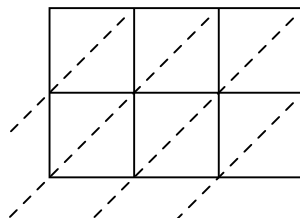
10)  $692 \times 17 =$



11)  $362 \times 41 =$



12)  $355 \times 63 =$



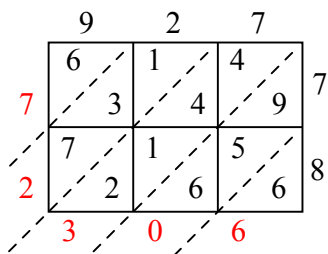
**ОТВЕТЫ**

1. \_\_\_\_\_
2. \_\_\_\_\_
3. \_\_\_\_\_
4. \_\_\_\_\_
5. \_\_\_\_\_
6. \_\_\_\_\_
7. \_\_\_\_\_
8. \_\_\_\_\_
9. \_\_\_\_\_
10. \_\_\_\_\_
11. \_\_\_\_\_
12. \_\_\_\_\_

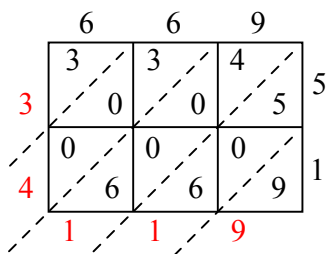


Используйте пространственную решетку для умножения, чтобы решить задачу.

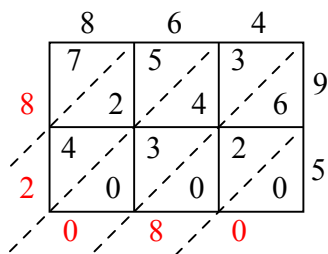
1)  $927 \times 78 =$



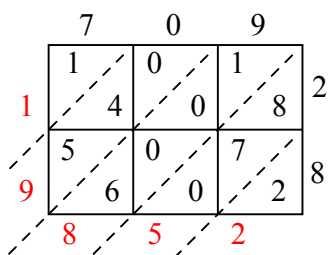
2)  $669 \times 51 =$



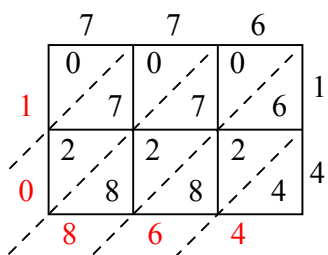
3)  $864 \times 95 =$



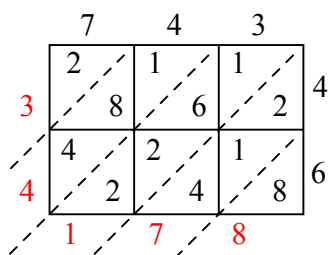
4)  $709 \times 28 =$



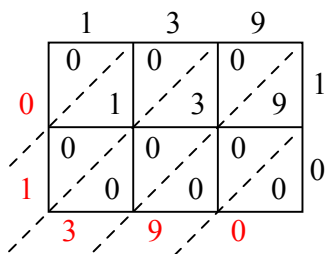
5)  $776 \times 14 =$



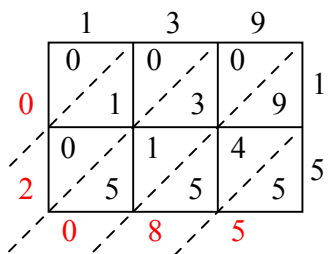
6)  $743 \times 46 =$



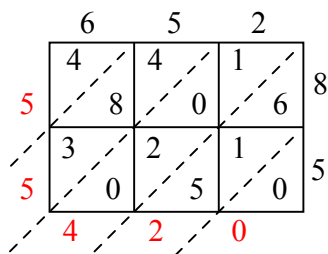
7)  $139 \times 10 =$



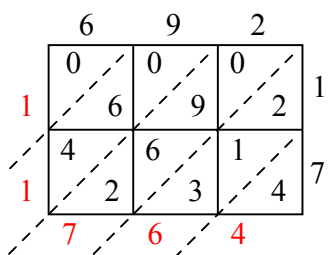
8)  $139 \times 15 =$



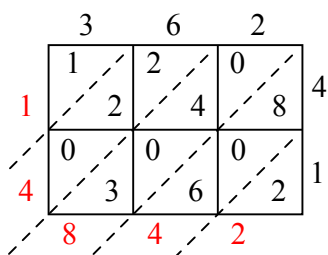
9)  $652 \times 85 =$



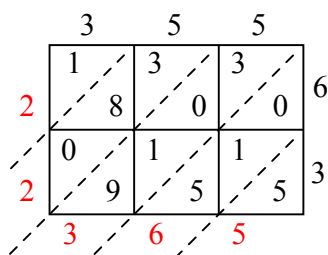
10)  $692 \times 17 =$



11)  $362 \times 41 =$



12)  $355 \times 63 =$



**Отвeты**

1. 72 306

2. 34 119

3. 82 080

4. 19 852

5. 10 864

6. 34 178

7. 1 390

8. 2 085

9. 55 420

10. 11 764

11. 14 842

12. 22 365