

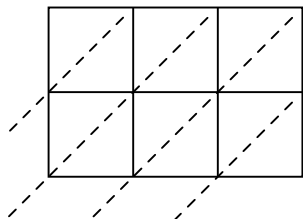


Используйте пространственную решетку для умножения, чтобы решить задачу.

1) $591 \times 54 =$



2) $722 \times 75 =$



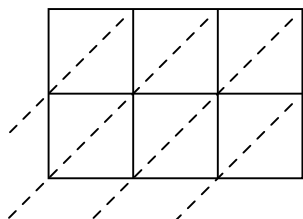
3) $524 \times 33 =$



4) $698 \times 33 =$



5) $447 \times 39 =$



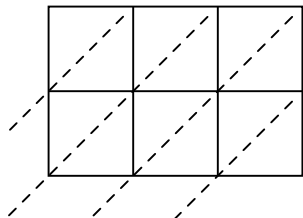
6) $111 \times 53 =$



7) $696 \times 63 =$



8) $568 \times 79 =$



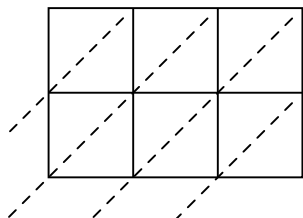
9) $907 \times 26 =$



10) $399 \times 30 =$



11) $798 \times 26 =$



12) $712 \times 46 =$



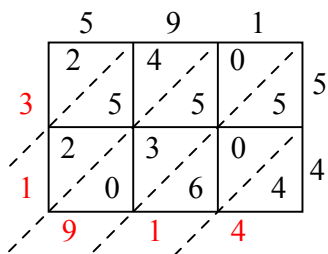
Отвeты

1. _____
2. _____
3. _____
4. _____
5. _____
6. _____
7. _____
8. _____
9. _____
10. _____
11. _____
12. _____

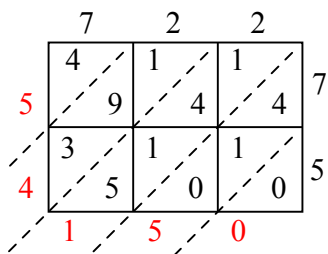


Используйте пространственную решетку для умножения, чтобы решить задачу.

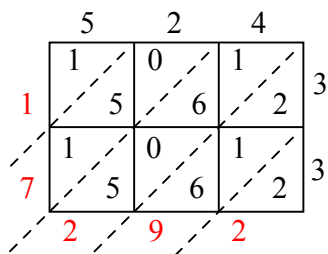
1) $591 \times 54 =$



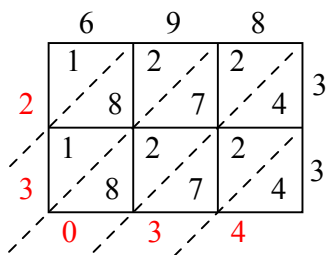
2) $722 \times 75 =$



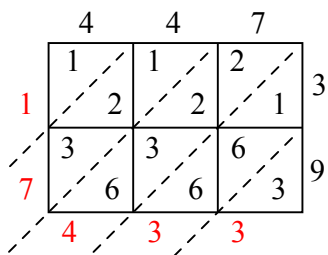
3) $524 \times 33 =$



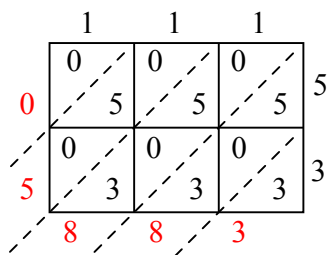
4) $698 \times 33 =$



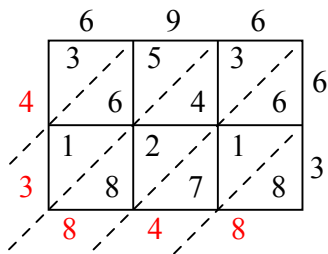
5) $447 \times 39 =$



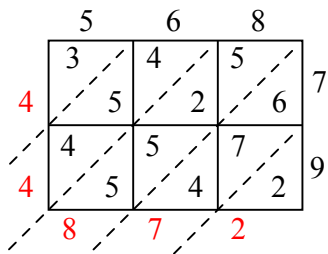
6) $111 \times 53 =$



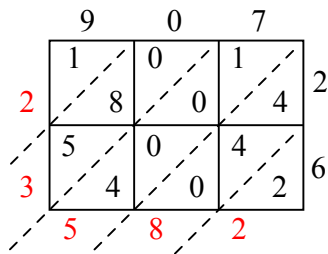
7) $696 \times 63 =$



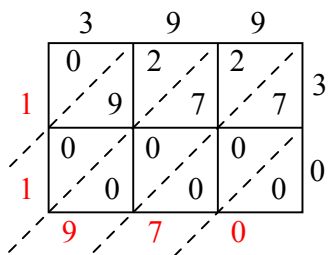
8) $568 \times 79 =$



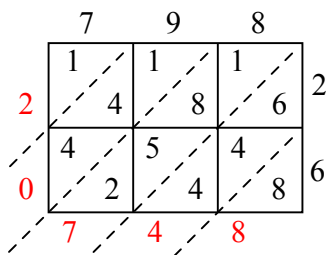
9) $907 \times 26 =$



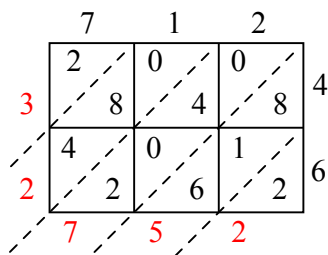
10) $399 \times 30 =$



11) $798 \times 26 =$



12) $712 \times 46 =$



Отвeты

1. 31 914
2. 54 150
3. 17 292
4. 23 034
5. 17 433
6. 5 883
7. 43 848
8. 44 872
9. 23 582
10. 11 970
11. 20 748
12. 32 752