

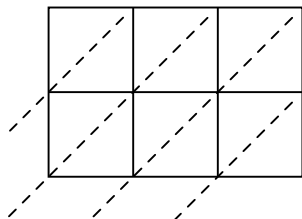


Используйте пространственную решетку для умножения, чтобы решить задачу.

1) $792 \times 44 =$



2) $354 \times 15 =$



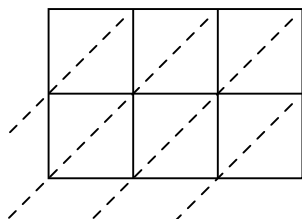
3) $180 \times 89 =$



4) $148 \times 28 =$



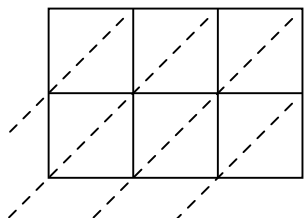
5) $559 \times 61 =$



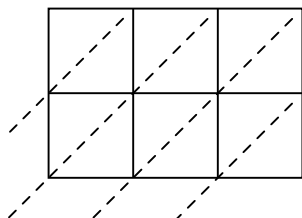
6) $810 \times 17 =$



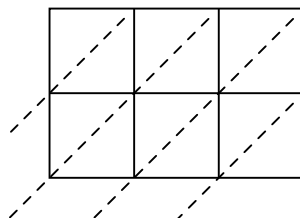
7) $373 \times 42 =$



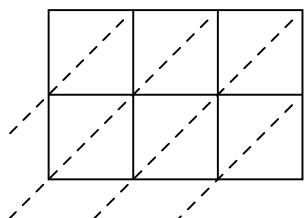
8) $430 \times 59 =$



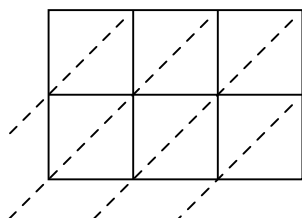
9) $549 \times 31 =$



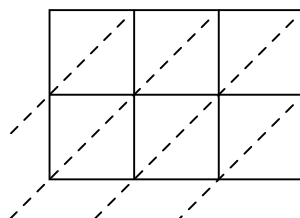
10) $977 \times 58 =$



11) $446 \times 53 =$



12) $568 \times 11 =$



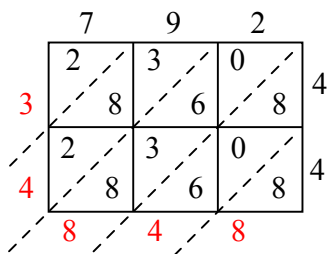
ОТВЕТЫ

1. _____
2. _____
3. _____
4. _____
5. _____
6. _____
7. _____
8. _____
9. _____
10. _____
11. _____
12. _____

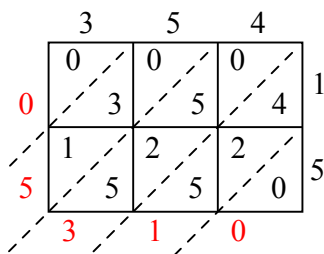


Используйте пространственную решетку для умножения, чтобы решить задачу.

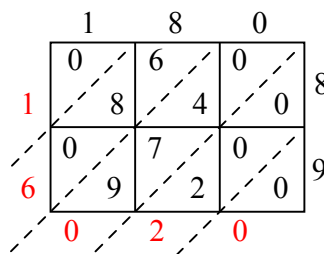
1) $792 \times 44 =$



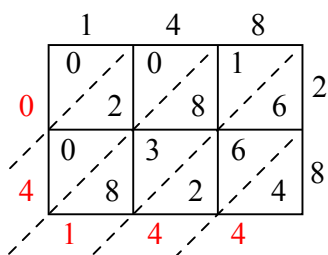
2) $354 \times 15 =$



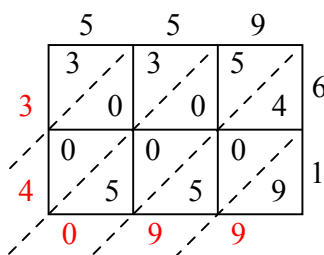
3) $180 \times 89 =$



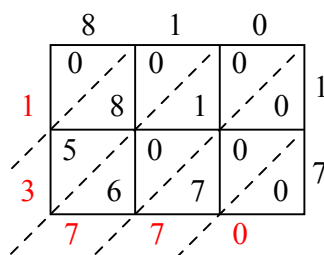
4) $148 \times 28 =$



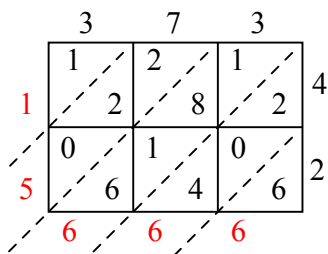
5) $559 \times 61 =$



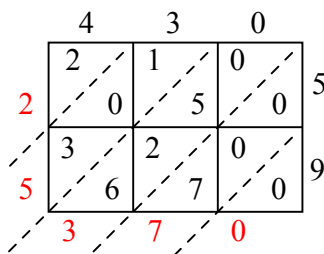
6) $810 \times 17 =$



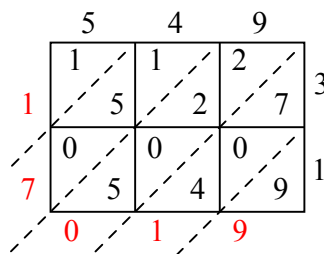
7) $373 \times 42 =$



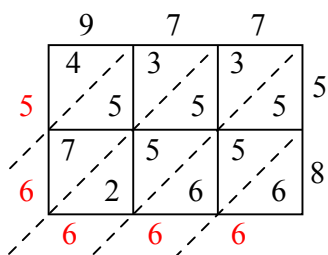
8) $430 \times 59 =$



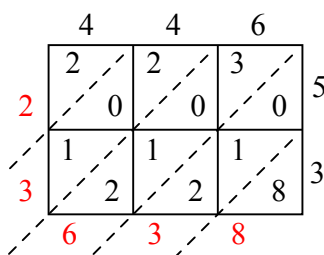
9) $549 \times 31 =$



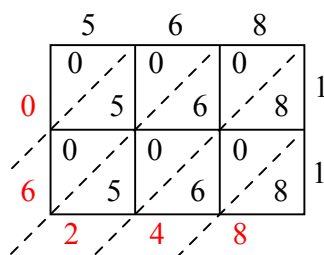
10) $977 \times 58 =$



11) $446 \times 53 =$



12) $568 \times 11 =$



Отвeты

1. 34 848
2. 5 310
3. 16 020
4. 4 144
5. 34 099
6. 13 770
7. 15 666
8. 25 370
9. 17 019
10. 56 666
11. 23 638
12. 6 248