





Напишите уравнение для выражения таблицы и затем найдите количество фигур.

Ответы

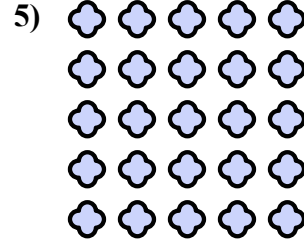
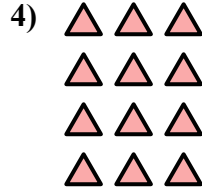


об. $4 \times 4 = 16$

1. _____

2. _____

3. _____

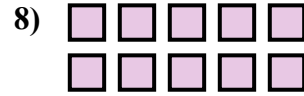
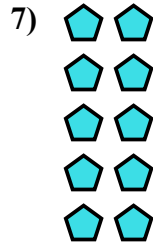


4. _____

5. _____

6. _____



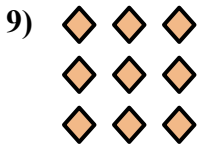
7. _____



8. _____

9. _____

10. _____

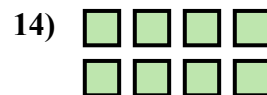

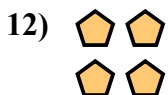


11. _____

12. _____

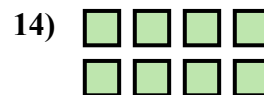

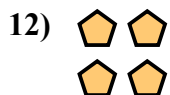

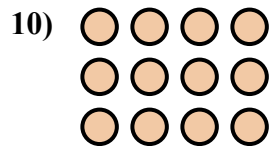
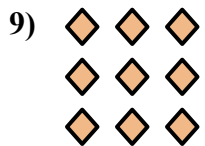
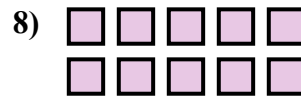
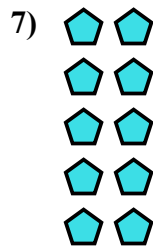
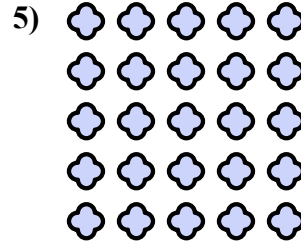
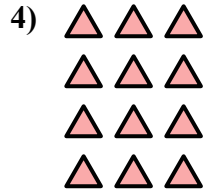


13. _____

14. _____





Напишите уравнение для выражения таблицы и затем найдите количество фигур.



Отвeты

об. $4 \times 4 = 16$

1. $5 \times 4 = 20$

2. $4 \times 5 = 20$

3. $2 \times 3 = 6$

4. $4 \times 3 = 12$

5. $5 \times 5 = 25$

6. $3 \times 5 = 15$

7. $5 \times 2 = 10$

8. $2 \times 5 = 10$

9. $3 \times 3 = 9$

10. $3 \times 4 = 12$

11. $4 \times 2 = 8$

12. $2 \times 2 = 4$

13. $3 \times 2 = 6$

14. $2 \times 4 = 8$