





Используйте матрицу для решения задачи.


1) $33 \times 20 =$




2) $22 \times 20 =$




3) $10 \times 13 =$




4) $15 \times 10 =$



5) $10 \times 14 =$



6) $12 \times 10 =$

**Отвeты**

1. _____

2. _____

3. _____

4. _____

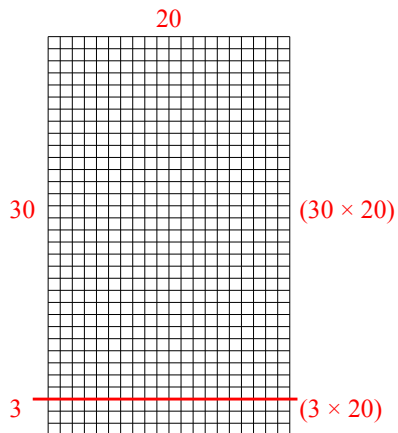
5. _____

6. _____

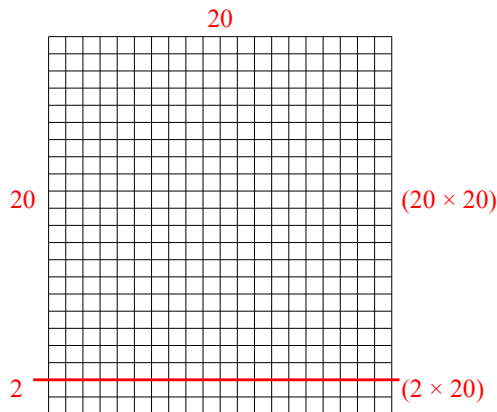


Используйте матрицу для решения задачи.

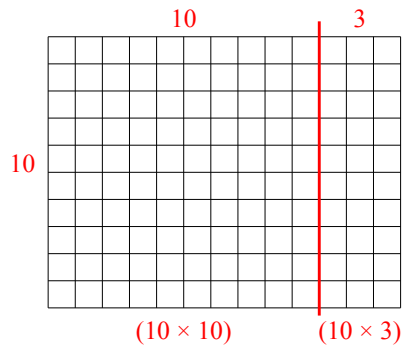
1) $33 \times 20 =$



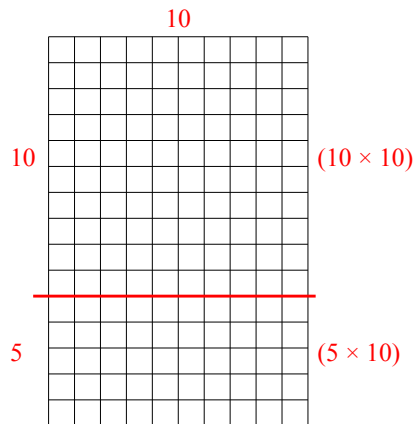
2) $22 \times 20 =$



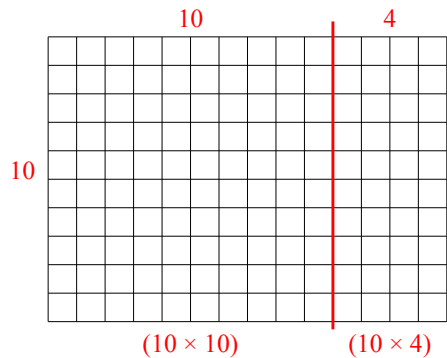
3) $10 \times 13 =$



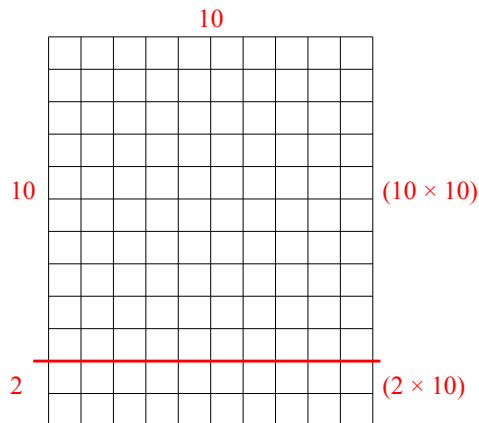
4) $15 \times 10 =$



5) $10 \times 14 =$



6) $12 \times 10 =$



Ответы

1. 660

2. 440

3. 130

4. 150

5. 140

6. 120