





Используйте матрицу для решения задачи.


1) $20 \times 22 =$




2) $10 \times 13 =$




3) $15 \times 10 =$




4) $16 \times 10 =$



5) $12 \times 10 =$



6) $10 \times 11 =$



Ответы

1. _____

2. _____

3. _____

4. _____

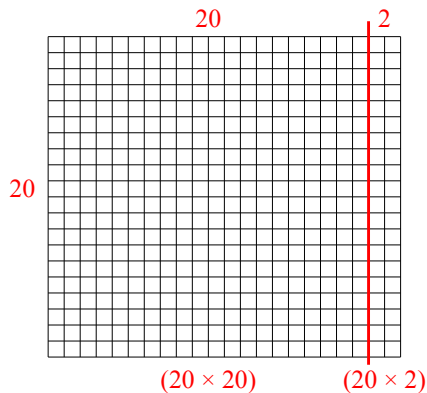
5. _____

6. _____

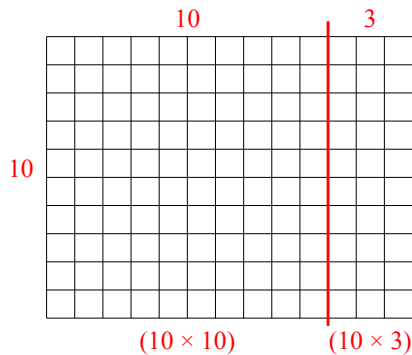


Используйте матрицу для решения задачи.

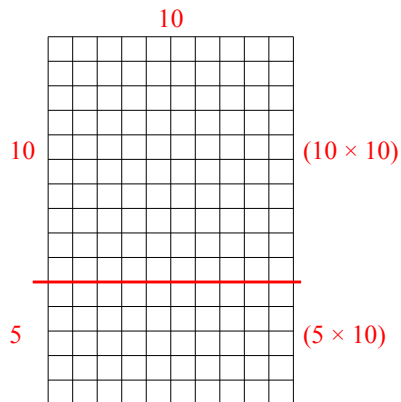
1) $20 \times 22 =$



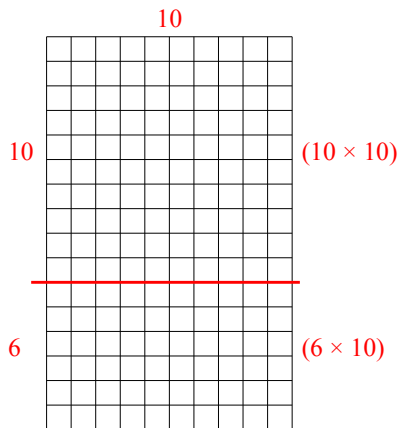
2) $10 \times 13 =$



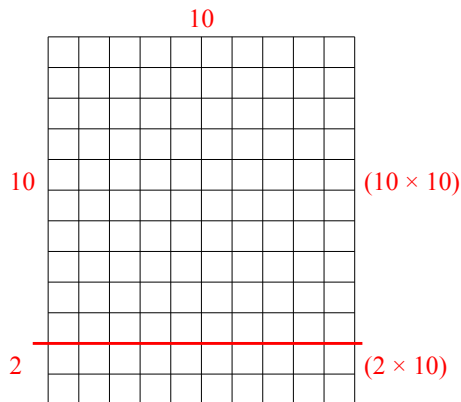
3) $15 \times 10 =$



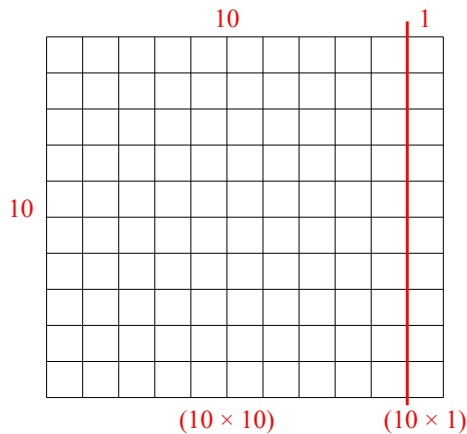
4) $16 \times 10 =$



5) $12 \times 10 =$



6) $10 \times 11 =$



Ответы

1. 440

2. 130

3. 150

4. 160

5. 120

6. 110