





Используйте матрицу для решения задачи.


1)  $22 \times 10 =$




2)  $20 \times 27 =$




3)  $10 \times 12 =$




4)  $10 \times 19 =$



5)  $13 \times 10 =$



6)  $18 \times 10 =$



**Отвeты**

1. \_\_\_\_\_

2. \_\_\_\_\_

3. \_\_\_\_\_

4. \_\_\_\_\_

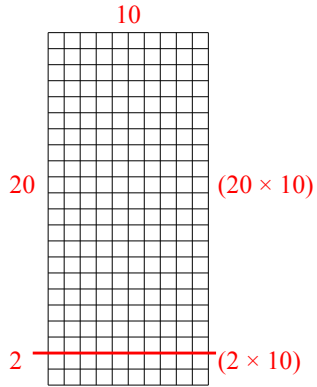
5. \_\_\_\_\_

6. \_\_\_\_\_

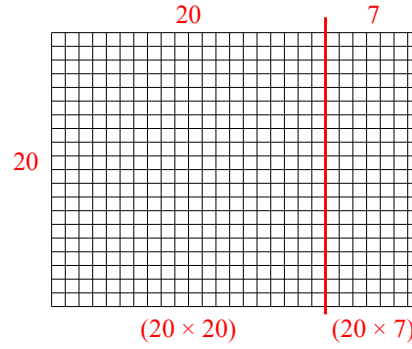


Используйте матрицу для решения задачи.

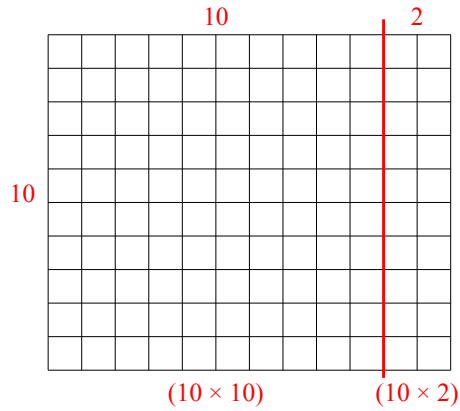
1)  $22 \times 10 =$



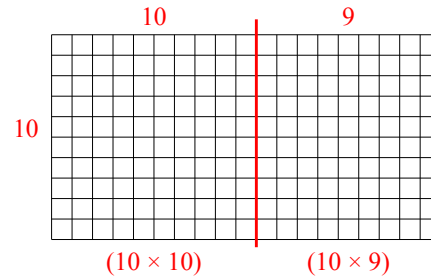
2)  $20 \times 27 =$



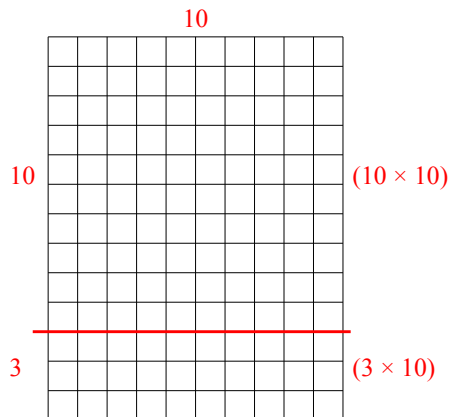
3)  $10 \times 12 =$



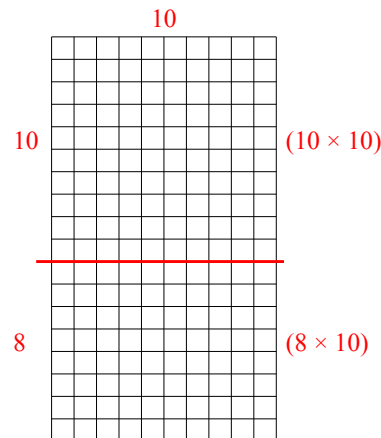
4)  $10 \times 19 =$



5)  $13 \times 10 =$



6)  $18 \times 10 =$



**Ответы**

1. 220
2. 540
3. 120
4. 190
5. 130
6. 180