





Используйте матрицу для решения задачи.


1) $29 \times 20 =$




2) $18 \times 10 =$




3) $11 \times 10 =$




4) $17 \times 10 =$



5) $10 \times 18 =$



6) $10 \times 11 =$



Ответы

1. _____

2. _____

3. _____

4. _____

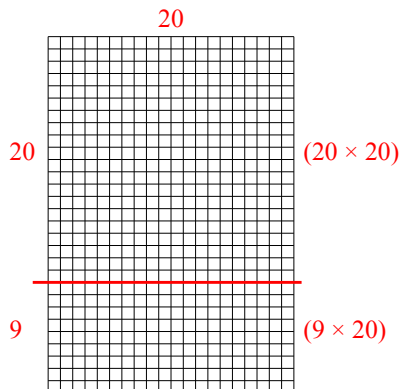
5. _____

6. _____

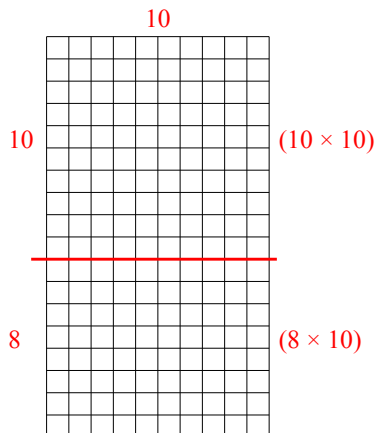


Используйте матрицу для решения задачи.

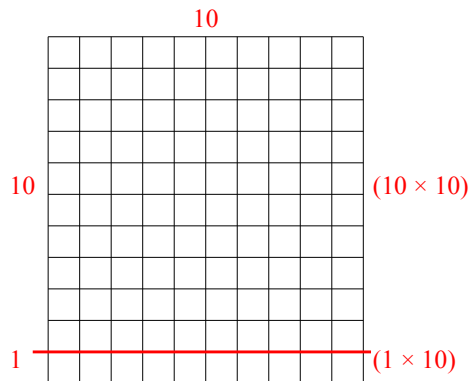
1) $29 \times 20 =$



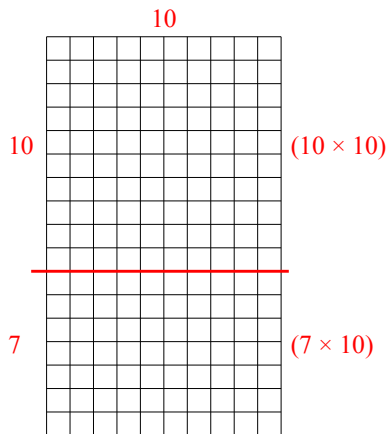
2) $18 \times 10 =$



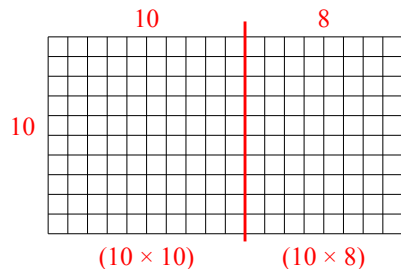
3) $11 \times 10 =$



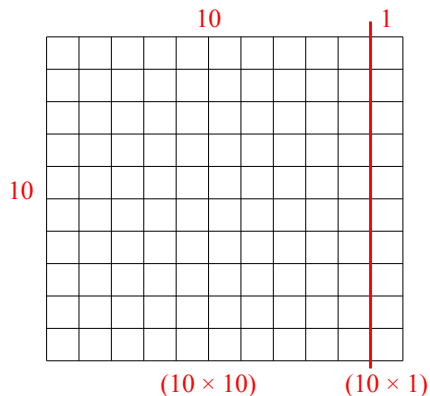
4) $17 \times 10 =$



5) $10 \times 18 =$



6) $10 \times 11 =$



Ответы

1. 580

2. 180

3. 110

4. 170


5. 180

6. 110




Используйте матрицу для решения задачи.


1) $11 \times 10 =$




2) $17 \times 10 =$




3) $10 \times 13 =$




4) $10 \times 17 =$



5) $10 \times 19 =$



6) $10 \times 15 =$



Ответы

1. _____

2. _____

3. _____

4. _____

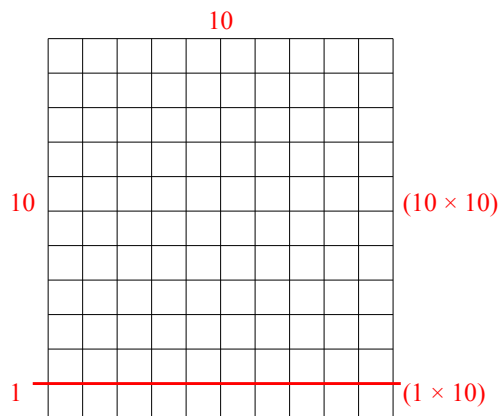
5. _____

6. _____

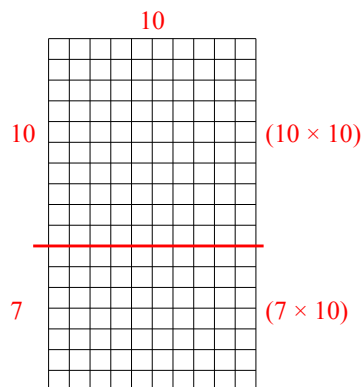


Используйте матрицу для решения задачи.

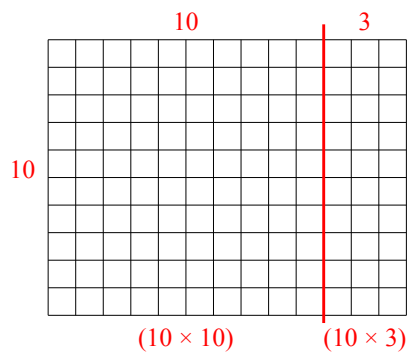
1) $11 \times 10 =$



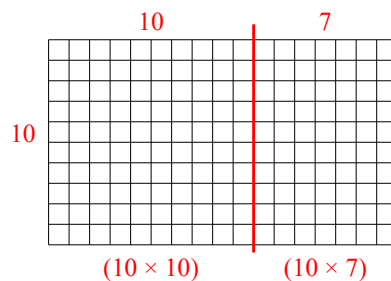
2) $17 \times 10 =$



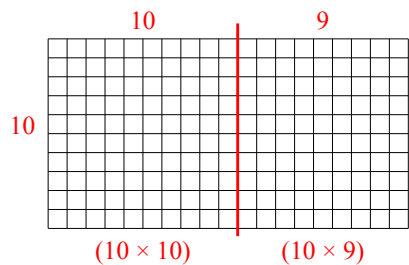
3) $10 \times 13 =$



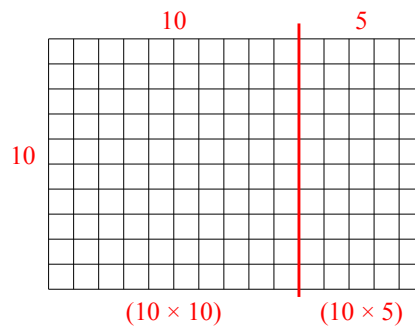
4) $10 \times 17 =$



5) $10 \times 19 =$



6) $10 \times 15 =$



Ответы

1. 110

2. 170

3. 130

4. 170


5. 190

6. 150




Используйте матрицу для решения задачи.


1) $16 \times 10 =$




2) $10 \times 12 =$




3) $19 \times 10 =$




4) $10 \times 19 =$



5) $15 \times 10 =$



6) $10 \times 18 =$



Ответы

1. _____

2. _____

3. _____

4. _____

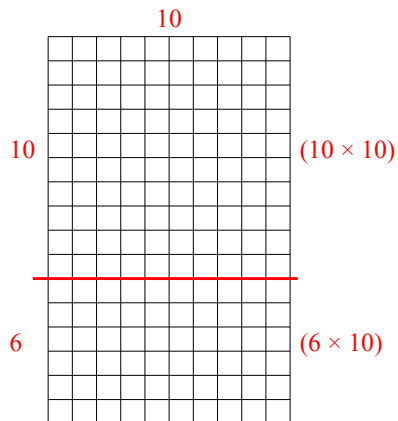
5. _____

6. _____

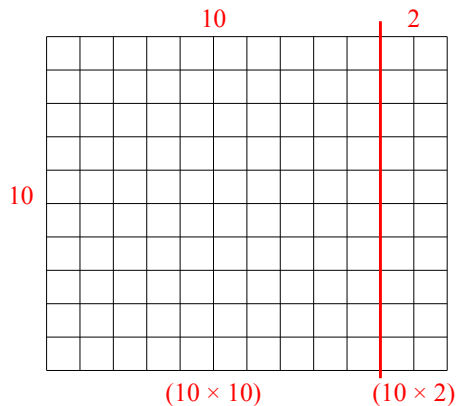


Используйте матрицу для решения задачи.

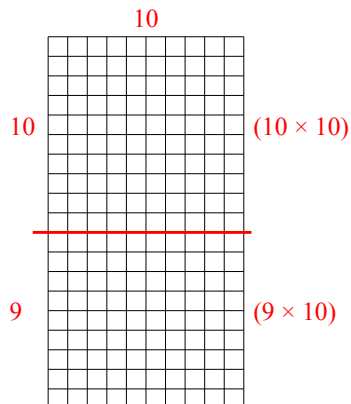
1) $16 \times 10 =$



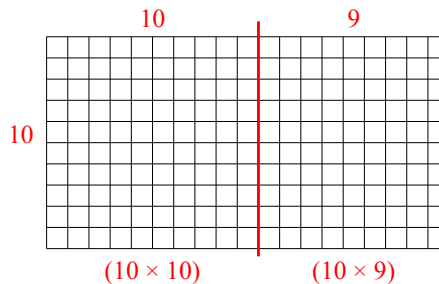
2) $10 \times 12 =$



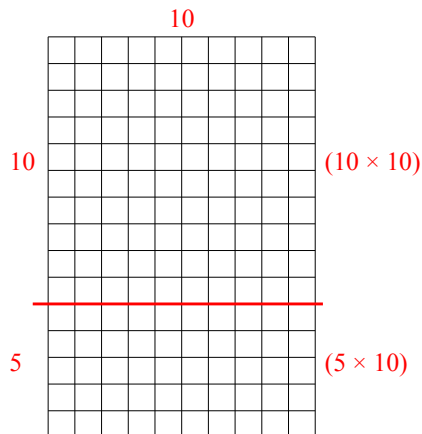
3) $19 \times 10 =$



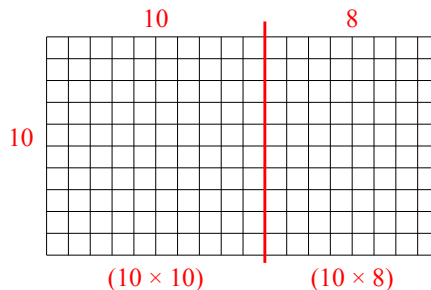
4) $10 \times 19 =$



5) $15 \times 10 =$



6) $10 \times 18 =$



Ответы

1. 160

2. 120

3. 190

4. 190


5. 150

6. 180




Используйте матрицу для решения задачи.


1) $23 \times 20 =$




2) $10 \times 13 =$




3) $10 \times 11 =$




4) $10 \times 17 =$



5) $10 \times 16 =$



6) $19 \times 10 =$



Ответы

1. _____

2. _____

3. _____

4. _____

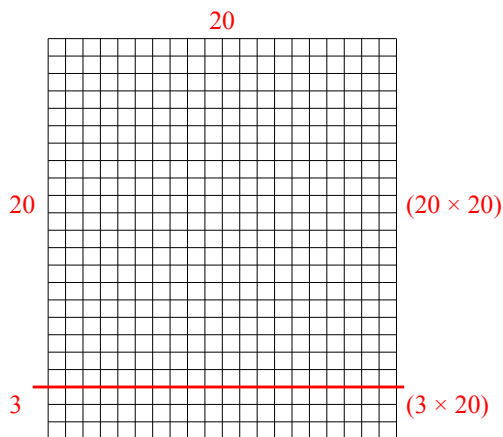
5. _____

6. _____

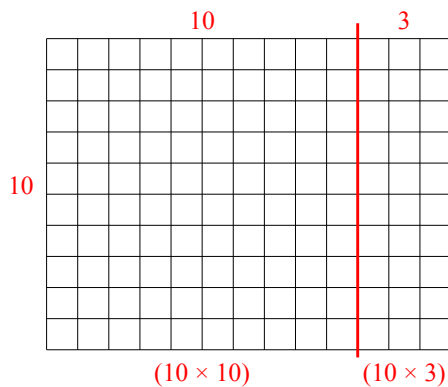


Используйте матрицу для решения задачи.

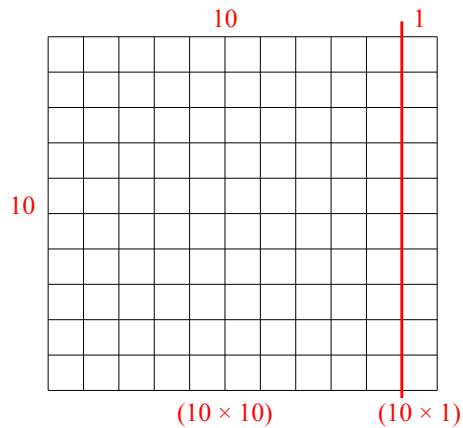
1) $23 \times 20 =$



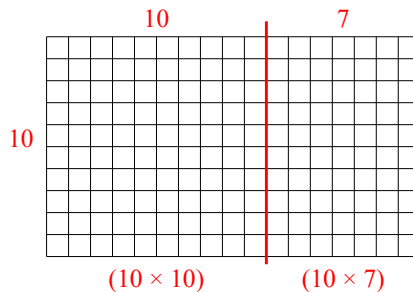
2) $10 \times 13 =$



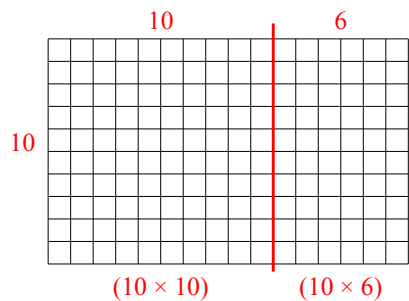
3) $10 \times 11 =$



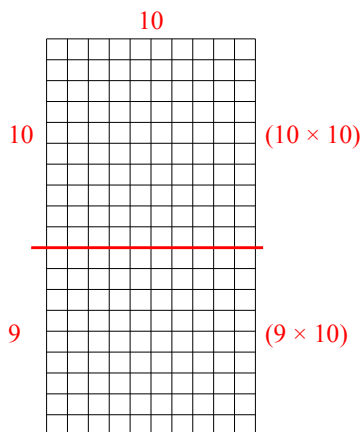
4) $10 \times 17 =$



5) $10 \times 16 =$



6) $19 \times 10 =$



Ответы

1. 460

2. 130

3. 110

4. 170


5. 160

6. 190




Используйте матрицу для решения задачи.


1) $33 \times 20 =$




2) $22 \times 20 =$




3) $10 \times 13 =$




4) $15 \times 10 =$



5) $10 \times 14 =$



6) $12 \times 10 =$



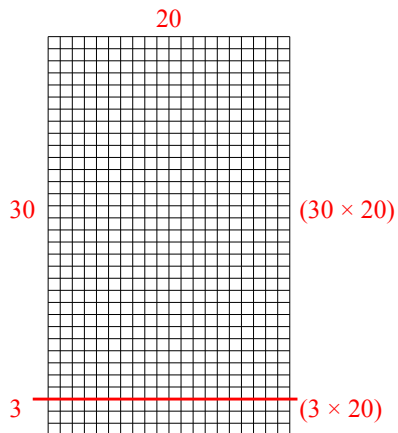
Отвeты

- 1. _____
- 2. _____
- 3. _____
- 4. _____
- 5. _____
- 6. _____

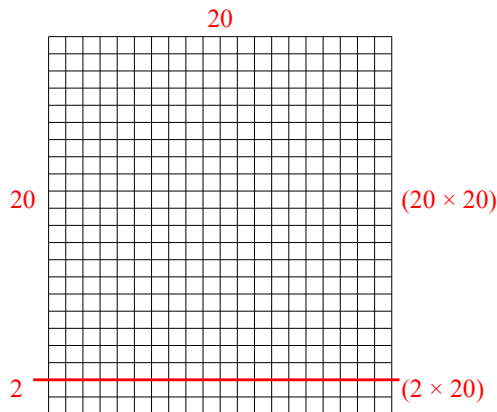


Используйте матрицу для решения задачи.

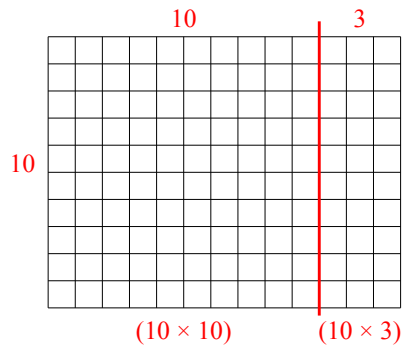
1) $33 \times 20 =$



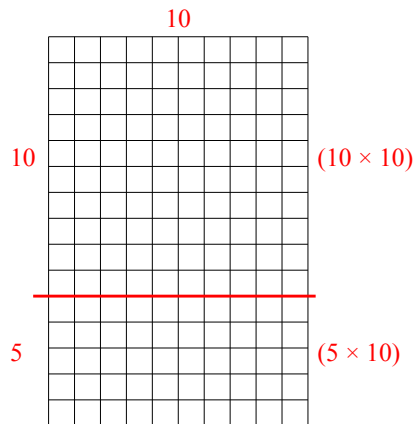
2) $22 \times 20 =$



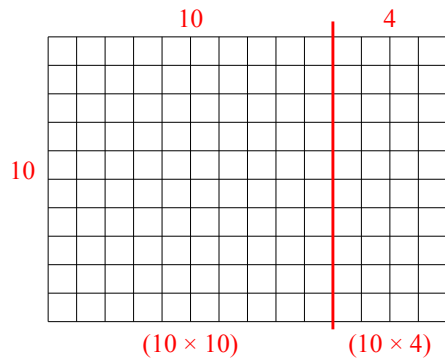
3) $10 \times 13 =$



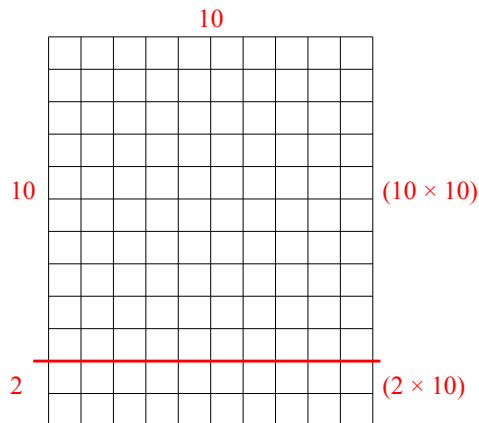
4) $15 \times 10 =$



5) $10 \times 14 =$



6) $12 \times 10 =$



Ответы

1. 660

2. 440

3. 130

4. 150


5. 140

6. 120




Используйте матрицу для решения задачи.


1) $10 \times 13 =$




2) $18 \times 10 =$




3) $14 \times 10 =$




4) $16 \times 10 =$



5) $10 \times 15 =$



6) $10 \times 14 =$



Отвeты

1. _____

2. _____

3. _____

4. _____

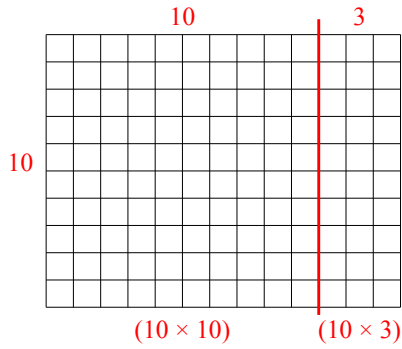
5. _____

6. _____

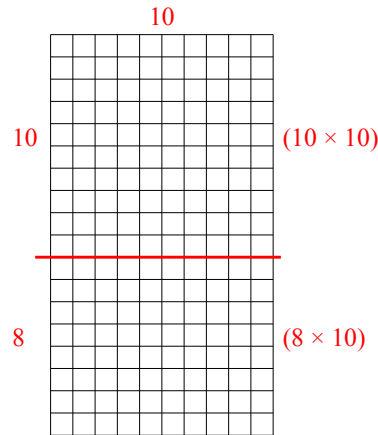


Используйте матрицу для решения задачи.

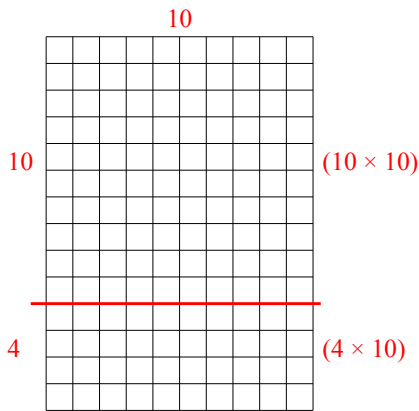
1) $10 \times 13 =$



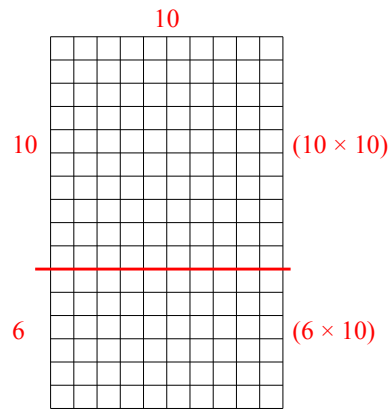
2) $18 \times 10 =$



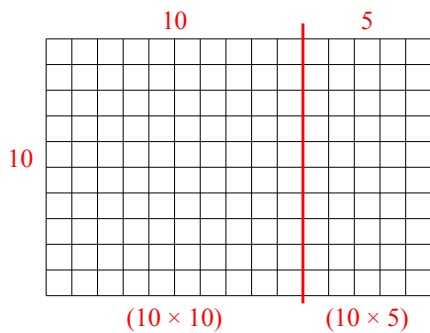
3) $14 \times 10 =$



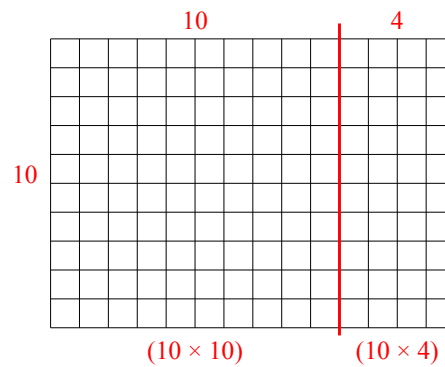
4) $16 \times 10 =$



5) $10 \times 15 =$



6) $10 \times 14 =$



Ответы

1. 130

2. 180

3. 140

4. 160


5. 150

6. 140




Используйте матрицу для решения задачи.


1) $20 \times 22 =$




2) $10 \times 13 =$




3) $15 \times 10 =$




4) $16 \times 10 =$



5) $12 \times 10 =$



6) $10 \times 11 =$



Ответы

1. _____

2. _____

3. _____

4. _____

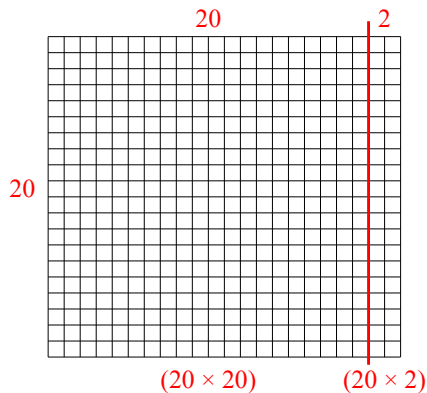
5. _____

6. _____

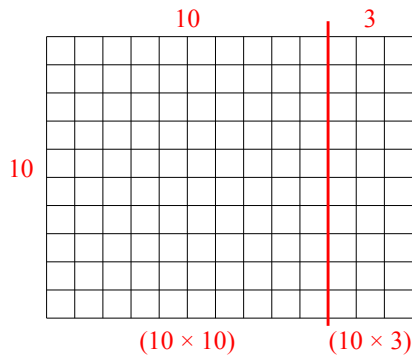


Используйте матрицу для решения задачи.

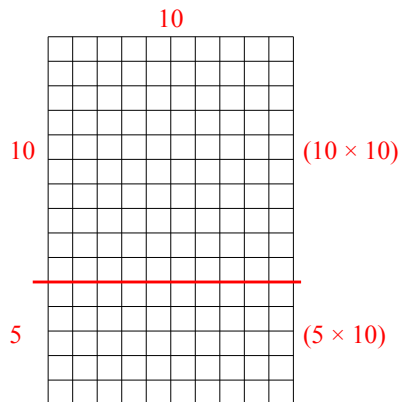
1) $20 \times 22 =$



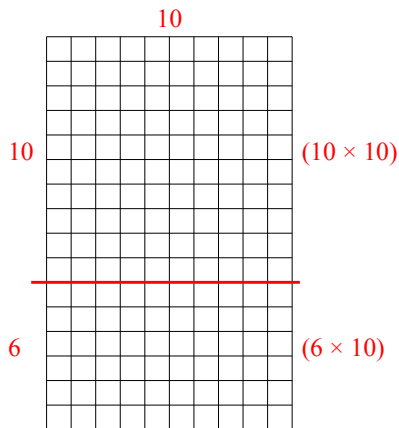
2) $10 \times 13 =$



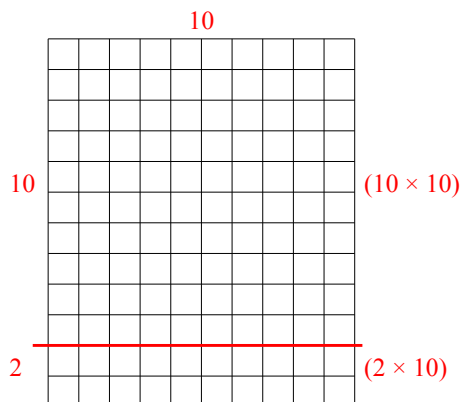
3) $15 \times 10 =$



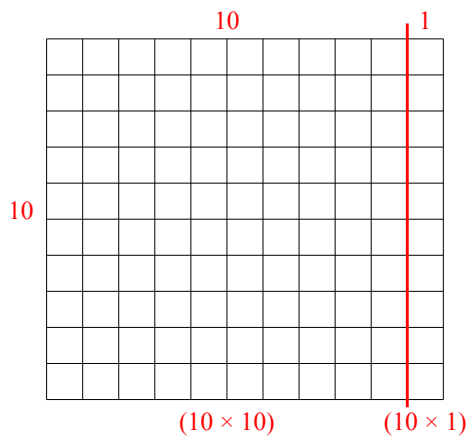
4) $16 \times 10 =$



5) $12 \times 10 =$



6) $10 \times 11 =$



Ответы

1. 440

2. 130

3. 150

4. 160


5. 120

6. 110




Используйте матрицу для решения задачи.


1) $22 \times 10 =$




2) $20 \times 27 =$




3) $10 \times 12 =$




4) $10 \times 19 =$



5) $13 \times 10 =$



6) $18 \times 10 =$



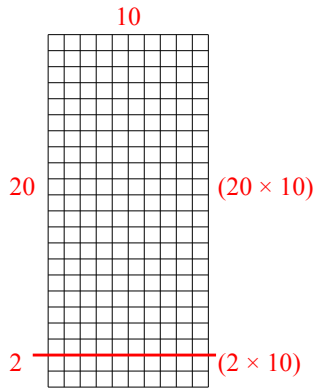
Отвeты

- 1. _____
- 2. _____
- 3. _____
- 4. _____
- 5. _____
- 6. _____

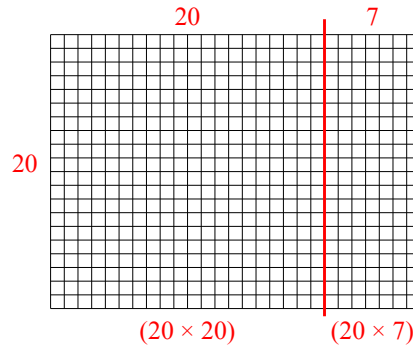


Используйте матрицу для решения задачи.

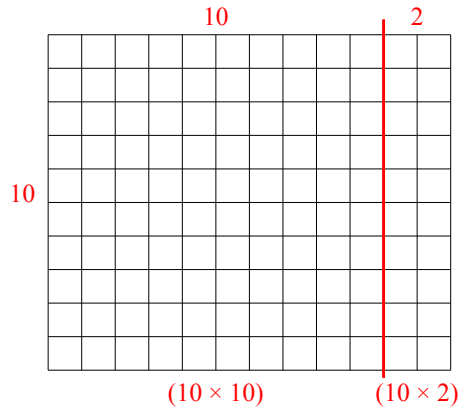
1) $22 \times 10 =$



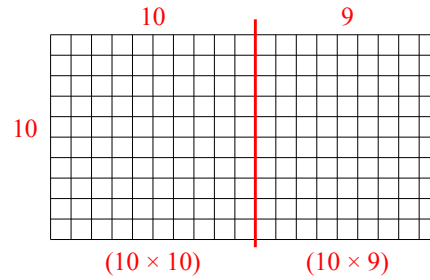
2) $20 \times 27 =$



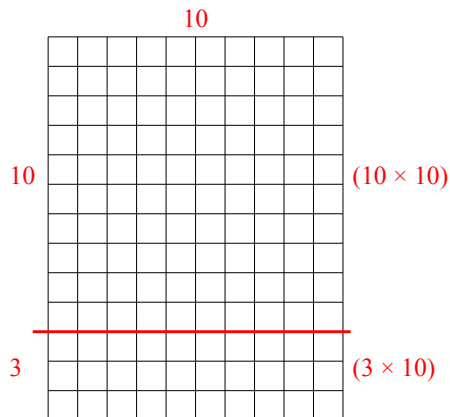
3) $10 \times 12 =$



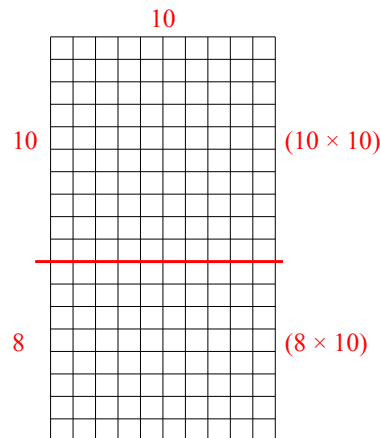
4) $10 \times 19 =$



5) $13 \times 10 =$



6) $18 \times 10 =$



Ответы

1. 220

2. 540

3. 120

4. 190


5. 130

6. 180




Используйте матрицу для решения задачи.


1) $13 \times 10 =$




2) $10 \times 18 =$




3) $10 \times 11 =$




4) $16 \times 10 =$



5) $10 \times 12 =$



6) $15 \times 10 =$



Отвeты

1. _____

2. _____

3. _____

4. _____

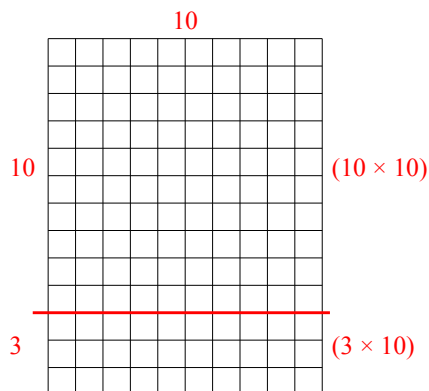
5. _____

6. _____

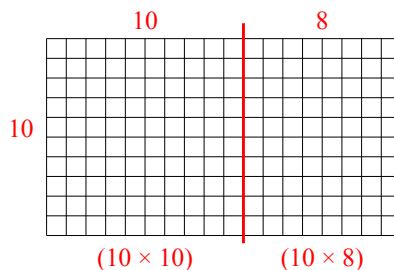


Используйте матрицу для решения задачи.

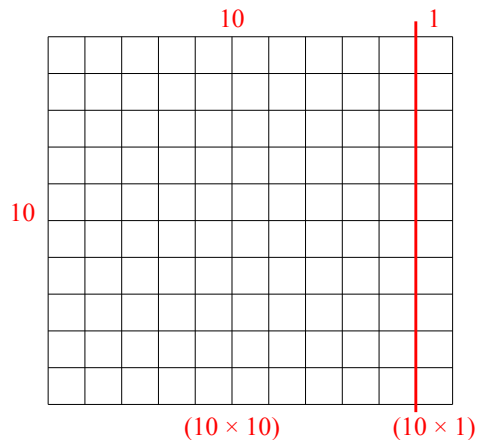
1) $13 \times 10 =$



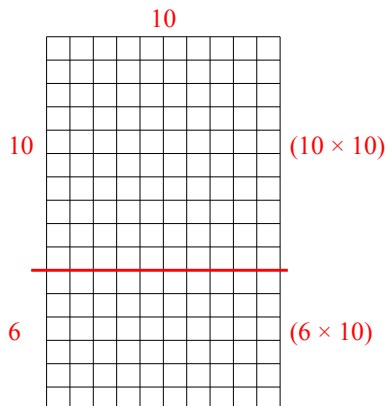
2) $10 \times 18 =$



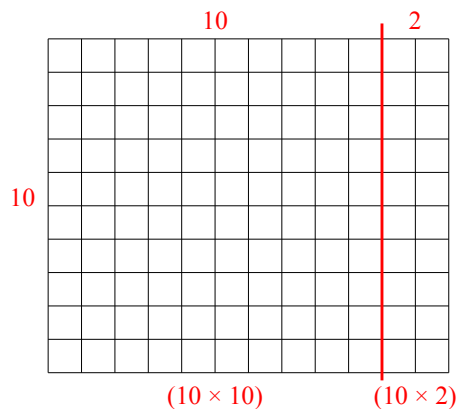
3) $10 \times 11 =$



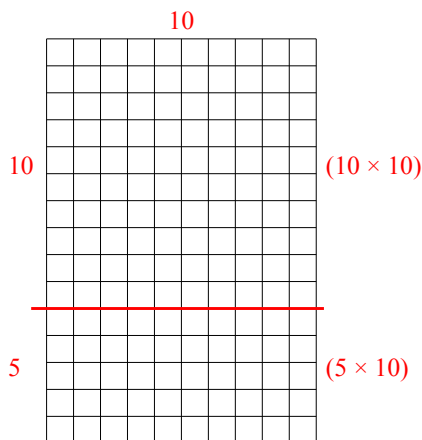
4) $16 \times 10 =$



5) $10 \times 12 =$



6) $15 \times 10 =$



Ответы

1. 130

2. 180

3. 110

4. 160


5. 120

6. 150




Используйте матрицу для решения задачи.


1) $10 \times 16 =$




2) $11 \times 10 =$




3) $10 \times 12 =$




4) $10 \times 18 =$



5) $10 \times 19 =$



6) $10 \times 13 =$

**Отвeты**

1. _____

2. _____

3. _____

4. _____

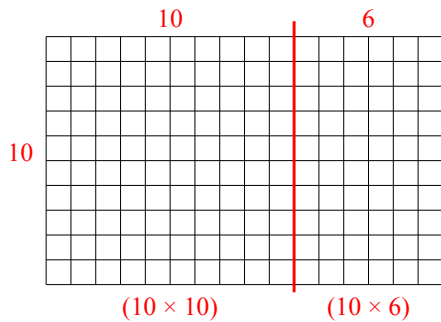
5. _____

6. _____

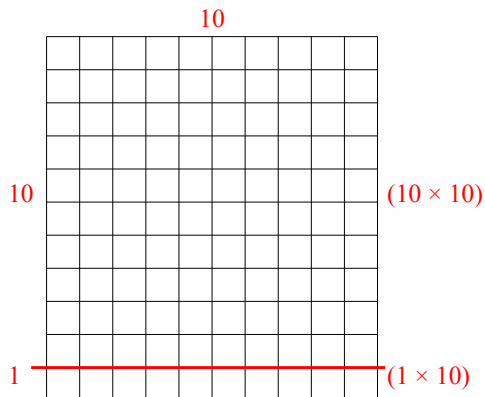


Используйте матрицу для решения задачи.

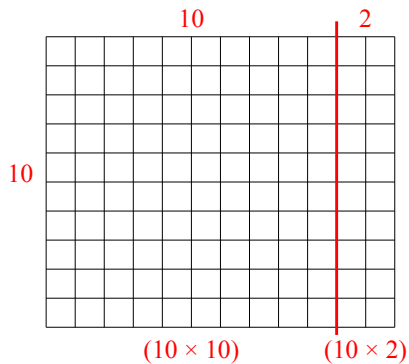
1) $10 \times 16 =$



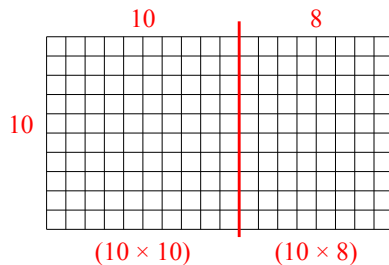
2) $11 \times 10 =$



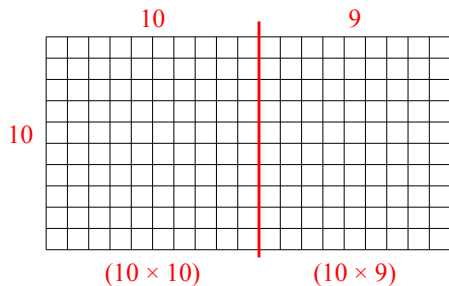
3) $10 \times 12 =$



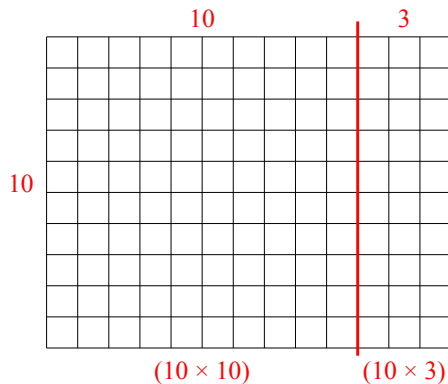
4) $10 \times 18 =$



5) $10 \times 19 =$



6) $10 \times 13 =$



Ответы

1. 160

2. 110

3. 120

4. 180

5. 190

6. 130