


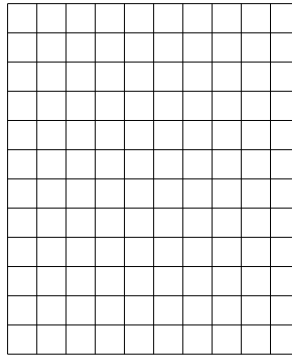


Используйте матрицу для решения задачи.

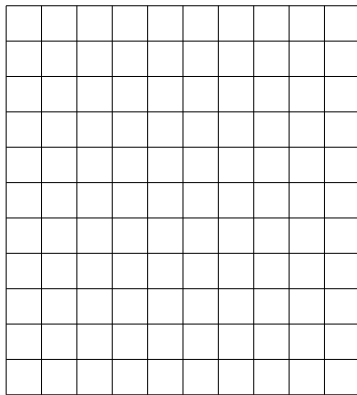
1)  $10 \times 15 =$




2)  $12 \times 10 =$




3)  $11 \times 10 =$




4)  $13 \times 10 =$



5)  $10 \times 16 =$



6)  $17 \times 10 =$



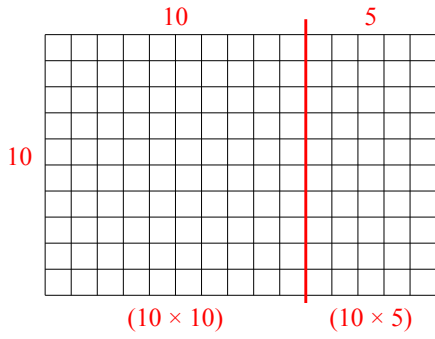
**Отвeты**

- 1. \_\_\_\_\_
- 2. \_\_\_\_\_
- 3. \_\_\_\_\_
- 4. \_\_\_\_\_
- 5. \_\_\_\_\_
- 6. \_\_\_\_\_

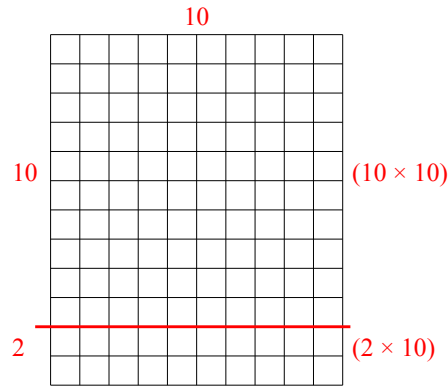


Используйте матрицу для решения задачи.

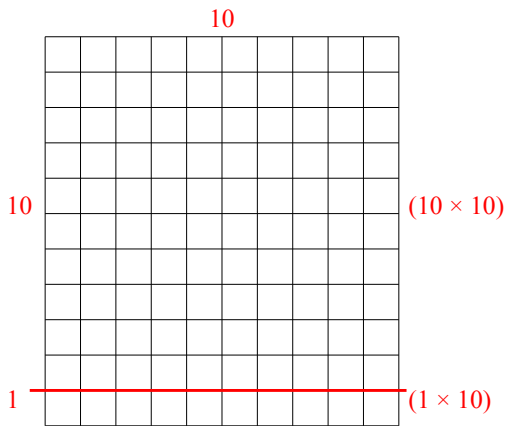
1)  $10 \times 15 =$



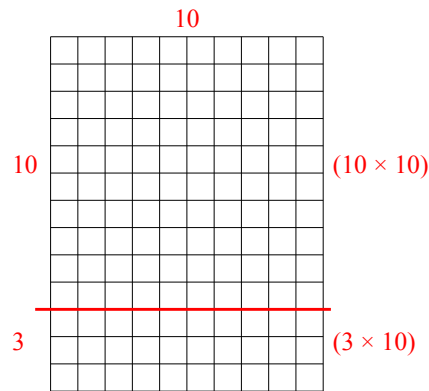
2)  $12 \times 10 =$



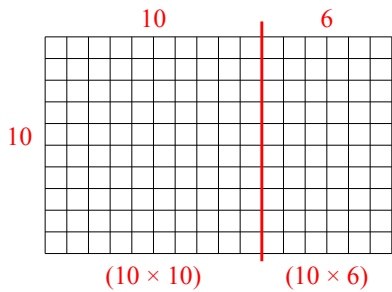
3)  $11 \times 10 =$



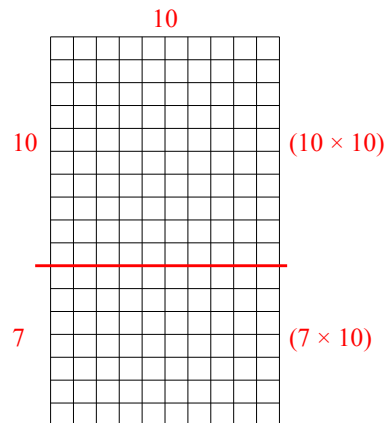
4)  $13 \times 10 =$



5)  $10 \times 16 =$



6)  $17 \times 10 =$



**Ответы**

- 1. 150
- 2. 120
- 3. 110
- 4. 130
- 5. 160
- 6. 170