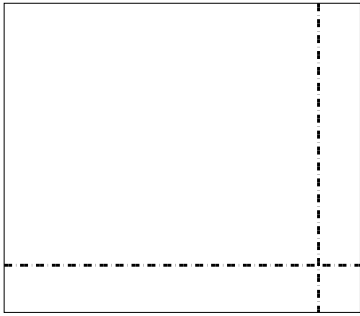


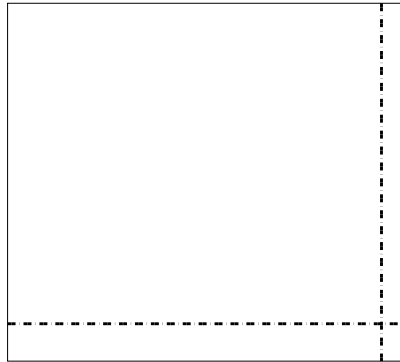


Используйте матрицу для решения задачи.


1)  $59 \times 68 =$




2)  $67 \times 75 =$




3)  $53 \times 36 =$




4)  $42 \times 55 =$



5)  $43 \times 66 =$



6)  $44 \times 28 =$



**Отвeты**

1. \_\_\_\_\_

2. \_\_\_\_\_

3. \_\_\_\_\_

4. \_\_\_\_\_

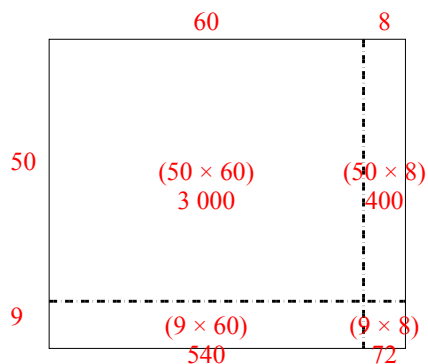
5. \_\_\_\_\_

6. \_\_\_\_\_

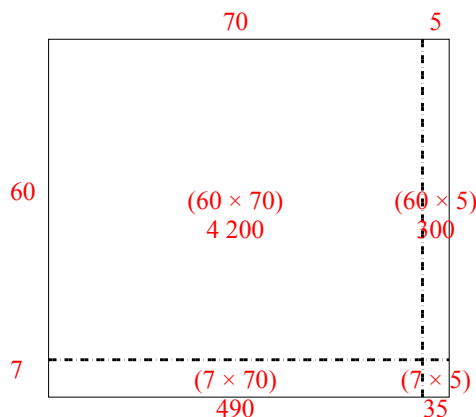


Используйте матрицу для решения задачи.

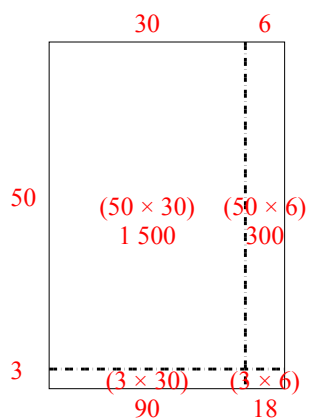
1)  $59 \times 68 =$



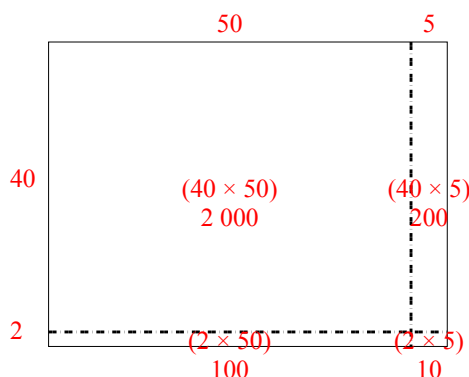
2)  $67 \times 75 =$



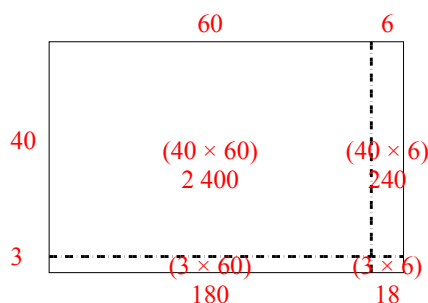
3)  $53 \times 36 =$



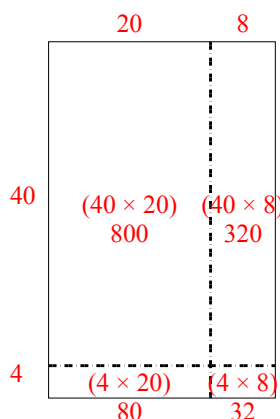
4)  $42 \times 55 =$



5)  $43 \times 66 =$



6)  $44 \times 28 =$



**Ответы**

1. 4 012

2. 5 025

3. 1 908

4. 2 310

5. 2 838

6. 1 232