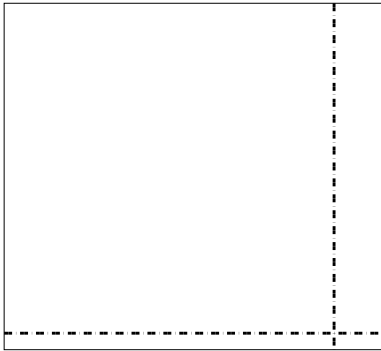





Используйте матрицу для решения задачи.


1)  $63 \times 69 =$




2)  $66 \times 53 =$




3)  $42 \times 53 =$




4)  $53 \times 72 =$



5)  $62 \times 75 =$



6)  $74 \times 88 =$



Отвeты

1. \_\_\_\_\_

2. \_\_\_\_\_

3. \_\_\_\_\_

4. \_\_\_\_\_

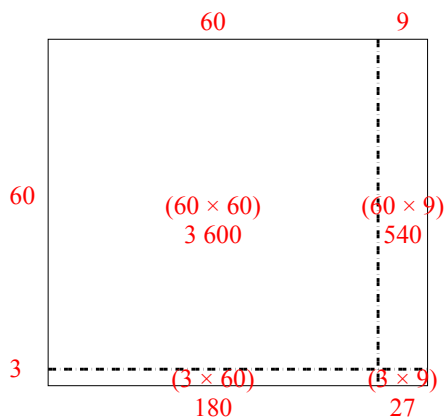
5. \_\_\_\_\_

6. \_\_\_\_\_

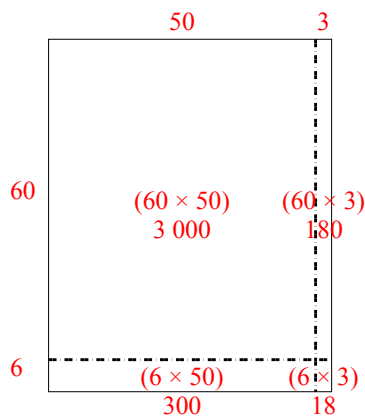


Используйте матрицу для решения задачи.

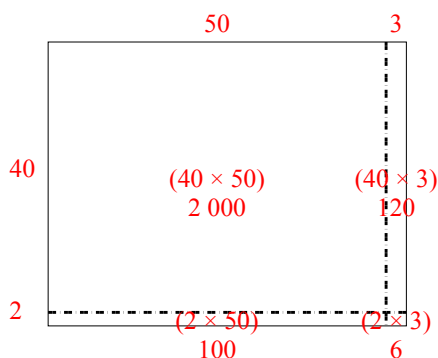
1)  $63 \times 69 =$



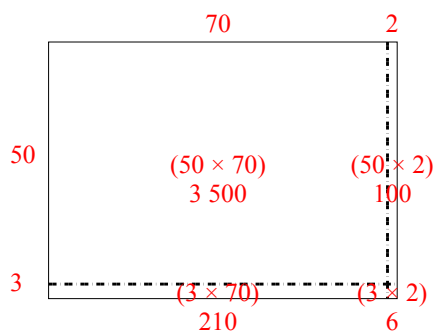
2)  $66 \times 53 =$



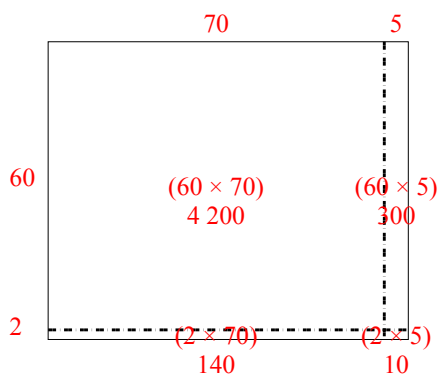
3)  $42 \times 53 =$



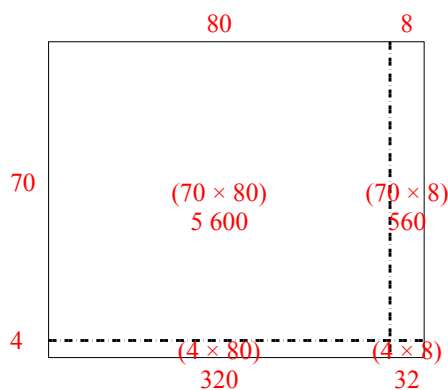
4)  $53 \times 72 =$



5)  $62 \times 75 =$



6)  $74 \times 88 =$



**Ответы**

1. 4 347

2. 3 498

3. 2 226

4. 3 816

5. 4 650

6. 6 512