





Используйте матрицу для решения задачи.


1) $38 \times 22 =$




2) $36 \times 44 =$




3) $48 \times 45 =$



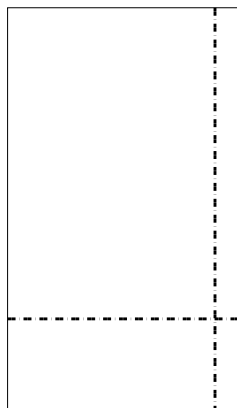
4) $49 \times 54 =$



5) $43 \times 29 =$



6) $39 \times 23 =$



Ответы

1. _____

2. _____

3. _____

4. _____

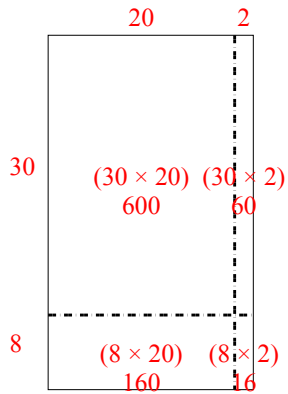
5. _____

6. _____

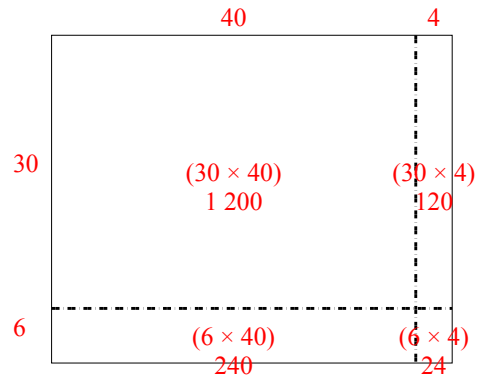


Используйте матрицу для решения задачи.

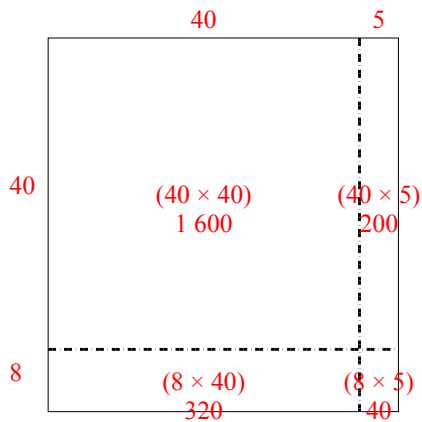
1) $38 \times 22 =$



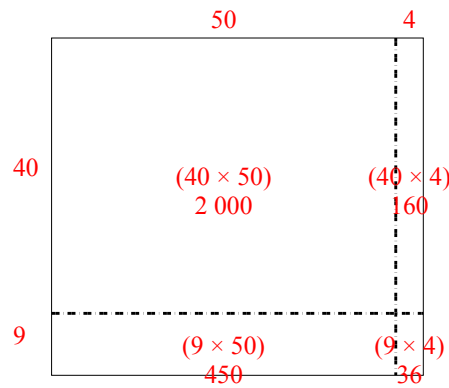
2) $36 \times 44 =$



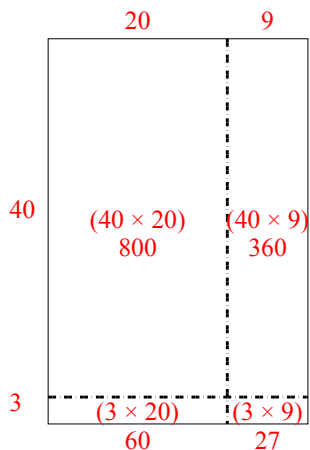
3) $48 \times 45 =$



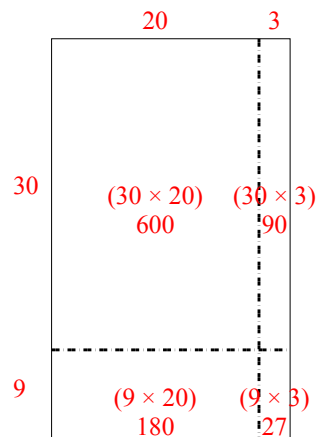
4) $49 \times 54 =$



5) $43 \times 29 =$



6) $39 \times 23 =$



Ответы

1. 836
2. 1 584
3. 2 160
4. 2 646
5. 1 247
6. 897