





Используйте матрицу для решения задачи.


1) $64 \times 43 =$




2) $33 \times 42 =$




3) $43 \times 54 =$



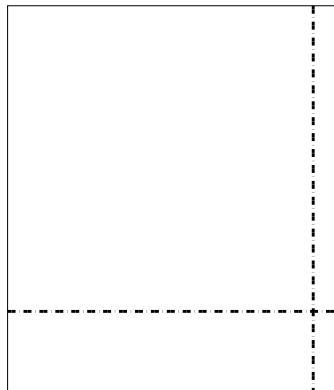
4) $46 \times 55 =$



5) $42 \times 35 =$



6) $38 \times 33 =$



Ответы

1. _____

2. _____

3. _____

4. _____

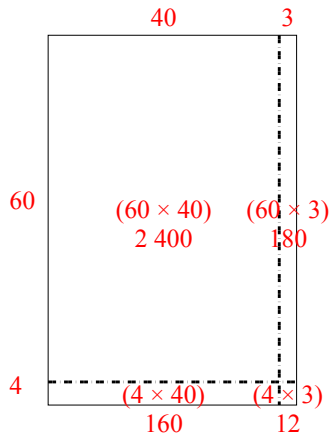
5. _____

6. _____

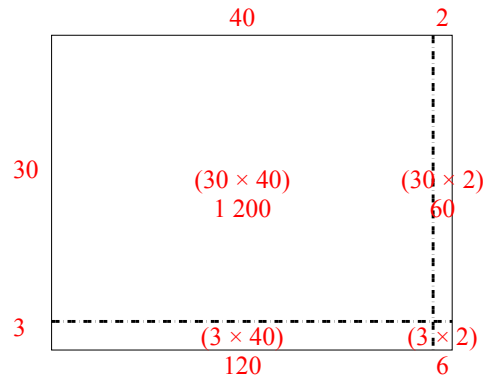


Используйте матрицу для решения задачи.

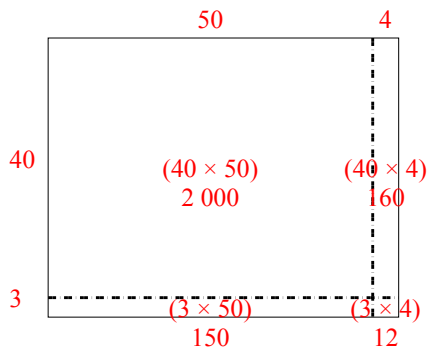
1) $64 \times 43 =$



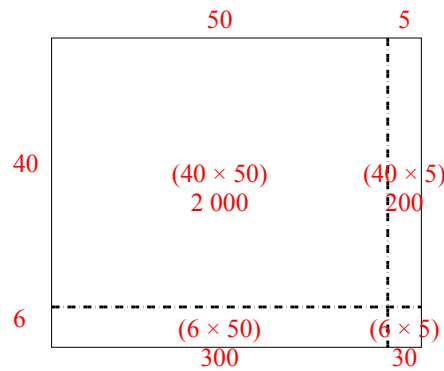
2) $33 \times 42 =$



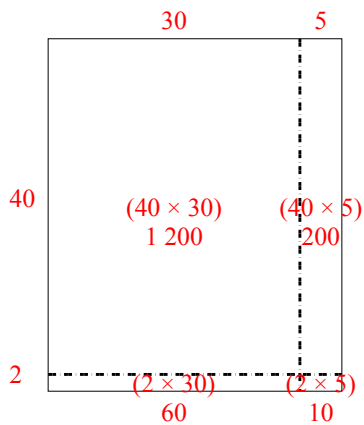
3) $43 \times 54 =$



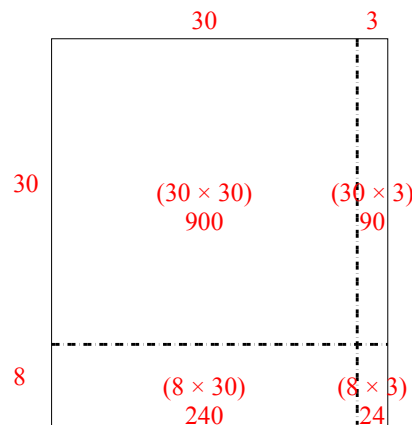
4) $46 \times 55 =$



5) $42 \times 35 =$



6) $38 \times 33 =$



Отвeты

1. 2 752

2. 1 386

3. 2 322

4. 2 530

5. 1 470

6. 1 254