





Используйте матрицу для решения задачи.


1)  $21 \times 20 =$




2)  $27 \times 20 =$



3)  $20 \times 23 =$




4)  $20 \times 27 =$



5)  $20 \times 29 =$



6)  $20 \times 25 =$



Отвeты

1. \_\_\_\_\_

2. \_\_\_\_\_

3. \_\_\_\_\_

4. \_\_\_\_\_

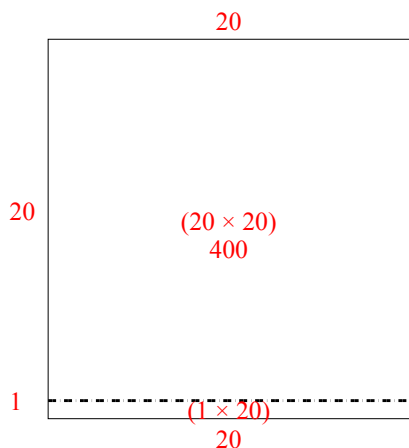
5. \_\_\_\_\_

6. \_\_\_\_\_

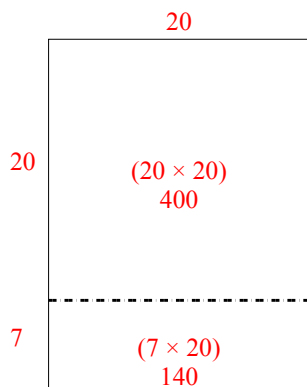


Используйте матрицу для решения задачи.

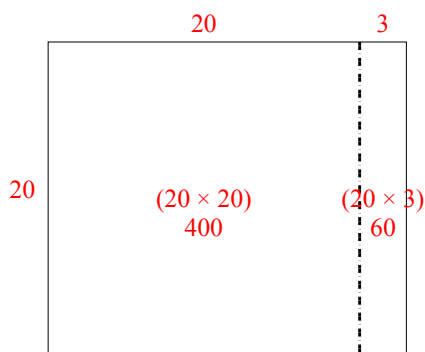
1)  $21 \times 20 =$



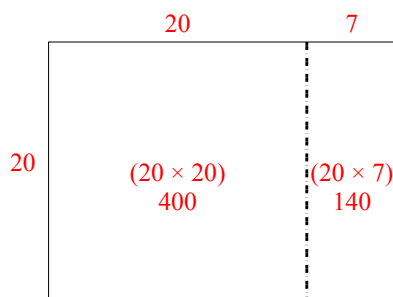
2)  $27 \times 20 =$



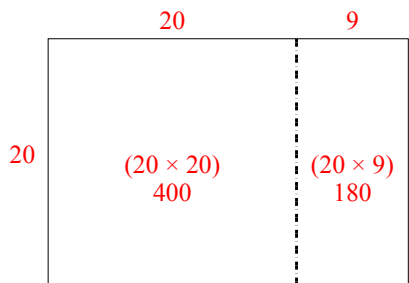
3)  $20 \times 23 =$



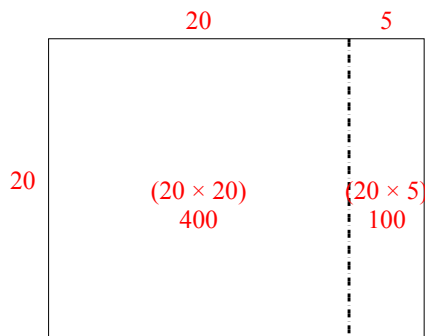
4)  $20 \times 27 =$



5)  $20 \times 29 =$



6)  $20 \times 25 =$



**Ответы**

- 1. 420
- 2. 540
- 3. 460
- 4. 540
- 5. 580
- 6. 500